




U.S. Department  
of Transportation  
**Federal Aviation  
Administration**

**FAA-H-8083-1**

# **Aircraft Weight and Balance Handbook**



# **Aircraft Weight and Balance Handbook**

**1999**

U.S. DEPARTMENT OF TRANSPORTATION  
**FEDERAL AVIATION ADMINISTRATION**

Flight Standards Service



# Preface

FAA-H-8083-1, *Aircraft Weight and Balance Handbook*, has been prepared in recognition of the importance of weight and balance technology in conducting safe and efficient flight. The objective of this handbook is twofold: to provide the Aviation Maintenance Technician (AMT) with the method of determining the empty weight and empty-weight center of gravity (EWCG) of an aircraft, and to furnish the flight crew with information on loading and operating the aircraft to ensure its weight is within the allowable limit and the center of gravity (CG) is within the allowable range.

Any time there is a conflict between the information in this handbook and specific information issued by an aircraft manufacturer, the manufacturer's data takes precedence over information in this handbook. Occasionally, the word *must* or similar language is used where the desired action is deemed critical. The use of such language is not intended to add to, interpret, or relieve a duty imposed by Title 14 of the Code of Federal Regulations (14 CFR).

This handbook supersedes Advisory Circular (AC) 91-23A, *Pilot's Weight and Balance Handbook*, revised in 1977.

Comments regarding this handbook should be sent to U.S. Department of Transportation, Federal Aviation Administration, Airman Testing Standards Branch, AFS-630, P.O. Box 25082, Oklahoma City, OK 73125.

This publication may be purchased from the Superintendent of Documents, P.O. Box 371954, Pittsburgh, PA 15250-7954, or from the U.S. Government Printing Office bookstores located in major cities throughout the United States.

AC 00-2, *Advisory Circular Checklist*, transmits the current status of Federal Aviation Administration (FAA) advisory circulars and other flight information publications. This checklist is free of charge and may be obtained by sending a request to U.S. Department of Transportation, Subsequent Distribution Office, SVC-121.23, Ardmore East Business Center, 3341 Q 75th Avenue, Landover, MD 20785. The checklist is also available on the Internet at <http://www.faa.gov/abc/ac-chklst/actoc.htm>.

## Acknowledgments

This book was produced as a combined FAA and industry effort.





# Introduction

This handbook begins with the basic principle of aircraft weight and balance control, emphasizing its importance and including examples of documentation furnished by the aircraft manufacturer and by the FAA to ensure the aircraft weight and balance records contain the proper data.

Procedures for the preparation and the actual weighing of an aircraft are described, as are the methods of determining the location of the empty-weight center of gravity (EWCG) relative to both the datum and the mean aerodynamic chord (MAC).

Loading computations for general aviation aircraft are discussed, using both loading graphs and tables of weight and moment indexes.

Information is included that allows an Aviation Maintenance Technician (AMT) to determine the weight and center of gravity (CG) changes caused by repairs and alterations. This includes instructions for conducting adverse-loaded CG checks, also explaining the way to determine the amount and location of ballast needed to bring the CG within allowable limits.

Weight and balance control for large aircraft is discussed, including cargo management, takeoff and landing conditions, and the determination of fuel dump time for emergency conditions. Examples are also given for weight and balance control of commuter category airplanes in both the passenger and cargo configuration.

The unique requirements for helicopter weight and balance control are discussed, including the determination of lateral CG and the way both lateral and longitudinal CG change as fuel is consumed.

A chapter is included giving the methods and examples of solving weight and balance problems, using hand-held electronic calculators, E6-B flight computers, and a dedicated electronic flight computer.



# Contents

Chapter 1	
Weight and Balance Control .....	1-1
Why is Weight and Balance Important? .....	1-1
Weight Control .....	1-2
Effects of Weight .....	1-2
Weight Changes .....	1-3
Stability and Balance Control .....	1-4
Chapter 2	
Weight and Balance Theory and Documentation .....	2-1
Weight and Balance Theory .....	2-1
Aircraft Arms, Weights, and Moments .....	2-1
The Law of the Lever .....	2-2
Determining the CG .....	2-2
Shifting the CG .....	2-4
Shifting the Airplane CG .....	2-6
Weight and Balance Documentation .....	2-7
FAA-Furnished Information .....	2-7
Manufacturer-Furnished Information .....	2-12
Chapter 3	
Weighing the Aircraft and Determining the Empty-Weight Center of Gravity .....	3-1
Requirements .....	3-1
Equipment for Weighing .....	3-1
Preparation for Weighing .....	3-2
Weigh Clean Aircraft Inside Hangar .....	3-2
Equipment List .....	3-2
Ballast .....	3-3
Draining the Fuel .....	3-3
Oil .....	3-3
Other Fluids .....	3-3
Configuration of the Aircraft .....	3-3
Jacking the Aircraft .....	3-3
Leveling the Aircraft .....	3-4
Determining the Center of Gravity .....	3-4
Empty-Weight Center of Gravity Formulas .....	3-5
Datum Forward of the Airplane —	
Nose Wheel Landing Gear .....	3-5
Datum Aft of the Main Wheels —	
Nose Wheel Landing Gear .....	3-6
Datum Forward of the Main Wheels —	
Tail Wheel Landing Gear .....	3-6
Datum Aft of the Main Wheels —	
Tail Wheel Landing Gear .....	3-7
Location with Respect to the Mean Aerodynamic Chord .....	3-7
Chapter 4	
General Aviation Aircraft Operational Weight and Balance Computations .....	4-1
Determining the Loaded Weight and CG .....	4-1
Computational Method .....	4-1
Loading Graph Method .....	4-2
Multiengine Airplane Weight and Balance Computations .....	4-6
Determining the Loaded CG .....	4-6
The Chart Method Using Weight, Arm, and Moments .....	4-7
Determining the CG in Percent of MAC .....	4-7
The Chart Method Using Weight and Moment Indexes .....	4-7
Chapter 5	
Center of Gravity Change After Repair or Alteration .....	5-1
Equipment List .....	5-1
Weight and Balance Revision Record .....	5-3
Weight Changes Caused by a Repair or Alteration .....	5-3
Computations Using Weight, Arm, and Moment ...	5-3
Computations Using Weight and Moment Indexes .....	5-4
Empty-Weight CG Range .....	5-4
Adverse-Loaded CG Checks .....	5-4
Forward Adverse-Loaded CG Check .....	5-5
Aft Adverse-Loaded CG Check .....	5-6
Ballast .....	5-7
Temporary Ballast .....	5-7
Permanent Ballast .....	5-7



Chapter 6	
Weight and Balance Control—	
Large Aircraft .....	6-1
Weighing Requirements .....	6-1
Individual Aircraft Weight .....	6-1
Fleet Weights .....	6-2
Weighing Procedures .....	6-2
Locating and Monitoring Weight and CG Location .....	6-2
Determining the Empty Weight and EWCG .....	6-2
Determining the Loaded CG of the Airplane	
in Percent MAC .....	6-3
On Board Aircraft Weighing System .....	6-3
Determining the Correct Stabilizer Trim Setting .....	6-5
Stabilizer Trim Setting in % MAC .....	6-5
Stabilizer Trim Setting in Units ANU	
(Airplane Nose Up) .....	6-5
Determining CG Changes Caused by	
Modifying the Cargo .....	6-5
Effects of Loading or Offloading Cargo .....	6-5
Effects of Onloading Cargo .....	6-6
Effects of Shifting Cargo from	
One Hold to Another .....	6-8
Determining Cargo Pallet Loads with	
Regard to Floor Loading Limits .....	6-9
Determining the Maximum Amount of Payload	
That Can Be Carried .....	6-10
Determining the Landing Weight .....	6-10
Determining the Minutes of Fuel Dump Time .....	6-12
Weight and Balance of Commuter	
Category Airplanes .....	6-13
Determining the Loaded Weight and CG .....	6-13
Determining the Changes in CG When	
Passengers are Shifted .....	6-17
Determining Changes in Weight and CG	
When the Airplane is Operated in	
its Cargo Configuration .....	6-18
Determining the CG Shift When Cargo is Moved	
From One Section to Another .....	6-18
Determining the CG Shift When Cargo is	
Added or Removed .....	6-19
Determining Which Limits are Exceeded .....	6-19

Chapter 7	
Weight and Balance Control—Helicopters .....	7-1
Determining the Loaded CG of a Helicopter .....	7-2
Effects of Offloading Passengers and Using Fuel ..	7-3
Chapter 8	
Use of Computers for Weight	
and Balance Computations .....	8-1
Using an Electronic Calculator to Solve	
Weight and Balance Problems .....	8-1
Using an E6-B Flight Computer to Solve	
Weight and Balance Problems .....	8-1
Using a Dedicated Electronic Flight Computer to	
Solve Weight and Balance Problems .....	8-3
Typical Weight and Balance Problems .....	8-3
Determining CG in Inches From the Datum .....	8-3
Determining CG, Given Weights and Arms .....	8-5
Determining CG, Given Weights and	
Moment Indexes .....	8-5
Determining CG in Percent of	
Mean Aerodynamic Chord .....	8-6
Determining Lateral CG of a Helicopter .....	8-6
Determining DCG Caused by Shifting Weights .....	8-6
Determining Weight Shifted to Cause	
Specified DCG .....	8-7
Determining Distance Weight is Shifted to	
Move CG a Specific Distance .....	8-7
Determining Total Weight of an Aircraft That Will	
Have a Specified DCG When Cargo is Moved ...	8-7
Determining Amount of Ballast Needed to	
Move CG to a Desired Location .....	8-7
Appendix	
<i>Supplemental Study Materials</i>	
<i>for Aircraft Weight and Balance</i> .....	Appendix-1
Glossary .....	Glossary-1
Index .....	Index-1

## Chapter 1

# Weight and Balance Control

### Why is Weight and Balance Important?

Weight and balance is one of the most important factors affecting safety of flight. An overweight aircraft, or one whose center of gravity is outside the allowable limits, is inefficient and dangerous to fly. The responsibility for proper weight and balance control begins with the engineers and designers and extends to the pilot who operates and the Aviation Main-tenance Technician (AMT) who maintains the aircraft.

Modern aircraft are engineered utilizing state-of-the-art technology and materials to lift the maximum amount of weight and carry it the greatest distance at the highest speed. As much care and expertise must be exercised in operating and maintaining these efficient aircraft as was taken in their design and manufacturing.

Various types of aircraft have different load requirements. Transport aircraft must carry huge loads of passengers and cargo for long distances at high altitude and high speed. Military aircraft must be highly maneuverable and extremely sturdy. Corporate aircraft must carry a reasonable load at a high speed for long distances. Agricultural aircraft must carry large loads short distances and be extremely maneuverable. Trainers and private aircraft must be lightweight, low cost, simple, and safe to operate.

All aircraft regardless of their function have two characteristics in common: all are sensitive to weight, and the center of gravity of the aircraft must be maintained within a specified range.

**Maximum weight:** The maximum authorized weight of the aircraft and all of its equipment as specified in the Type Certificate Data Sheets (TCDS) for the aircraft.

**Center of gravity (CG):** The point at which an airplane would balance if suspended. Its distance from the reference datum is found by dividing the total moment by the total weight of the airplane.

The designers of an aircraft have determined the **maximum weight**, based on the amount of lift the wings or rotors can provide under the operating conditions for which the aircraft is designed. The structural strength of the aircraft also limits the maximum weight the aircraft can safely carry. The ideal location of the **center of gravity (CG)** was very carefully determined by the designers, and the maximum deviation allowed from this specific location has been calculated.

The manufacturer provides the aircraft operator with the **empty weight** of the aircraft and the location of its **empty-weight center of gravity (EWCG)** at the time the aircraft left the factory. The AMT who maintains the aircraft and performs the maintenance inspections keeps the weight and balance records current, recording any changes that have been made because of repairs or alterations.

The pilot in command of the aircraft has the responsibility on every flight to know the maximum allowable gross weight of the aircraft and its CG limits. This allows the pilot to determine on the preflight inspection that the aircraft is loaded in such a way that the CG is within the allowable limits.

Weight and balance technology, like all other aspects of aviation, has become more complex as the efficiency and capability of aircraft and engines have increased. Therefore, this requires all pilots and AMTs to understand weight and balance control, and to operate and maintain their aircraft so its weight and CG location are within the limitations established when the aircraft was designed, manufactured, and certified by the FAA.

**Empty weight:** The weight of the airframe, engines, and all items of operating equipment that have fixed locations and are permanently installed in the aircraft.

**Empty-weight center of gravity (EWCG):** The center of gravity of an aircraft, when the aircraft contains only the items specified in the aircraft empty weight.

## Weight Control

Weight is a major factor in airplane construction and operation, and it demands respect from all pilots and particular diligence by all AMTs. **Excessive weight reduces the efficiency of an aircraft and the safety margin available if an emergency condition should arise.**

When an aircraft is designed, it is made as light as the required structural strength will allow, and the wings or rotors are designed to support the maximum allowable gross weight. When the weight of an aircraft is increased, the wings or rotors must produce additional lift and the structure must support not only the additional **static loads**, but also the **dynamic loads** imposed by flight maneuvers. For example, the wings of a 3,000-pound airplane must support 3,000 pounds in level flight, but when the airplane is turned smoothly and sharply using a bank angle of 60°, the dynamic load requires the wings to support twice this, or 6,000 pounds.

Severe uncoordinated maneuvers or flight into turbulence can impose dynamic loads on the structure great enough to cause failure. The structure of a normal category airplane must be strong enough to sustain a **load factor** of 3.8 times its weight; that is, every pound of weight added to an aircraft requires that the structure be strong enough to support an additional 3.8 pounds. An aircraft operating in the utility category must sustain a load factor of 4.4, and acrobatic category aircraft must be strong enough to withstand 6.0 times their weight.

The lift produced by a wing is determined by its airfoil shape, angle of attack, speed through the air, and the air density. When an aircraft takes off from an airport with a high **density altitude**, it must accelerate to a speed faster than would be required at sea level to produce enough lift to allow takeoff; therefore, a longer takeoff run is necessary. The distance needed may be longer than the available runway. When operating from a high density altitude airport, the **Pilot's Operating Handbook (POH)** or **Airplane Flight Manual (AFM)** must be consulted to determine the maximum weight allowed for the aircraft under the conditions of altitude, temperature, wind, and runway conditions.

**Static load:** The load imposed on an aircraft structure due to the weight of the aircraft and its contents.

**Dynamic load:** The actual weight of the aircraft multiplied by the load factor, or the increase in weight caused by acceleration.

**Load factor:** The ratio of the maximum load an aircraft can sustain to the total weight of the aircraft. Normal category aircraft must have a load factor of at least 3.8, utility category aircraft 4.4, and acrobatic category aircraft, 6.0.

## Effects of Weight

Most modern aircraft are so designed that if all seats are occupied, all baggage allowed by the baggage compartment structure is carried, and all of the fuel tanks are full, the aircraft will be grossly overloaded. This type of design gives the pilot a great deal of latitude in loading the aircraft for a particular flight. If maximum range is required, occupants or baggage must be left behind, or if the maximum load must be carried, the range, dictated by the amount of fuel on board, must be reduced.

Some of the problems caused by overloading an aircraft are:

- The aircraft will need a higher takeoff speed, which results in a longer takeoff run.
- Both the rate and angle of climb will be reduced.
- The **service ceiling** will be lowered.
- The cruising speed will be reduced.
- The cruising range will be shortened.
- Maneuverability will be decreased.
- A longer landing roll will be required because the landing speed will be higher.
- Excessive loads will be imposed on the structure, especially the landing gear.

The POH or AFM includes tables or charts that give the pilot an indication of the performance expected for any gross weight. An important part of careful preflight planning includes a check of these charts to determine the aircraft is loaded so the proposed flight can be safely made.

### High Density Altitude Airport Operations

Consult the POH or AFM to determine the maximum weight allowed for the aircraft under the conditions of altitude, temperature, wind, and runway conditions.

Your preflight planning must include a careful check of gross weight performance charts to determine the aircraft is loaded properly and the proposed flight can be safely made.

**Density altitude:** Pressure altitude corrected for nonstandard temperature.

**Pilot's Operating Handbook (POH):** An FAA-approved document published by the airframe manufacturer that lists the operating conditions for a particular model of aircraft and its engines.

**Airplane Flight Manual (AFM):** An FAA-approved document, prepared by the holder of a Type Certificate for an airplane or rotorcraft, that specifies the operating limitations and contains the required markings and placards and other information applicable to the regulations under which the aircraft was certificated.

## Weight Changes

The maximum allowable gross weight for an aircraft is determined by design considerations. However, the maximum operational weight may be less than the maximum allowable due to such considerations as high density altitude or high-drag field conditions caused by wet grass or water on the runway. The maximum gross weight may also be limited by the departure or arrival airport's runway length.

One important preflight consideration is the distribution of the load in the aircraft. **Loading an aircraft so the gross weight is less than the maximum allowable is not enough. This weight must be distributed to keep the CG within the limits specified in the POH or AFM.**

If the CG is too far forward, a heavy passenger can be moved to one of the rear seats or baggage can be shifted from a forward baggage compartment to a rear compartment. If the CG is too far aft, passenger weight or baggage can be shifted forward. The fuel load should be **balanced laterally**: the pilot should pay special attention to the POH or AFM regarding the operation of the fuel system, in order to keep the aircraft balanced in flight.

Weight and balance of a helicopter is far more critical than for an airplane. A helicopter may be properly loaded for takeoff, but near the end of a long flight when the fuel tanks are almost empty, the CG may have shifted enough for the helicopter to be out of balance laterally or longitudinally. Before making any long flight, the CG with the fuel available for landing must be checked to ensure it will be within the allowable range.

Airplanes with tandem seating normally have a limitation requiring solo flight to be made from the front seat in some airplanes or the rear seat in others. Some of the smaller helicopters also require solo flight be made from a specific seat, either the right or the left. These seating limitations will be noted by a placard, usually on the instrument panel, and they should be strictly adhered to.

**Service ceiling:** The highest altitude at which an aircraft can maintain a steady rate of climb of 100 feet per minute.

As an aircraft ages, its weight usually increases due to trash and dirt collecting in hard-to-reach locations, and moisture absorbed in the cabin insulation. This growth in weight is normally small, but it can only be determined by accurately weighing the aircraft.

Changes of fixed equipment may have a major effect upon the weight of the aircraft. Many aircraft are overloaded by the installation of extra radios or instruments. Fortunately, the replacement of older, heavy electronic equipment with newer, lighter types results in a weight reduction. This weight change, however helpful, will probably cause the CG to shift and this must be computed and annotated in the weight and balance data.

Repairs and alterations are the major sources of weight changes, and it is the responsibility of the AMT making any repair or alteration to know the weight and location of these changes, and to compute the new CG and record the new empty weight and EWCG in the aircraft weight and balance data.

The AMT conducting an annual or 100-hour inspection must ensure the weight and balance data in the aircraft records is current and accurate. It is the responsibility of the pilot in command to use the most current weight and balance data when operating the aircraft.

### Has the Aircraft Gained Weight?

As an aircraft ages, its weight usually increases. Repairs and alterations are the major sources of weight change.

AMTs conducting an annual or 100-hour inspection must ensure the weight and balance data in the aircraft records is current and accurate. The pilot in command's responsibility is to use the most current weight and balance data when planning a flight.

**Balanced laterally:** Balanced in such a way that the wings tend to remain level.



## Stability and Balance Control

Balance control refers to the location of the CG of an aircraft. This is of primary importance to aircraft stability, which determines safety in flight.

**The CG is the point at which the total weight of the aircraft is assumed to be concentrated, and the CG must be located within specific limits for safe flight.** Both lateral and **longitudinal balance** are important, but the prime concern is longitudinal balance; that is, the location of the CG along the **longitudinal** or lengthwise **axis**.

An airplane is designed to have stability that allows it to be trimmed so it will maintain straight and level flight with hands off of the controls. Longitudinal stability is maintained by ensuring the CG is slightly ahead of the center of lift. This produces a fixed nose-down force independent of the airspeed. This is balanced by a variable nose-up force, which is produced by a downward aerodynamic force on the horizontal tail surfaces that varies directly with airspeed. [Figure 1-1]

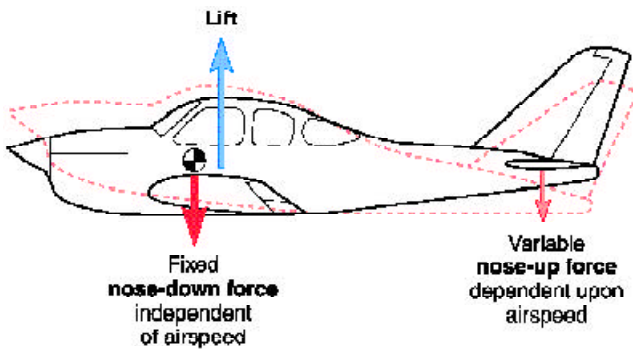


Figure 1-1. Longitudinal forces acting on an airplane in flight.

If a rising air current should cause the nose to pitch up, the airplane will slow down and the downward force on the tail will decrease. The weight concentrated at the CG will pull the nose back down. If the nose should drop in flight, the airspeed will increase and the increased downward tail load will bring the nose back up to level flight.

**Longitudinal balance:** Balance around the pitch, or lateral, axis.

**Longitudinal axis:** An imaginary line through an aircraft from nose to tail, passing through its center of gravity.

As long as the CG is maintained within the allowable limits for its weight, the airplane will have adequate longitudinal stability and control. If the CG is too far aft, it will be too near the **center of lift** and the airplane will be unstable, and difficult to recover from a stall. [Figure 1-2] If the unstable airplane should ever enter a spin, the spin could become flat and recovery would be difficult or impossible.

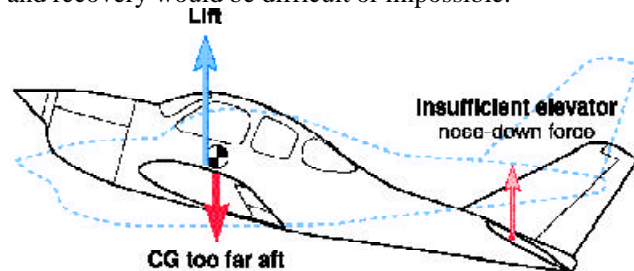


Figure 1-2. If the CG is too far aft, at the low stall airspeed there might not be enough elevator nose-down force to get the nose down for recovery.

If the CG is too far forward, the downward tail load will have to be increased to maintain level flight. This increased tail load has the same effect as carrying additional weight — the aircraft will have to fly at a higher angle of attack, and drag will increase.

A more serious problem caused by the CG being too far forward is the lack of sufficient elevator authority. At slow takeoff speeds, the elevator might not produce enough nose-up force to rotate and on landing there may not be enough elevator force to flare the airplane. [Figure 1-3] Both takeoff and landing runs will be lengthened if the CG is too far forward.

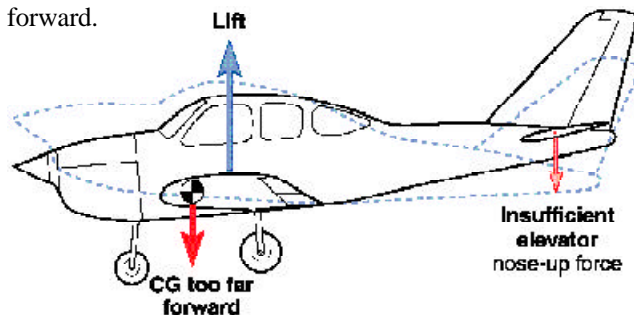


Figure 1-3. If the CG is too far forward, there will not be enough elevator nose-up force to flare the airplane for landing.

**Center of lift:** The location along the chord line of an airfoil at which all the lift forces produced by the airfoil are considered to be concentrated.

The efficiency of some modern high-performance military fighter airplanes is increased by giving them neutral longitudinal stability. This is normally a very dangerous situation; but these aircraft are flown by autopilots which react far faster than a human pilot, and they are safe for their special operations.

The basic aircraft design assumes that lateral symmetry exists. For each item of weight added to the left of the centerline of the aircraft (also known as **buttck line zero**, or BL-0), there is generally an equal weight at a corresponding location on the right.

The **lateral balance** can be upset by uneven fuel loading or burnoff. The position of the lateral CG is not normally computed for an airplane, but the pilot must be aware of the adverse effects that will result from a laterally unbalanced condition. [Figure 1-4] This is corrected by using the aileron trim tab until enough fuel has been used from the tank on the heavy side to balance the airplane. The deflected trim tab deflects the aileron to produce additional lift on the heavy side, but it also produces additional drag, and the airplane

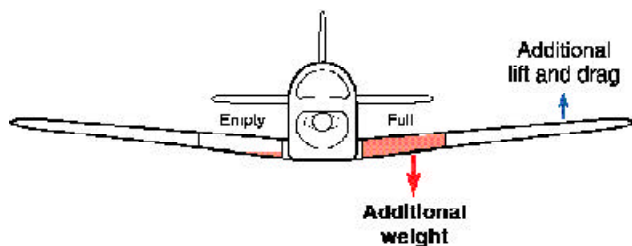


Figure 1-4. Lateral imbalance causes wing heaviness, which may be corrected by deflecting the aileron. The additional lift causes additional drag and the airplane flies inefficiently.

flies inefficiently.

Helicopters are affected by lateral imbalance more than airplanes. If a helicopter is loaded with heavy occupants and fuel on the same side, it could be enough out of balance to make it unsafe to fly. It is also possible that if external loads are carried in such a position to require large lateral displacement of the cyclic control to maintain level flight, the fore-and-aft cyclic control effectiveness will be limited.

**Butt (or buttock) line zero:** A line through the symmetrical center of an aircraft from nose to tail. It serves as the datum for measuring the arms used to find the lateral CG. Lateral moments that cause the aircraft to rotate clockwise are positive (+), and those that cause it to rotate counter-clockwise are negative (-).

Sweptwing airplanes are more critical due to fuel imbalance because as the fuel is used from the outboard tanks the CG shifts forward, and as it is used from the inboard tanks the CG shifts aft. [Figure 1-5] For this reason, fuel-use scheduling in high-speed jet aircraft operation is critical.

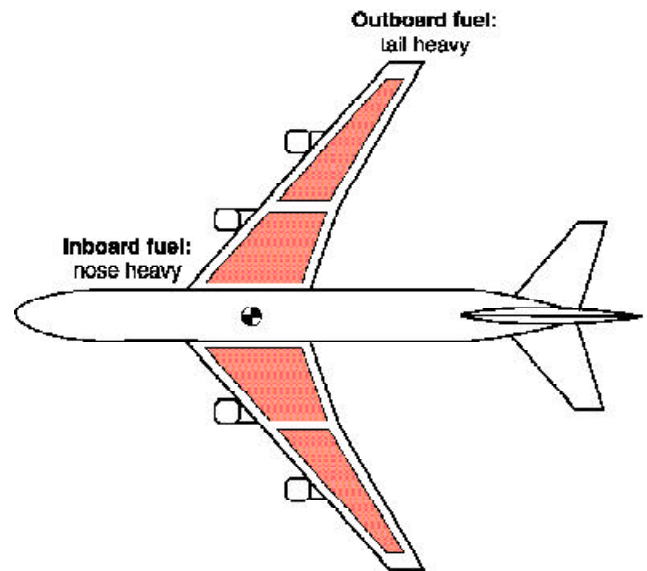


Figure 1-5. Fuel in the tanks of a sweptwing airplane affects both lateral and longitudinal balance. As fuel is used from an outboard tank, the CG shifts forward.

Aircraft can perform safely and achieve their designed efficiency only when they are operated and maintained in the way their designers intended. This safety and efficiency is determined to a large degree by holding the aircraft's weight and balance parameters within the limits specified for its design. The remainder of this book describes the way in which this is done.

**Lateral balance:** Balance around the roll, or longitudinal, axis.



## Chapter 2

# Weight and Balance Theory and Documentation

### Weight and Balance Theory

Two elements are vital in the weight and balance considerations of an aircraft:

- The total weight of the aircraft must be no greater than the maximum gross weight allowed by the FAA for the particular make and model of the aircraft.
- The center of gravity, or the point at which all of the weight of the aircraft is considered to be concentrated, must be maintained within the allowable range for the operational weight of the aircraft.

#### Aircraft Arms, Weights, and Moments

The term **arm**, usually measured in inches, refers to the distance between the center of gravity of an item or object and the **reference datum**. Arms ahead of, or to the left of the datum are negative (–), and those behind, or to the right of the datum are positive (+). When the datum is ahead of the aircraft, all of the arms are positive and computational errors are minimized.

Weight is normally measured in pounds. When weight is removed from an aircraft, it is negative (–), and when added, it is positive (+).

There are a number of weights that must be considered in aircraft weight and balance. The following are terms for various weights as used by the General Aviation Manufacturers Association (GAMA).

- The **standard empty weight** is the weight of the airframe, engines and all items of operating weight that have fixed locations and are permanently installed in the

aircraft. This weight must be recorded in the aircraft weight and balance records. The **basic empty weight** includes the standard empty weight plus any optional equipment that has been installed.

- Maximum allowable gross weight is the maximum weight authorized for the aircraft and all of its contents as specified in the Type Certificate Data Sheets (TCDS) or Aircraft Specifications for the aircraft.
- **Maximum landing weight** is the greatest weight that an aircraft normally is allowed to have when it lands.
- **Maximum takeoff weight** is the maximum allowable weight at the start of the takeoff run.
- **Maximum ramp weight** is the total weight of a loaded aircraft, and includes all fuel. It is greater than the takeoff weight due to the fuel that will be burned during the taxi and runup operations. Ramp weight is also called taxi weight.

The manufacturer establishes the allowable gross weight and the range allowed for the CG, as measured in inches from a reference plane called the datum. In large aircraft, this range is measured in percentage of the mean aerodynamic chord (MAC), the leading edge of which is located a specified distance from the datum.

The datum may be located anywhere the manufacturer chooses; it is often the leading edge of the wing or some specific distance from an easily identified location. One popular location for the datum is a specified distance forward of the aircraft, measured in inches from some point such as the leading edge of the wing or the engine firewall.

**Arm (GAMA):** The horizontal distance from the reference datum to the center of gravity (CG) of an item.

**Reference datum (GAMA):** An imaginary vertical plane from which all horizontal distances are measured for balance purposes.

**Standard empty weight (GAMA):** Weight of a standard airplane including unusable fuel, full operating fluids and full oil.

**Basic empty weight (GAMA):** Standard empty weight plus optional equipment.

**Maximum landing weight (GAMA):** Maximum weight approved for the landing touchdown.

**Maximum takeoff weight (GAMA):** Maximum weight approved for the start of the takeoff run.

**Maximum ramp weight (GAMA):** Maximum weight approved for ground maneuver. (It includes weight of start, taxi, and runup fuel.)



The datum of some helicopters is the center of the rotor mast, but this location causes some arms to be positive and others negative. To simplify weight and balance computations, most modern helicopters, like airplanes, have the datum located at the nose of the aircraft or a specified distance ahead of it.

A **moment** is a force that tries to cause rotation, and is the product of the arm, in inches, and the weight, in pounds. Moments are generally expressed in pound-inches (lb-in) and may be either positive or negative. Figure 2-1 shows the way the algebraic sign of a moment is derived. Positive moments cause an airplane to nose up, while negative moments cause it to nose down.

Weight	Arm	Moment	Rotation
+	+	+	Nose up
+	-	-	Nose down
-	+	-	Nose down
-	-	+	Nose up

Figure 2-1. Relationships between the algebraic signs of weights, arms, and moments.

### The Law of the Lever

All weight and balance problems are based on the physical law of the lever. This law states that a lever is balanced when the weight on one side of the **fulcrum** multiplied by its arm is equal to the weight on the opposite side multiplied by its arm. In other words, the lever is balanced when the algebraic sum of the moments about the fulcrum is zero. [Figure 2-2] This is the condition in which the positive moments (those that try to rotate the lever clockwise) are equal to the negative moments (those that try to rotate it counterclockwise).

$$\begin{aligned}
 \text{CG} &= \frac{\text{Total moment}}{\text{Total weight}} \\
 &= \frac{1,179,057}{5,862} \\
 &= 201.1 \text{ inches behind the datum}
 \end{aligned}$$

Figure 2-2. The lever is balanced when the algebraic sum of the moments is zero.

**Moment:** A force that causes or tries to cause an object to rotate.

**Fulcrum:** The point about which a lever balances.

Consider these facts about the lever in Figure 2-2: The 100-pound weight A is located 50 inches to the left of the fulcrum (the datum, in this instance), and it has a moment of  $100 \times -50 = -5,000$  lb-in. The 200-pound weight B is located 25 inches to the right of the fulcrum, and its moment is  $200 \times +25 = +5,000$  lb-in. The sum of the moments is  $-5,000 + 5,000 = 0$ , and the lever is balanced. [Figure 2-3] The forces that try to rotate it clockwise have the same magnitude as those that try to rotate it counterclockwise.

Item	Weight (lb)	Arm (in)	Moment (lb-in)
Weight A	100	-50	-5,000
Weight B	200	+25	+5,000
	300		0

Figure 2-3. When a lever is in balance, the sum of the moments is zero.

### Determining the CG

One of the easiest ways to understand weight and balance is to consider a board with weights placed at various locations. We can determine the CG of the board and observe the way the CG changes as the weights are moved.

The CG of a board like the one in Figure 2-4 may be determined by using these four steps:

1. Measure the arm of each weight in inches from a datum.
2. Multiply each arm by its weight in pounds to determine the moment in pound-inches of each weight.
3. Determine the total of all the weights and of all the moments. *Disregard the weight of the board.*
4. Divide the total moment by the total weight to determine the CG in inches from the datum.

### The Physical Law of the Lever

A lever is balanced when the algebraic sum of the moments about its fulcrum is equal to zero.

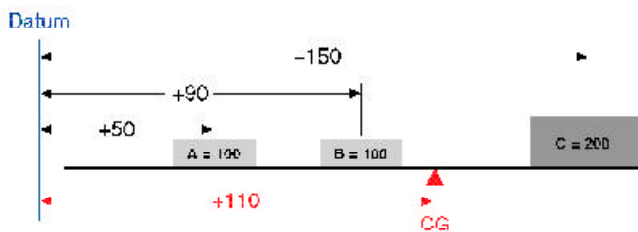


Figure 2-4. Determining the center of gravity from a datum located off the board.

In Figure 2-4, the board has three weights, and the datum is located 50 inches to the left of the CG of weight A. Determine the CG by making a chart like the one in Figure 2-5.

Item	Weight	Arm	Moment	CG
Weight A	100	50	5,000	
Weight B	100	90	9,000	
Weight C	200	150	30,000	
	400		44,000	110

Figure 2-5. Determining the CG of a board with three weights and the datum located off the board.

As noted in Figure 2-5, “A” weighs 100 pounds and is 50 inches from the datum; “B” weighs 100 pounds and is 90 inches from the datum; “C” weighs 200 pounds and is 150 inches from the datum. Thus the total of the three weights is 400 pounds, and the total moment is 44,000 lb-in.

Determine the CG by dividing the total moment by the total weight.

$$\begin{aligned}
 \text{CG} &= \frac{\text{Total moment}}{\text{Total weight}} \\
 &= \frac{44,000}{400} \\
 &= 110 \text{ inches from the datum}
 \end{aligned}$$

To prove this is the correct CG, move the datum to a location 110 inches to the right of the original datum and determine the arm of each weight from this new datum, as in Figure 2-6. Then make a new chart similar to the one in Figure 2-7. If the CG is correct, the sum of the moments will be zero.

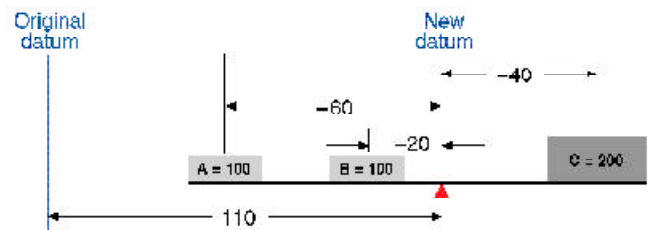


Figure 2-6. Arms from the datum assigned to the CG.

The new arm of weight A is  $110 - 50 = 60$  inches, and since this weight is to the left of the datum, its arm is negative, or  $-60$  inches. The new arm of weight B is  $110 - 90 = 20$  inches, and it is also to the left of the datum, so it is  $-20$ ; the new arm of weight C is  $150 - 110 = 40$  inches. It is to the right of the datum and is therefore positive.

Item	Weight	Arm	Moment
Weight A	100	-60	-6,000
Weight B	100	-20	-2,000
Weight C	200	+40	+8,000
			0

Figure 2-7. The board balances at a point 110 inches to the right of the original datum. The board is balanced when the sum of the moments is zero.

The location of the datum used for determining the arms of the weights is not important; it can be anywhere. But all of the measurements must be made from the same datum location.

Determining the CG of an airplane is done in the same way as determining the CG of the board in the example on the previous page. [Figure 2-8] Prepare the airplane for weighing (as explained in Chapter 3) and place it on three scales. All **tare weight**, the weight of any chocks or devices used to hold the aircraft on the scales, is subtracted from the scale reading, and the net weight of the wheels is entered into a chart like the one in Figure 2-9. The arms of the weighing points are specified in the TCDS for the airplane in terms of **stations**, which are distances in inches from the datum.

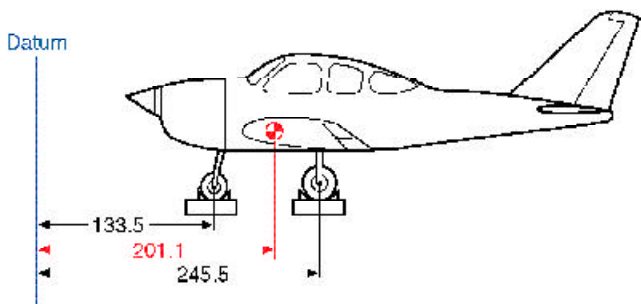


Figure 2-8. Determining the CG of an airplane whose datum is ahead of the airplane.

Item	Weight	Arm	Moment	CG
Main wheels	3,540	245.5	869,070	
Nose wheel	2,322	133.5	309,987	
Total	5,862		1,179,057	201.1

Figure 2-9. Chart for determining the CG of an airplane whose datum is ahead of the airplane.

The empty weight of this aircraft is 5,862 pounds. Its EWCG, determined by dividing the total moment by the total weight, is located at fuselage station 201.1. This is 201.1 inches behind the datum.

$$\begin{aligned}
 \text{CG} &= \frac{\text{Total moment}}{\text{Total weight}} \\
 &= \frac{1,179,057}{5,862} \\
 &= 201.1 \text{ inches behind the datum.}
 \end{aligned}$$

**Tare weight:** The weight of any chocks or devices used to hold the aircraft on the scales. Tare weight is subtracted from the scale reading, to get the net weight of the aircraft.

**Station (GAMA):** A location along the airplane fuselage usually given in terms of distance from the reference datum.

### Shifting the CG

One common weight and balance problem involves moving passengers from one seat to another or shifting baggage or cargo from one compartment to another to move the CG to a desired location. This also can be visualized by using a board with three weights and then working out the problem the way it is actually done on an airplane.

#### Solution by Chart

The CG of a board can be moved by shifting the weights as demonstrated in Figure 2-10: As the board is loaded, it balances at a point 72 inches from the CG of weight A. [Figure 2-11]

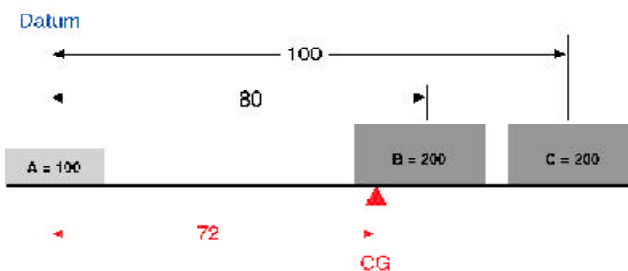


Figure 2-10. Moving the CG of a board by shifting the weights. This is the original configuration.

Item	Weight	Arm	Moment	CG
Weight A	100	0	0	
Weight B	200	80	16,000	
Weight C	200	100	20,000	
	500		36,000	72

Figure 2-11. Shifting the CG of a board by moving one of the weights. This is the original condition of the board.

To shift weight B so the board will balance about its center, 50 inches from the CG of weight A, first determine the arm of weight B that will produce a moment that causes the total moment of all three weights around this desired balance point to be zero. The combined moment of weights A and C around this new balance point is 5,000 lb-in, so the moment of weight B will have to be -5,000 lb-in in order for the board to balance. [Figure 2-12]

Item	Weight	Arm	Moment
Weight A	100	-50	-5,000
Weight B			
Weight C	200	+50	+10,000
			-5,000

Figure 2-12. Determining the combined moment of weights A and C.

Determine the arm of weight B by dividing its moment, -5,000 lb-in, by its weight of 200 pounds. Its arm is -25 inches.

$$\begin{aligned} \text{Arm B} &= \frac{\text{Moment}}{\text{Weight}} \\ &= \frac{-5,000}{200} \\ &= -25 \end{aligned}$$

To balance the board at its center, weight B will have to be placed so its CG is 25 inches to the left of the center of the board, as in Figure 2-13.

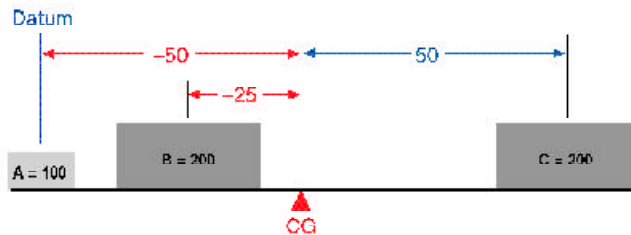


Figure 2-13. Placement of weight B to cause the board to balance about its center.

#### A Basic Weight and Balance Equation

$$\frac{\text{Weight to be shifted}}{\text{Total weight}} = \frac{\Delta\text{CG}}{\text{Distance weight is shifted}}$$

This equation can be rearranged to find the distance a weight must be shifted to give a desired change in the CG location:

$$\text{Distance weight is shifted} = \frac{\text{Total weight} \times \Delta\text{CG}}{\text{Weight shifted}}$$

The equation can also be rearranged to find the amount of weight to shift to move the CG to a desired location:

$$\text{Weight shifted} = \frac{\text{Total weight} \times \Delta\text{CG}}{\text{Distance weight is shifted}}$$

It can also be rearranged to find the amount the CG is moved when a given amount of weight is shifted:

$$\Delta\text{CG} = \frac{\text{Weight shifted} \times \text{Distance weight is shifted}}{\text{Total weight}}$$

Finally, this equation can be rearranged to find the total weight that would allow shifting a given amount of weight to move the CG a given distance:

$$\text{Total weight} = \frac{\text{Weight shifted} \times \text{Distance weight is shifted}}{\Delta\text{CG}}$$

?: This symbol, Delta, means a change in something. ΔCG means a change in the center of gravity location.

#### Solution by Formula

This same problem can also be solved by using this basic equation:

$$\frac{\text{Weight to be shifted}}{\text{Total weight}} = \frac{\Delta\text{CG}}{\text{Distance weight is shifted}}$$

Rearrange this formula to determine the distance weight B must be shifted:

$$\begin{aligned} \text{Distance weight B is shifted} &= \frac{\text{Total weight} \times \Delta\text{CG}}{\text{Weight shifted}} \\ &= \frac{500 \times -22}{200} \\ &= -55 \text{ inches} \end{aligned}$$

The CG of the board in Figure 2-10 was 72 inches from the datum. This CG can be shifted to the center of the board as in Figure 2-13 by moving weight B. If the 200-pound weight B is moved 55 inches to the left, the CG will shift from 72 inches to 50 inches, a distance of 22 inches. The sum of the moments about the new CG will be zero. [Figure 2-14]

Item	Weight	Arm	Moment
Weight A	100	-50	-5,000
Weight B	200	-25	-5,000
Weight C	200	+50	+10,000
			0

Figure 2-14. Proof that the board balances at its center. The board is balanced when the sum of the moments is zero.

When the distance the weight is to be shifted is known, the amount of weight to be shifted to move the CG to any location can be determined by another arrangement of the basic equation. Use the following arrangement of the formula to determine the amount of weight that will have to be shifted from station 80 to station 25, to move the CG from station 72 to station 50.

$$\begin{aligned} \text{Weight shifted} &= \frac{\text{Total weight} \times \Delta\text{CG}}{\text{Distance weight is shifted}} \\ &= \frac{500 \times 22}{55} \\ &= 200 \text{ pounds} \end{aligned}$$

If the 200-pound weight B is shifted from station 80 to station 25, the CG will move from station 72 to station 50.



A third arrangement of this basic equation may be used to determine the amount the CG is shifted when a given amount of weight is moved for a specified distance (as it was done in Figure 2-10). Use this formula to determine the amount the CG will be shifted when 200-pound weight B is moved from +80 to +25.

$$\begin{aligned} \Delta CG &= \frac{\text{Weight shifted} \times \text{Distance it is shifted}}{\text{Total weight}} \\ &= \frac{200 \times 55}{500} \\ &= 22 \text{ inches} \end{aligned}$$

Moving weight B from +80 to +25 will move the CG 22 inches, from its original location at +72 to its new location at +50 as seen in Figure 2-13.

### Shifting the Airplane CG

The same procedures for shifting the CG by moving weights can be used to change the CG of an airplane by rearranging passengers or baggage.

Consider this airplane:

- Airplane empty weight and EWCG ..... 1,340 lbs @ +37.0
- Maximum gross weight ..... 2,300 lbs
- CG limits** ..... +35.6 to +43.2
- Front seats (2) ..... +35
- Rear seats (2) ..... +72
- Fuel ..... 40 gal @ +48
- Baggage (maximum) ..... 60 lbs @ +92

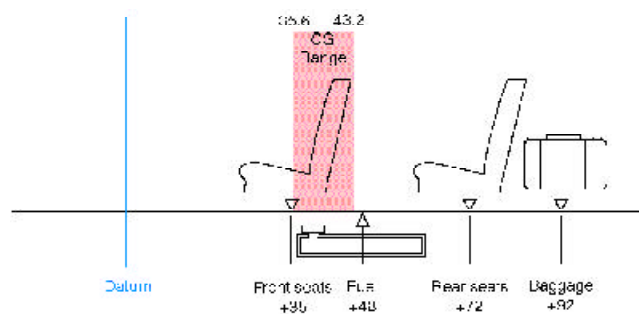


Figure 2-15. Loading diagram for a typical single-engine airplane.

**CG limits (GAMA):** The extreme center of gravity locations within which the airplane must be operated at a given weight.

The pilot has prepared a chart, Figure 2-16, with certain permanent data filled in and blanks left to be filled in with information on this particular flight:

Item	Weight 2,300 max	Arm	Moment	CG +35.6 to +43.2
Airplane	1,340	37	49,580	
Front Seats		35		
Rear Seats		72		
Fuel		48		
Baggage		92		

Figure 2-16. Blank loading chart.

For this flight, the 140-pound pilot and a 115-pound passenger are to occupy the front seats, and a 212-pound and a 97-pound passenger are in the rear seats. There will be 50 pounds of baggage, and the flight is to have maximum range, so maximum fuel is carried. The loading chart, Figure 2-17, is filled in using the information from Figure 2-15:

Item	Weight 2,300 max	Arm	Moment	CG +35.6 to +43.2
Airplane	1,340	37	49,580	
Front Seats	255	35	8,925	
Rear Seats	309	72	22,248	
Fuel	240	48	11,520	
Baggage	50	92	4,600	
	2,194		96,873	44.1

Figure 2-17. This completed loading chart shows the weight is within limits, but the CG is too far aft.

With this loading, the total weight is less than the maximum of 2,300 pounds and is within limits, but the CG is 0.9 inch too far aft.

One possible solution would be to trade places between the 212-pound rear-seat passenger and the 115-pound front-seat passenger. Use a modification of the basic weight and balance equation to determine the amount the CG will change when the passengers swap seats:

$$\begin{aligned} \Delta CG &= \frac{\text{Weight shifted} \times \text{Distance it is shifted}}{\text{Total weight}} \\ &= \frac{(212 - 115) \times (72 - 35)}{2,194} \\ &= \frac{97 \times 37}{2,194} \\ &= 1.6 \text{ inches} \end{aligned}$$

The two passengers changing seats moved the CG forward 1.6 inches, which places it within the operating range. This can be proven correct by making a new chart incorporating the changes. [Figure 2-18]

Item	Weight 2,300 max	Arm	Moment	CG +35.6 to +43.2
Airplane	1,340	37	49,580	
Front Seats	115	35	12,020	
Rear Seats	212	72	15,264	
Fuel	240	48	11,520	
Baggage	50	92	4,600	
	2,194		93,284	42.5

Figure 2-18. This loading chart, made after the seat changes, shows both the weight and balance are within allowable limits.

## Weight and Balance Documentation

### FAA-Furnished Information

Before an aircraft can be properly weighed and its empty-weight center of gravity computed, certain information must be known. This information is furnished by the FAA for every certificated aircraft in the **Type Certificate Data Sheets (TCDS)** or **Aircraft Specifications** available to all AMTs and can be accessed via the internet: <http://av-info.gov/tc>.

When the design of an aircraft is approved by the FAA, an **Approved Type Certificate** and TCDS are issued. The TCDS include all of the pertinent specifications for the aircraft, and at each annual or 100-hour inspection, it is the responsibility of the inspecting AMT to ensure that the aircraft adheres to them. See Pages 2-8 through 2-10, Figure 2-19, for an example TCDS excerpt.

The weight and balance information on a TCDS includes the following items.

#### Data Pertinent to Individual Models

This type of information is determined in the sections pertinent to each individual model:

#### CG Range

##### Normal Category

(+82.0) to (+93.0) at 2,050 pounds  
(+87.4) to (+93.0) at 2,450 pounds

##### Utility Category

(+82.0) to (86.5) at 1,950 pounds

Straight line variations between points given.

(Continued on Page 2-11)

#### About the TCDS

Aircraft certificated before January 1, 1958, were issued Aircraft Specifications under the Civil Air Regulations (CARs), but when the Civil Aeronautics Administration (CAA) was replaced by the FAA, Specifications were replaced by TCDS. TCDS and Aircraft Specifications are available from the Superintendent of Documents in six volumes in both paper and microfiche format. Description of the volume contents, price, and ordering instructions are found in Advisory Circular (AC) 00-2, *Advisory Circular Checklist*.

#### Type Certificate Data Sheets

(TCDS): The official specifications issued by the FAA for an aircraft, engine, or propeller.

#### Aircraft Specifications:

Documentation containing the pertinent specifications for aircraft certificated under the CARs.

#### Approved Type Certificate:

A certificate of approval issued by the FAA for the design of an airplane, engine, or propeller.



<b>Airspeed Limits</b>	Never exceed	171 m.p.h. (148 knots) CAS
	Maximum Structural	140 m.p.h. (121 knots) CAS
	cruising	140 m.p.h. (121 knots) CAS
	Maneuvering	129 m.p.h. (112 knots) CAS
	Flaps extended	115 m.p.h. (100 knots) CAS
<b>Center of Gravity Range</b>	(+84.0) to (+95.9) at 1650 lb. or less	
	(+85.9) to (+95.9) at 1975 lb.	
	(+88.2) to (+95.9) at 2200 lb.	
	Straight line variation between points given	
<b>Empty Wt. C.G. Range</b>	None	
<b>Maximum Weight</b>	2200 lb.	
<b>No. of Seats</b>	4 (2 at +85.5, 2 at +118.1)	
<b>Maximum Baggage</b>	125 lbs. (+142.8) (S/N 28-1 through 28-1760A)	
	See NOTE 8.	
	200 lbs. (+142.8) (S/N 28-1761 and up)	
<b>Fuel Capacity</b>	50 gal. (2 wing tanks) (+95)	
	See NOTE 1 for data on system fuel.	
<b>Oil Capacity</b>	8 qts. (+32.5), 6 qts. useable	
	See NOTE 1 for data on system oil.	
<b>Control Surface Movements</b>	Wing flaps	(±2°) Up 0° Down 40°
	Ailerons	(±2°) Up 30° Down 15°
	Rudder	(±2°) Left 27° Right 27°
	Stabilator	(±2°) Up 18° Down 2°
	Stabilator tab	(±1°) Up 3° Down 12°
<b>Nose Wheel Travel</b>	(+1°)	Left 30° Right 30°
		(Effective on S/N 1 through 3377)
		Left 22° Right 22°
		(Effective on S/N 3378 and up)
<b>Manufacturer's Serial Nos.</b>	28-03, 28-1 and up.	

**II. Model PA-28-150, Cherokee, 4 PCLM (Normal Category), Approved June 2, 1961**

<b>Engine</b>	Lycoming 0-320-A2B or 0-320-E2A with carburetor setting 10-3678-32
<b>Fuel</b>	80/87 minimum grade aviation gasoline
<b>Engine Limits</b>	For all operations, 2700 r.p.m. (150 h.p.)
<b>Propeller and Propeller Limits</b>	Sensenich M74DM or 74DM6 on S/N 1 through 1760A; Sensenich M74DMS or 74DM6S5 on S/N 1761 and up Static r.p.m. at maximum permissible throttle setting not over 2375, not under 2275. No additional tolerance permitted. Diameter: Not over 74", not under 72.5." See NOTE 10.

Figure 2-19. Excerpts from a Type Certificate Data Sheet (continued).

**Data Pertinent to All Models:**

<b>Datum</b>	78.4" forward of wing leading edge (straight wing only). 78.4" forward of inboard intersection of straight and tapered sections (semi-tapered wings).
<b>Leveling Means</b>	Two screws left side fuselage below window.
<b>Certification Basis</b>	<p>Type Certificate No. 2A13 issued October 31, 1960. Date of Application for Type Certificate, February 14, 1965.</p> <p>Delegation Option Authorization granted per FAR 21, Subpart J. July 17, 1968.</p> <p>PA-28-140 and PA-28-151: CAR 3, effective May 15, 1956, including Amendments 3-1, 3-2, 3-4, and paragraphs 3.304 and 3.705 of Amendment 3-7.</p> <p>PA-28-150, PA-28-160, PA-28-180, PA-28-235, PA-28S-160, PA-28S-180, PA-28R-180, PA-28R-200; CAR 3, effective May 15, 1956, including Amendments 3-1, 3-2 and paragraphs 3.304 and 3.705.</p> <p>PA-28-161: CAR 3 effective May 15, 1956, through Amendment 3-2; paragraph 3.387(d) of Amendment 3-4; paragraphs 3.304 and 3.705 of Amendment 3-7; FAR 23.959 of Amendment 23-7; FAR 36 effective December 1, 1969, through Amendment 36-4.</p> <p>PA-28-181: CAR 3 effective May 15, 1956, through Amendment 3-2, Amendment 3-4 and paragraphs 3.304 and 3.705 of Amendment 3-7. Also, FAR 23.207, 23.221 and 23.959 of Amendment 23-7.</p> <p>PA-28R-201: CAR 3 effective May 15, 1956, through Amendment 3-2; paragraphs 3.304 and 3.705 of Amendment 3-7; paragraphs 23.221, 23.959, 23.965, 23.967(e)(2), 23.1091 and 23.1093 of FAR 23 Amendment 23-16; FAR 36 effective December 1, 1969, through Amendment 36-4 (no acoustical change).</p> <p>PA-28R-201T: CAR 3 effective May 15, 1956, through Amendment 3-2 including paragraphs 3.304 and 3.705 of Amendment 3-7; FAR 23.221, 23.901, 23.909, 23.959, 23.965, 23.967(e)(2), 23.1041, 23.1043, 23.1047, 23.1143, 23.1305, 23.1441 and 23.1527 of Amendment 23-16; FAR 36 effective December 1, 1969, through Amendment 36-4.</p> <p>PA-28-236: CAR 3 effective May 15, 1956, through Amendment 3-2, and paragraphs 3.304 and 3.705 of Amendment 3-7 effective May 3, 1962. FAR 23.221, 23.959, 23.1091, and 23.1093 of FAR Part 23, Amendment 23-17 effective February 1, 1977; FAR 23.1581(b)(2) of FAR 23 Amendment 23-21 effective March 1, 1978; and applicable portions of FAR 36, as amended up to Amendment 36-9 effective April 3, 1978.</p>

Figure 2-19. Excerpts from a Type Certificate Data Sheet (continued).

If this information is given, there may be a chart on the TCDS similar to the one in Figure 2-20. This chart helps visualize the CG range. Draw a line horizontally from the aircraft weight and a line vertically from the fuselage station on which the CG is located. If these lines cross inside the enclosed area, the CG is within the allowable range for the weight.

Note that there are two enclosed areas; the larger is the CG range when operating the Normal category only, and the smaller range is for operation in both the Normal and Utility categories. When operating with the weight and CG limitations shown for the Utility category, the aircraft is approved for limited acrobatics such as spins, lazy eights, chandelles, and steep turns in which the bank angle exceeds 60°. When operating outside of the smaller enclosure but within the larger, the aircraft is restricted from these maneuvers.

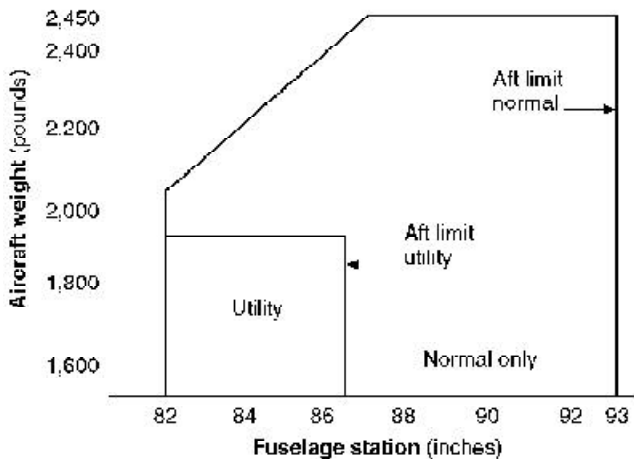


Figure 2-20. CG range chart.

If the aircraft has retractable landing gear, a note may be added, for example:

“Moment due to retracting of landing gear (+819 lb-in)”

**Normal category:** A category of aircraft certificated under 14 CFR, Part 23 and CAR, Part 3 that allows the maximum weight and CG range while restricting the maneuvers that are permitted.

**Utility category:** A category of aircraft certificated under 14 CFR, Part 23 and CAR, Part 3 that permits limited acrobatic maneuvers but restricts the weight and the CG range.

### Empty Weight CG Range

When all of the seats and baggage compartments are located close together, it is not possible, as long as the EWCG is located within the EWCG range, to legally load the aircraft so that its operational CG falls outside this allowable range. If the seats and baggage areas extend over a wide range, the EWCG range will be listed as “None.”

### Maximum Weight

The maximum allowable takeoff and landing weight and the maximum allowable ramp weight are given. This basic information may be altered by a note such as the following:

“NOTE 5. A landing weight of 6,435 lbs must be observed if 10 PR tires are installed on aircraft not equipped with 60-810012-15 (LH) or 60-810012-16 (RH) shock struts.”

### Number of Seats

The number of seats and their arms are given in such terms as:

“4 (2 at +141, 2 at +173)”

### Maximum Baggage (Structural Limit)

This is given as:

“500 lbs at +75 (nose compartment)  
655 lbs at +212 (aft area of cabin)”

### Fuel Capacity

This important information is given in such terms as:

“142 gal (+138) comprising two interconnected cells in each wing”

— or,

“204 gal (+139) comprising three cells in each wing and one cell in each nacelle (four cells interconnected) See NOTE 1 for data on fuel system.”

“NOTE 1” will read similar to this example:

“NOTE 1. Current weight and balance data, including list of equipment included in standard empty weight and loading instructions when necessary, must be provided for each aircraft at the time of original certification.

The standard empty weight and corresponding center of gravity locations must include unusable fuel of 24 lbs at (+135).”

*Oil Capacity (Wet Sump)*

The quantity of the full oil supply and its arm are given in such terms as:

“26 qt (+88)”

*Data Pertinent to All Models*

*Datum*

The location of the datum may be described, for example, as:

“Front face of firewall”

— or,

“78.4" forward of wing leading edge (straight wing only).

78.4" forward of inboard intersection of straight and tapered sections (semi-tapered wings).”

*Leveling Means*

A typical method is:

“Upper door sill.”

This means that a spirit level is held against the upper door sill and the aircraft is level when the bubble is centered. Other methods require a spirit level to be placed across leveling screws or leveling lugs in the primary aircraft structure or dropping a plumb line between specified leveling points.

TCDS are issued for aircraft that have been certificated since January 1, 1958, when the FAA came into being. For aircraft certificated before this date, basically the same data is included in Aircraft, Engine, or Propeller Specifications that were issued by the Civil Aeronautics Administration.

The book, *Aircraft Listings*, Volume VI of the *Type Certificate Data Sheets Specifications and Listings*, includes weight and balance information on aircraft of which there are fewer than 50 listed as being certificated.

**Manufacturer-Furnished Information**

When an aircraft is initially certificated, its empty weight and EWCG are determined and recorded in the weight and balance record such as the one in Figure 2-21. Notice in this figure that the moment is expressed as “Moment (lb-in/1000).” This is a moment index which means that the moment, a very large number, has been divided by 1,000 to make it more manageable. Chapter 4 discusses moment indexes in more detail.

**Weight and Balance Data**

Aircraft Serial No. 18259080

F.A.A. Registration No. N42565

Date: 4-22-95

Item	Weight (lbs) X	C.G. Arm (in) =	Moment (lb-in)
Standard empty weight	1,876	36.1	67,798.6
Optional equipment	1.2	13.9	16.7
Special installation	6.2	41.5	257.3
Paint	—	—	—
Unusable fuel	30.0	46.0	1,380
Basic empty weight	1,913.4		69,452.6

Figure 2-21. Typical weight and balance data for a 14 CFR, Part 23 airplane.



An **equipment list** is furnished with the aircraft which specifies all the required equipment, and all equipment approved for installation in the aircraft. The weight and arm of each item is included on the list, and all equipment installed when the aircraft left the factory is checked.

When an AMT adds or removes any item on the equipment list, he or she must change the weight and balance record to indicate the new empty weight and EWCG, and the equipment list is revised to show which equipment is actually installed. Figure 2-22 is an excerpt from a comprehensive

equipment list which includes all of the items of equipment approved for this particular model of aircraft. The POH for each individual aircraft includes an aircraft specific equipment list of the items from this master list. When any item is added to or removed from the aircraft, its weight and arm are determined in the equipment list and used to update the weight and balance record.

The POH/AFM also contains CG moment envelopes and loading graphs. Examples of the use of these handy graphs are given in Chapter 4.

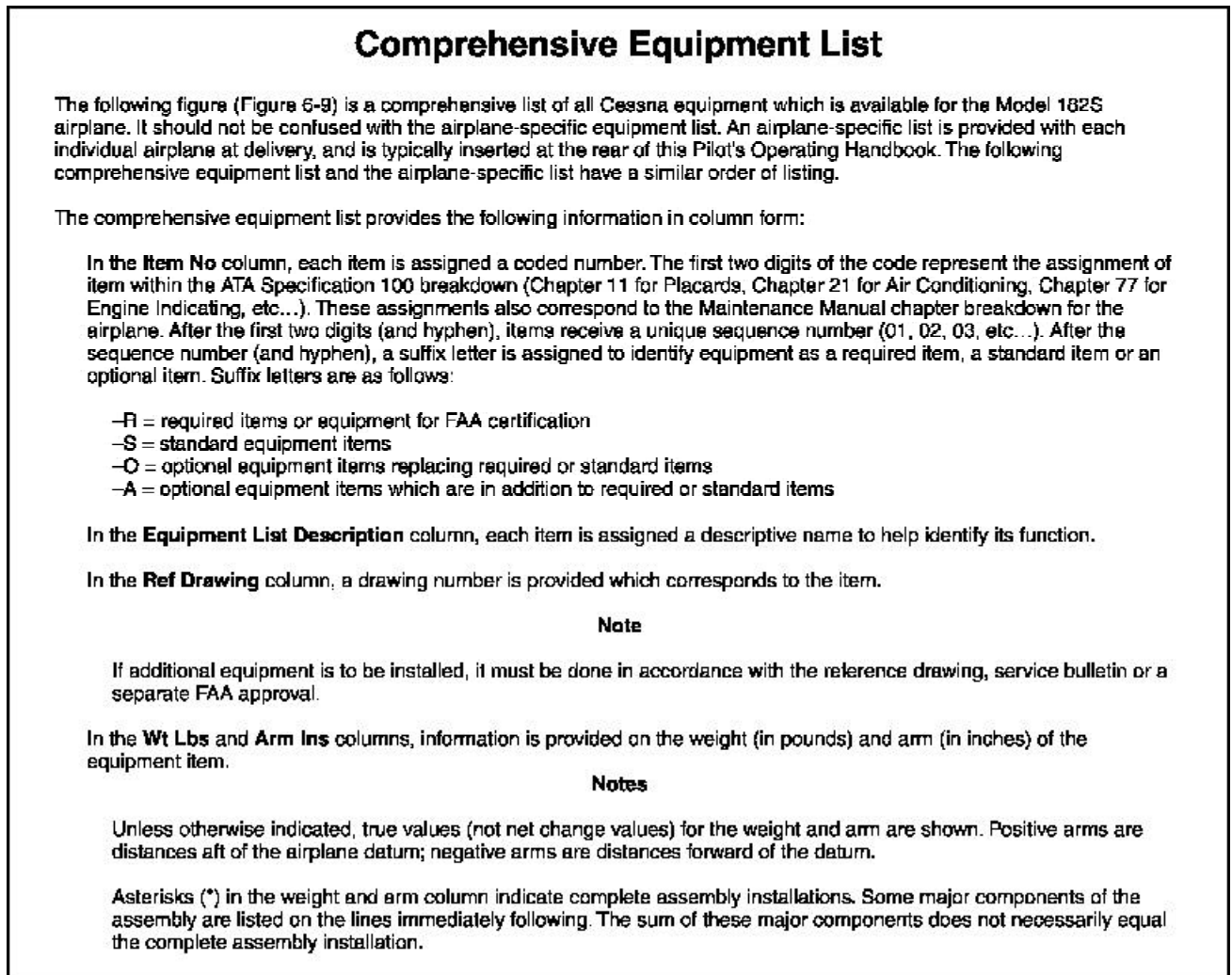


Figure 2-22. Excerpt from a typical comprehensive equipment list (continued on next page).

**Equipment list:** A list of items approved by the FAA for installation in a particular aircraft. The list includes the name, part number, weight, and arm of the component. Installation of an item in the equipment list is considered to be a minor alteration.

#### Dealing with Large Moments

Moments are the product of the arm in inches and the weight in pounds, and for large aircraft this produces very large numbers. To reduce the likelihood of mathematical errors, the manufacturers often divide these large numbers by a reduction factor of 100 or 1,000 to get a moment index which is easier to handle. To change a moment index to a moment, just multiply it by the reduction factor.

Item No	Equipment List Description	Ref Drawing	Wt (lbs.)	Arm (ins.)
24-04-S	Basic Avionics Kit Installation		4.3*	55.5*
	- Support Straps Installation		0.1	10.0
	- Avionics Cooling Fan Installation		1.6	3.0
	- Avionics Ground Installations		0.1	41.0
	- Circuit Breaker Panel Installation		1.5	16.5
	- Microphone Installation		0.2	18.5
	- Omni Antenna Installation		0.5	252.1
	- Omni Antenna Cable Assembly Installation		0.3	248.0
	<b>Chapter 25 – Equipment/Furnishings</b>			
25-01-R	Seat, Pilot, Adjustable		33.8	41.5
25-02-S	Seat, Copilot, Adjustment		33.8	41.5
25-03-S	Seat, Rear, Two Piece Back Cushion		50.0	82.0
25-04-R	Seat Belt and Shoulder Harness, Inertia Reel, Pilot and Copilot		5.2	50.3
25-05-S	Seat Belt and Shoulder Harness, Inertia Reel, Rear Seat		5.2	87.8
25-06-S	Sun Visors (Set of 2)		1.2	33.0
25-07-S	Baggage Retaining Net		0.5	108.0
25-08-S	Cargo Tie Down Rings (10 Tie Downs)		0.4	108.0
25-09-S	Pilot's Operating Checklist (Stowed in Instrument Panel Map Case)		0.3	15.0
25-10-R	Pilot's Operating Handbook and FAA Approved Airplane Flight Manual (Stowed in Pilot's Seat Back)		1.2	61.5
25-11-S	Fuel Sampling Cup		0.1	14.3
25-12-S	Tow Bar, Nose Gear (Stowed)		1.7	108.0
25-13-S	Emergency Locator Transmitter Installation		2.2*	134.8*
	- ELT Transmitter		1.7	135.0
	- Antenna and Cable Assembly		0.4	133.0
	- Hardware		0.1	138.0
	<b>Chapter 26 – Fire Protection</b>			
26-01-S	Fire Extinguisher Installation		5.3*	29.0*
	- Fire Extinguisher		4.8	29.0
	- Mounting Clamp & Hardware		0.5	29.0
	<b>Chapter 27 – Flight Controls</b>			
27-01-S	Dual Controls Installation, Right Seat		6.3*	12.9*
	- Control Wheel, Copilot		2.0	26.0
	- Rudder and Brake Pedal Installation Copilot		4.3	6.8

Figure 2-22. Excerpt from a typical comprehensive equipment list (continued).

## Chapter 3

# Weighing the Aircraft and Determining the Empty-Weight Center of Gravity

Chapter 2 explained the theory of weight and balance and gave examples of the way the center of gravity could be found for a board loaded with several weights. In this chapter, the practical aspects of weighing an airplane and locating its center of gravity are discussed. Formulas are introduced that allow the CG location to be measured in inches from various datum locations and in percentage of the mean aerodynamic chord.

### Requirements

Weight and balance is of such vital importance that each AMT maintaining an aircraft must be fully aware of his or her responsibility to provide the pilot with current and accurate information for the actual weight of the aircraft and the location of the center of gravity. The pilot in command has the responsibility to know the weight of the load, CG, maximum allowable gross weight, and CG limits of the aircraft.

The weight and balance report must include an equipment list showing weights and moment arms of all required and optional items of equipment included in the certificated empty weight.

When an aircraft has undergone extensive repair or major alteration, it should be reweighed and a new weight and balance record started.

### Who's responsible?

AMTs must provide the pilot with current and accurate aircraft weight information and where its EWCG is located.

The pilot in command has the responsibility to know the weight of the load, CG, maximum allowable gross weight, and CG limits of the aircraft.

### Equipment for Weighing

There are two basic types of scales used to weigh aircraft: scales on which the aircraft is rolled so the weight is taken from the wheels, and electronic **load cells** placed between the aircraft jack and the jack pads on the aircraft.

Some aircraft are weighed with mechanical scales of the low profile type similar to those shown in Figure 3-1.

Large aircraft, including heavy transports, are weighed by rolling them onto weighing platforms with electronic weighing cells that accurately measure the force applied by the weight of the aircraft. [Figure 3-2]

Electronic load cells are used when the aircraft is weighed by raising it on jacks. The cells are placed between the jack and the jack pad on the aircraft, and the aircraft is raised on the jacks until the wheels are off the floor and the aircraft is in a level flight attitude. The weight measured by each load cell is indicated on the control panel.

Mechanical scales should be protected when they are not in use, and they must be periodically checked for accuracy by measuring a known weight and noting any errors detected. Electronic load cells normally have a built-in calibration that allows them to be accurately zeroed before any load is applied.

**Load cell:** A component in an electronic weighing system placed between the jack and the jack pad on the aircraft. The load cell contains strain gauges whose resistance changes with the weight on the cell.



Figure 3-1. Low profile platform scales are used to weigh some aircraft. One scale is placed under each wheel. (Photo courtesy General Electrodynamics Corp.)



Figure 3-2. Weighing platforms accurately measure the weight of large aircraft without having to raise the aircraft off the ground. (Photo courtesy General Electrodynamics Corp.)

### Specific Gravity

Both the heat energy available and the weight of the fuel are determined by its specific gravity (s.g.), and this in turn is affected by its temperature. Cold fuel has a higher s.g. and therefore weighs more per gallon than warm fuel, and since the heat energy content is measured in Btu or Calories per pound or kilogram, cold fuel has more heat energy per gallon than warm fuel.

### Preparation for Weighing

The major considerations in preparing an aircraft for weighing are discussed below.

#### Weigh Clean Aircraft Inside Hangar

The aircraft should be weighed inside a hangar where wind cannot blow over the surface and cause fluctuating or false scale readings.

The aircraft should be clean inside and out, with special attention paid to the **bilge area** to be sure no water or debris is trapped there, and the outside of the aircraft should be as free as possible of all mud and dirt.

#### Equipment List

All of the required equipment must be properly installed, and there should be no equipment installed that is not included in the equipment list. If such equipment is installed, the weight and balance record must be corrected to indicate it.

**Bilge area:** The lowest part of an aircraft structure in which water and contaminants collect.

## Ballast

All required **permanent ballast** must be properly secured in place and all **temporary ballast** must be removed.

## Draining the Fuel

Drain fuel from the tanks in the manner specified by the aircraft manufacturer. If there are no specific instructions, drain the fuel until the fuel quantity gauges read empty when the aircraft is in level flight attitude. Any fuel remaining in the system is called residual, or **unusable fuel** and is part of the aircraft empty weight.

If it is not feasible to drain the fuel, the tanks can be topped off to be sure of the quantity they contain and the aircraft weighed with full fuel. After the weighing is complete, the weight of the fuel and its moment are subtracted from those of the aircraft as weighed. To correct the empty weight for the **residual fuel**, add its weight and moment. The amount of residual fuel and its arm are normally found in NOTE 1 in the section of the TCDS, "Data Pertaining to All Models." See "Fuel Capacity" on Page 2-11.

When computing the weight of the fuel, for example a tank full of jet fuel, measure its specific gravity (s.g.) with a hydrometer and multiply it by 8.345 (the nominal weight of 1 gallon of pure water whose s.g. is 1.0). If the ambient temperature is high and the jet fuel in the tank is hot enough for its specific gravity to reach 0.81, rather than its nominal s.g. of 0.82, the fuel will actually weigh 6.76 pounds per gallon rather than its nominal weight of 6.84 pounds per gallon. The standard weight of aviation gasoline (Avgas) is 6 pounds per gallon.

## Oil

The empty weight of aircraft certificated under the CAR, Part 3 does not include the engine lubricating oil. The oil must either be drained before the aircraft is weighed, or its weight must be subtracted from the scale readings to determine the empty weight. To weigh an aircraft that does not include the engine lubricating oil as part of the empty weight, place it in level flight attitude, then open the drain valves and allow all of the oil that is able to, to drain out. Any oil remaining is **undrainable oil** and is part of the empty weight. Aircraft certificated under 14 CFR, Parts 23 and 25 include full oil as part of the empty weight.

**Permanent ballast:** A weight permanently installed in an aircraft to bring its center of gravity into allowable limits. Permanent ballast is part of the aircraft empty weight.

**Temporary ballast:** Weights that can be carried in a cargo compartment to move the location of the CG for a specific flight condition. Temporary ballast must be removed when the aircraft is weighed.

**Unusable fuel (GAMA):** Fuel remaining after a runout test has been completed in accordance with governmental regulations.

If it is impractical to drain the oil, the reservoir can be filled to the specified level and the weight of the oil computed at 7.5 pounds per gallon. Then its weight and moment are subtracted from the weight and moment of the aircraft as weighed. The amount and arm of the undrainable oil are found in NOTE 1 of the TCDS, and this must be added to the empty weight.

## Other Fluids

The hydraulic fluid reservoir and all other reservoirs containing fluids required for normal operation of the aircraft should be full. Fluids not considered to be part of the empty weight of the aircraft are potable (drinkable) water, lavatory precharge water, and water for injection into the engines.

## Configuration of the Aircraft

Consult the aircraft service manual regarding the position of the landing gear shock struts and the control surfaces for weighing; when weighing a helicopter, the main rotor must be in its correct position.

## Jacking the Aircraft

Large aircraft are often weighed by rolling them onto ramps in which load cells are embedded. This eliminates the problems associated with jacking the aircraft off the ground. But most smaller aircraft are actually lifted off the ground onto scales or load cells.

You must exercise special care when raising an aircraft on jacks for weighing. If the aircraft has spring steel landing gear and it is jacked at the wheel, the landing gear will slide inward as the weight is taken off of the tire, and care must be taken to prevent the jack from tipping over.

For some aircraft, stress panels or plates must be installed before they are raised with wing jacks, to distribute the weight over the jack pad. Be sure to follow the recommendations of the aircraft manufacturer in detail anytime an aircraft is jacked. When using two wing jacks, take special care to raise them simultaneously, keeping the aircraft level so it will not slip off the jacks. As the jacks are raised, keep the safety collars screwed down against the jack cylinder to prevent the aircraft from tilting if one of the jacks should lose hydraulic pressure.

**Residual fuel:** Fuel that remains in the sumps and fuel lines when the fuel system is drained from the inlet to the fuel metering system, with the aircraft in level flight attitude. The weight of the residual fuel is part of the empty weight of the aircraft.

**Undrainable oil:** Oil that does not drain from an engine lubricating system when the aircraft is in the normal ground attitude and the drain valve is left open. The weight of the undrainable oil is part of the empty weight of the aircraft.



## Leveling the Aircraft

When an aircraft is weighed, it must be in its level flight attitude so that all of the components will be at their correct distance from the datum. This attitude is determined by information in the TCDS. Some aircraft require a plumb line to be dropped from a specified location so that the point of the weight, the bob, hangs directly above an identifiable point. Others specify that a spirit level be placed across two leveling lugs, often special screws on the outside of the fuselage. Other aircraft call for a spirit level to be placed on the upper door sill.

Lateral level is not specified for all general aviation (GA) airplanes, but provisions are normally made on transport airplanes and helicopters for determining both longitudinal and lateral level. This may be done by built-in leveling indicators, or by a plumb bob that shows the conditions of both longitudinal and lateral level.

The actual adjustments to level the aircraft using load cells are made with the jacks. When weighing from the wheels, leveling is normally done by adjusting the air pressure in the nose wheel shock strut.

## Determining the Center of Gravity

When the aircraft is in its level flight attitude, drop a plumb line from the datum and make a mark on the hangar floor below the tip of the bob. Draw a chalk line through this point parallel to the longitudinal axis of the aircraft. Then draw lateral lines between the actual weighing points for the main wheels, and make a mark along the longitudinal line at the weighing point for the nose wheel or the tail wheel. These lines and marks on the floor allow you to make accurate measurements between the datum and the weighing points to determine their arms.

### Safety Considerations

Special precautions must be taken when raising an aircraft on jacks.

1. Stress plates must be installed under the jack pads if the manufacturer specifies them.
2. If anyone is required to be in the aircraft while it is being jacked, there must be no movement.
3. The jacks must be straight under the jack pads before beginning to raise the aircraft.
4. All jacks must be raised simultaneously and the safety collars screwed down against the jack cylinder to prevent the aircraft tipping if any jack should lose pressure.

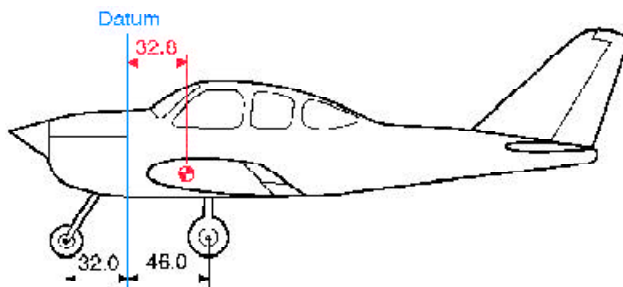


Figure 3-3. The datum is located at the firewall.

Determine the CG by adding the weight and moment of each weighing point to determine the total weight and total moment. Then divide the total moment by the total weight to determine the CG relative to the datum.

As an example of locating the CG with respect to the datum, which in this case is the firewall, consider the tricycle landing gear airplane in Figures 3-3 and 3-4.

When the airplane is on the scales with the parking brakes off, place chocks around the wheels to keep the airplane from rolling. Subtract the weight of the chocks, called **tare weight**, from the scale reading to determine the net weight at each weighing point. Multiply each net weight by its arm to determine its moment, then determine the total weight and total moment. The CG is determined by dividing the total moment by the total weight.

$$\begin{aligned} \text{CG} &= \frac{\text{Total moment}}{\text{Total weight}} \\ &= \frac{65,756}{2,006} \\ &= 32.8 \text{ inches behind the datum} \end{aligned}$$

The airplane in Figures 3-3 and 3-4 has a net weight of 2,006 pounds, and its CG is 32.8 inches behind the datum.

### Two Ways to Express CG Location

The location of the CG may be expressed in terms of inches from a datum specified by the aircraft manufacturer, or as a percentage of the MAC. The location of the leading edge of the MAC, the LEMAC, is a specified number of inches from the datum.

**Tare weight:** The weight of any chocks or devices used to hold an aircraft on the scales when it is weighed. The tare weight must be subtracted from the scale reading to obtain the net weight of the aircraft.

Weighing Point	Scale Reading (lb)	Tare (lb)	Net Weight (lb)	Arm (in)	Moment (lb-in)	CG
Right side	846	16	830	46.0	38,180	
Left side	852	16	836	46.0	38,456	
Nose	348	8	340	-32.0	-10,880	
<b>Total</b>			<b>2,006</b>		<b>65,756</b>	<b>32.8</b>

Figure 3-4. Locating the CG of an airplane relative to the datum which is located at the firewall. See Figure 3-3.

## Empty-Weight Center of Gravity Formulas

A chart like the one in Figure 3-4 helps visualize the weights, arms, and moments when solving an EWCG problem, but it is quicker to determine the EWCG by using formulas and an electronic calculator. The use of a calculator for solving these problems is described in Chapter 8.

There are four possible conditions and their formulas that relate the location of the CG to the datum. Notice that the formula for each condition first determines the moment of the nose  $\left(\frac{F \times L}{W}\right)$  wheel or tail  $\left(\frac{R \times L}{W}\right)$  wheel and then divides it by the total weight of the airplane. The arm thus determined is then added to or subtracted from the distance between the main wheels and the datum, distance D.

Nose wheel airplanes with the datum forward of the main wheels

$$CG = D - \left(\frac{F \times L}{W}\right)$$

Nose wheel airplanes with the datum aft of the main wheels

$$CG = -\left(D + \frac{F \times L}{W}\right)$$

Tail wheel airplanes with the datum forward of the main wheels

$$CG = D + \left(\frac{R \times L}{W}\right)$$

Tail wheel airplanes with the datum aft of the main wheels

$$CG = -D + \left(\frac{R \times L}{W}\right)$$

### Determining the Location of the CG

1. Determine the location of the CG relative to the main-wheel weighing points. This is the  $\left(\frac{R \times L}{W}\right)$  or  $\left(\frac{F \times L}{W}\right)$  part of the formula.
2. Convert the location of the CG measured from the main-wheel weighing points to the location measured from the datum or the LEMAC.

### Datum Forward of the Airplane—Nose Wheel Landing Gear

The datum of the airplane in Figure 3-5 is 100 inches forward of the leading edge of the wing root, or 128 inches forward of the main-wheel weighing points. This is distance (D). The weight of the nose wheel (F) is 340 pounds, and the distance between main wheels and nose wheel (L) is 78 inches. The total weight of the airplane (W) is 2,006 pounds.

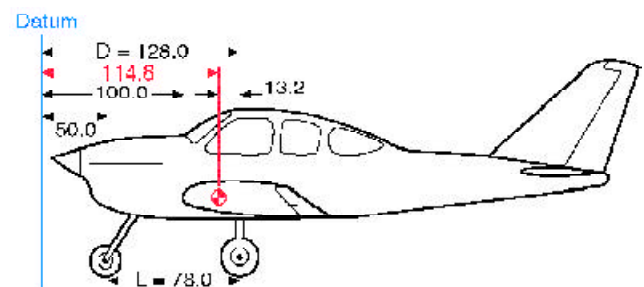


Figure 3-5. The datum is 100 inches forward of the wing root leading edge.

Determine the CG by using this formula:

$$\begin{aligned}
 CG &= D - \left(\frac{F \times L}{W}\right) \\
 &= 128 - \left(\frac{340 \times 78}{2,006}\right) \\
 &= 114.8
 \end{aligned}$$

The CG is 114.8 inches aft of the datum. This is 13.2 inches forward of the main-wheel weighing points which proves the location of the datum has no effect on the location of the CG so long as all measurements are made from the same location.



**Datum Aft of the Main Wheels—  
Nose Wheel Landing Gear**

The datum of some aircraft may be located aft of the main wheels. The airplane in this example is the same one just discussed, but the datum is at the intersection of the trailing edge of the wing with the fuselage.

The distance (D) between the datum of the airplane in Figure 3-6 and the main-wheel weighing points is 75 inches, the weight of the nose wheel (F) is 340 pounds, and the distance between main wheels and nose wheel (L) is 78 inches. The total net weight of the airplane (W) is 2,006 pounds.

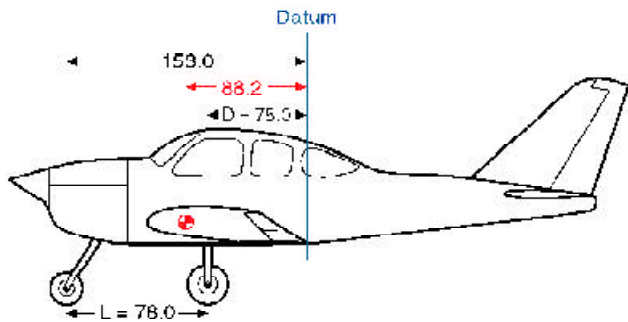


Figure 3-6. The datum is aft of the main wheels at the wing trailing edge.

The location of the CG may be determined by using this formula:

$$\begin{aligned}
 CG &= -\left(D + \frac{F \times L}{W}\right) \\
 &= -\left(75 + \frac{340 \times 78}{2,006}\right) \\
 &= -88.2
 \end{aligned}$$

The CG location is a negative value, which means it is 88.2 inches forward of the datum. This places it 13.2 inches forward of the main wheels, exactly the same location as it was when it was measured from other datum locations.

**Location of Datum**

It makes no difference where the datum is located as long as all measurements are made from the same location.

**Datum Forward of the Main Wheels—  
Tail Wheel Landing Gear**

Locating the CG of a tail wheel airplane is done in the same way as locating it for a nose wheel airplane except the formulas use  $\left(\frac{R \times L}{W}\right)$  rather than  $\left(\frac{F \times L}{W}\right)$ .

The distance (D) between the datum of the airplane in Figure 3-7 and the main-gear weighing points is 7.5 inches, the weight of the tail wheel (R) is 67 pounds, and the distance (L) between the main-wheel and the tail wheel weighing points is 222 inches. The total net weight of the airplane (W) is 1,218 pounds.

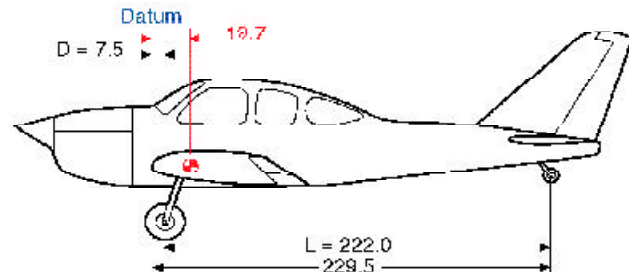


Figure 3-7. The datum of this tail wheel airplane is 7.5 inches forward of the wing root leading edge.

Determine the CG by using this formula:

$$\begin{aligned}
 CG &= D + \left(\frac{R \times L}{W}\right) \\
 &= 7.5 + \left(\frac{67 \times 222}{1,218}\right) \\
 &= 19.7
 \end{aligned}$$

The CG is 19.7 inches behind the datum.

### Datum Aft of the Main Wheels— Tail Wheel Landing Gear

The datum of the airplane in Figure 3-8 is located at the intersection of the wing root trailing edge and the fuselage. This places the arm of the main gear (D) at -80 inches. The net weight of the tail wheel (R) is 67 pounds, the distance between the main wheels and the tail wheel (L) is 222 inches, and the total net weight (W) of the airplane is 1,218 pounds.

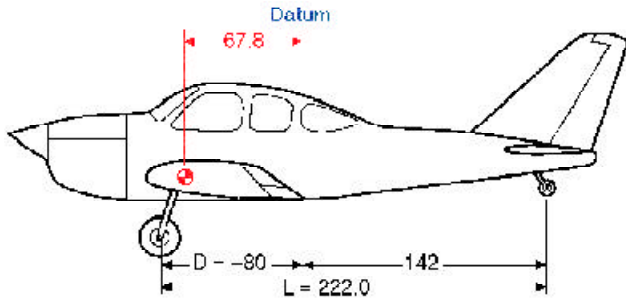


Figure 3-8. The datum is aft of the main wheels, at the intersection of the wing trailing edge and the fuselage.

Since the datum is aft of the main wheels, use this formula:

$$\begin{aligned} CG &= -D + \left( \frac{R \times L}{W} \right) \\ &= -80 + \left( \frac{67 \times 222}{1,218} \right) \\ &= -67.8 \end{aligned}$$

The CG is 67.8 inches forward of the datum, or 12.2 inches aft of the main-gear weighing points. The CG is in exactly the same location relative to the main wheels, regardless of where the datum is located.

### Location with Respect to the Mean Aerodynamic Chord

AMTs are primarily concerned with the location of the CG relative to the datum, an identifiable physical location from which measurements can be made. But because the aerodynamic characteristics of a wing relate to its **chord** length, pilots and flight engineers are more concerned with the location of the CG relative to the chord; and because the mean, or average, physical chord of a tapered wing is difficult to measure, the **mean aerodynamic chord (MAC)** is used. The allowable CG range is expressed in percentages of the MAC.

#### MAC and CG

The location of the CG with respect to the mean aerodynamic chord is important to the flight crew because it predicts the handling characteristics of the aircraft.

The MAC, as seen in Figure 3-9, is the chord of an imaginary airfoil that has all of the aerodynamic characteristics of the actual airfoil. It can also be thought of as the chord drawn through the geographic center of the plan area of the wing.

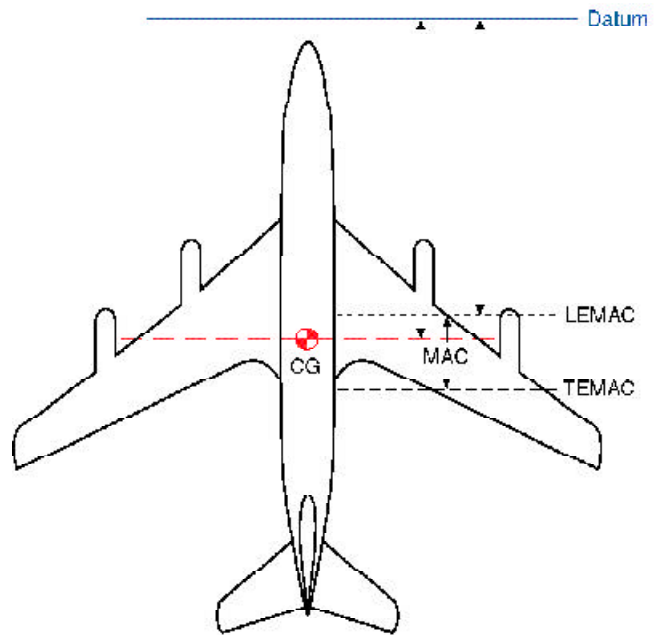


Figure 3-9. The MAC is the chord drawn through the geographic center of the plan area of the wing.

The relative positions of the CG and the aerodynamic center of lift of the wing have critical effects on the flight characteristics of the aircraft. Consequently, relating the CG location to the chord of the wing is convenient from a design and operations standpoint. Normally, an aircraft will have acceptable flight characteristics if the CG is located somewhere near the 25% average chord point. This means the CG is located one-fourth of the total distance back from the leading edge of the wing section. Such a location will place the CG forward of the aerodynamic center for most airfoils.

**Chord:** A straight-line distance across a wing from leading edge to trailing edge.

**Mean aerodynamic chord (MAC):** The chord of an imaginary airfoil that has the same aerodynamic characteristics as the actual airfoil.

In order to relate the percent MAC to the datum, all weight and balance information includes two items: the length of MAC in inches and the location of the **leading edge of MAC (LEMAC)** in inches from the datum.

The weight and balance data of the airplane in Figure 3-10 states that the MAC is from stations 1022 to 1198 and the CG is located at station 1070.

$$\begin{aligned} \text{MAC} &= 1198 - 1022 = 176 \text{ inches} \\ \text{LEMAC} &= \text{station } 1022 \\ \text{CG is } 48 \text{ inches behind LEMAC } (1070 - 1022 &= \\ & 48 \text{ inches}) \end{aligned}$$

The location of the CG expressed in percentage of MAC is determined using this formula:

$$\begin{aligned} \text{CG in \% MAC} &= \frac{\text{Distance aft of LEMAC} \times 100}{\text{MAC}} \\ &= \frac{48 \times 100}{176} \\ &= 27.3 \end{aligned}$$

The CG of the airplane is located at 27.3% MAC.

It is sometimes necessary to determine the location of the CG in inches from the datum when its location in % MAC is known.

$$\begin{aligned} \text{The CG of the airplane is located at } 27.3\% \text{ MAC} \\ \text{MAC} &= 1198 - 1022 = 176 \text{ inches} \\ \text{LEMAC} &= \text{station } 1022 \end{aligned}$$

Determine the location of the CG in inches from the datum by using this formula:

$$\begin{aligned} \text{CG inches from datum} &= \text{LEMAC} + \frac{\text{MAC} \times \text{CG \% MAC}}{100} \\ &= 1,022 + \frac{176 \times 27.3}{100} \\ &= 1,070 \end{aligned}$$

The CG of this airplane is located at station 1070 which is 1,070 inches aft of the datum.

It is important for longitudinal stability that the CG be located ahead of the center of lift of a wing. Since the center of lift is expressed as a percentage of the MAC, the location of the CG is expressed in the same terms. *See* Chapter 6 for more about using % MAC in weight and balance technology, in “Weight and Balance Control—Large Aircraft.”

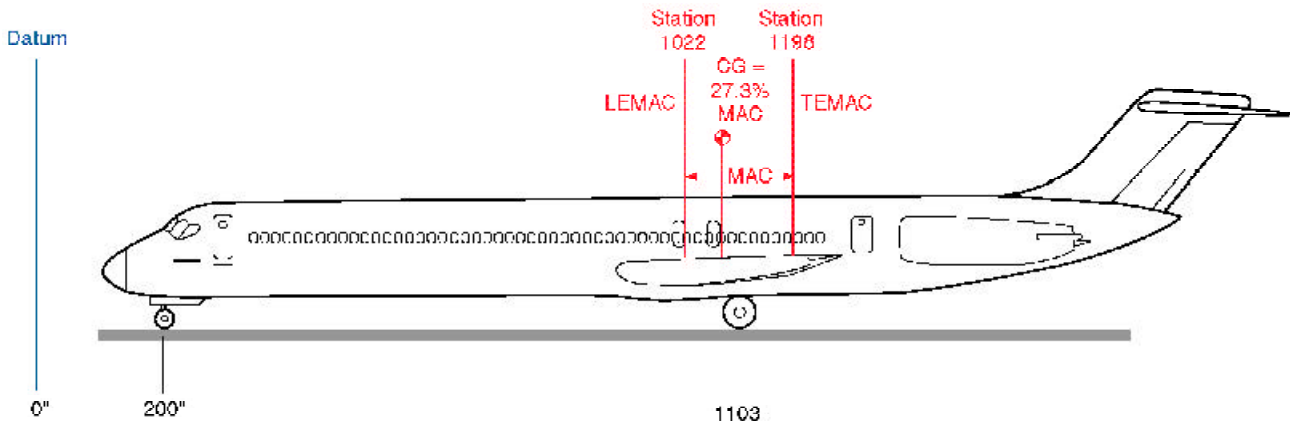


Figure 3-10. Large aircraft weight and balance calculation diagram.

**Leading edge of MAC (LEMAC):** Leading Edge of the Mean Aerodynamic Chord. **TEMAC:** Trailing Edge of the Mean Aerodynamic Chord.

## Chapter 4

# General Aviation Aircraft Operational Weight and Balance Computations

Weight and balance data allows the pilot to determine the loaded weight of the aircraft and determine whether or not the loaded CG is within the allowable range for the weight. See Figure 4-1 for an example of the data necessary for these calculations.

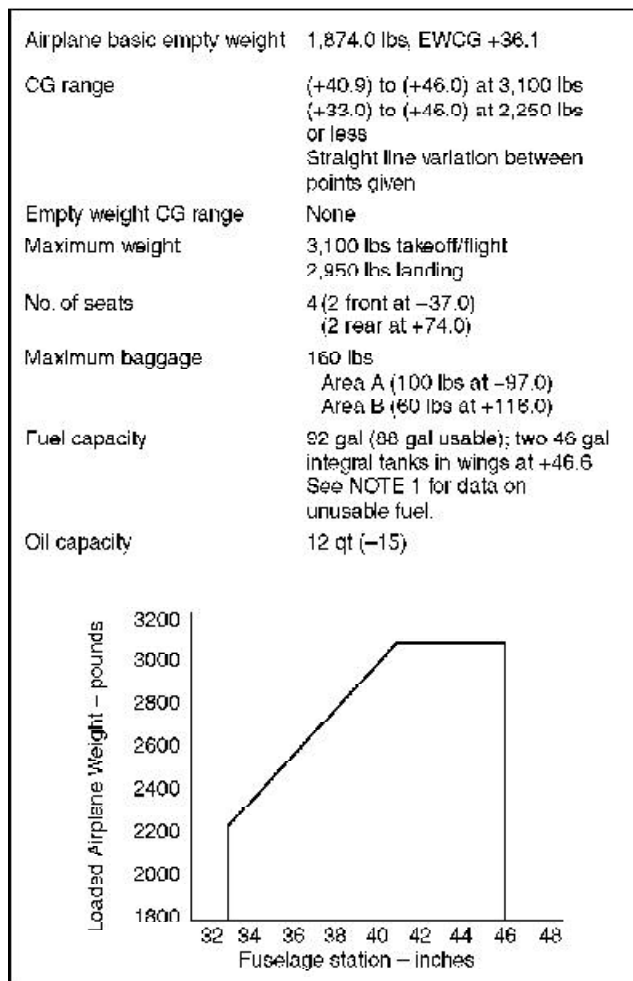


Figure 4-1. Weight and balance data needed to determine proper loading of a 14 CFR, Part 23 airplane.

## Determining the Loaded Weight and CG

An important part of preflight planning is to determine that the aircraft is loaded so its weight and CG location are within the allowable limits. [Figure 4-2] There are two ways of doing this: by the computational method using weights, arms, and moments; and by the **loading graph** method, using weight and **moment indexes**.

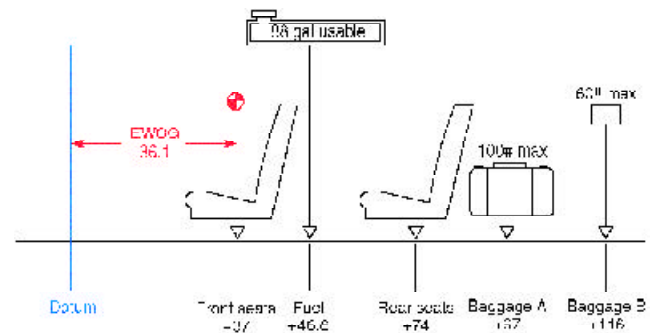


Figure 4-2. Airplane loading diagram.

### Computational Method

The computational method uses weights, arms, and moments and relates the total weight and CG location to a CG limits chart similar to those included in the TCDS and the POH/AFM.

A worksheet such as the one in Figure 4-3 provides space for all of the pertinent weight and balance data. Data is included for the airplane weight, CG, and moment along with the arms of the seats, fuel, and baggage areas.

Item	Weight (3,100 max.)	Arm (inches)	Moment (lb-in)	CG (in/datum)
Airplane (BEW)	1,874	36.1	67,651.4	
Front seats		37		
Rear seats		74		
Fuel (88 gal usable)		46.6		
Baggage A (100 max.)		97		
Baggage B (60 max.)		116		

Figure 4-3. Blank weight and balance worksheet.

When planning the flight, fill in the blanks in the worksheet with the specific data for the flight. [Figure 4-4]

Pilot ..... 120 lbs  
 Front seat passenger ..... 180 lbs  
 Rear seat passengers ..... 175 lbs  
 Fuel 88 gal ..... 528 lbs  
 Baggage A ..... 100 lbs  
 Baggage B ..... 50 lbs

Determine the moment of each item by multiplying its weight by its arm. Then determine the total weight and the sum of the moments. Divide the total moment by the total weight to determine the CG in inches from the datum. The total weight is 3,027 pounds and the CG is 43.54 inches aft of the datum.

To determine that the airplane is properly loaded for this flight, use the **CG limits envelope** in Figure 4-5 (which is typical of those found in the POH/AFM). Draw a line vertically upward from the CG of 43.54 inches, and one horizontally to the right from the loaded weight of 3,027 pounds. These lines cross inside the envelope, which shows the airplane is properly loaded for takeoff, but 77 pounds overweight for landing.

**Loading Graph Method**

Everything possible is done to make flying safe, and one expedient method is the use of charts and graphs from the POH/AFM to simplify and speed up the preflight weight and balance computations. Some use a loading graph and moment indexes rather than the arms and moments. These charts eliminate the need for calculating the moments and thus make computations quicker and easier. [Figure 4-5]

Item	Weight (3,100 max.)	Arm (inches)	Moment (lb-in)	CG (in/datum)
Airplane (BEW)	1,874	36.1	67,651.4	
Front seats	300	37	11,100	
Rear seats	175	74	12,950	
Fuel (88 gal usable)	528	46.6	24,604.8	
Baggage A (100 max.)	100	97	9,700	
Baggage B (60 max.)	50	116	5,800	
	3,027		131,806.2	+ 43.54

Figure 4-4. Completed weight and balance worksheet.

**Loading Graph Method**

Loading graphs simplify weight and balance computations because they eliminate the need for multiplication when computing a loaded CG.

**Loading graph:** A graph of load weight and load moment indexes. Diagonal lines for each item relate the weight to the moment index without having to use mathematics.

**Moment index:** A moment that has been divided by a reduction factor to obtain a smaller number to make computations easier and reduce the likelihood of mathematical errors.

**CG limits envelope:** An enclosed area on a graph of the airplane loaded weight and the CG location. If lines drawn from the weight and CG cross within this envelope, the airplane is properly loaded.

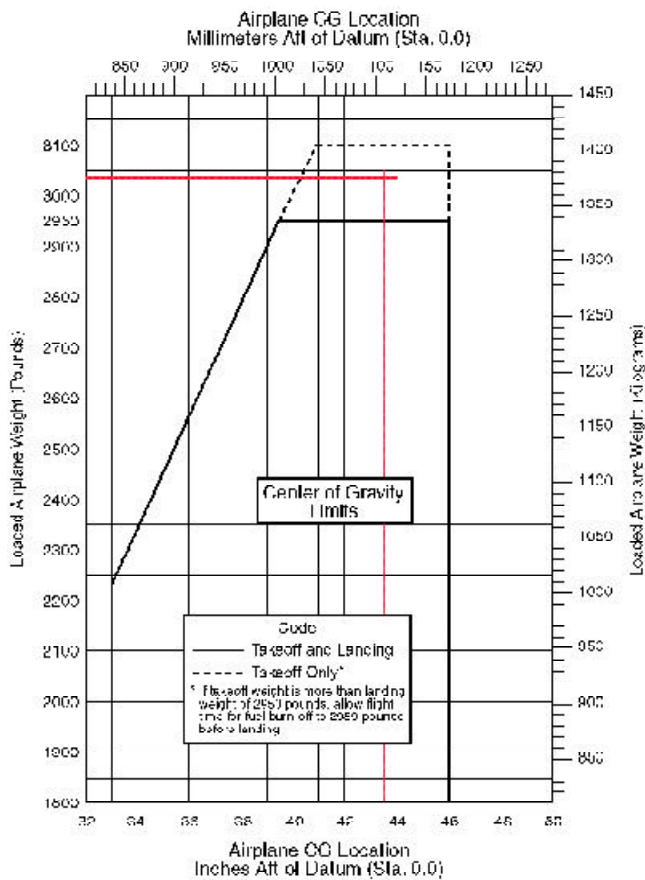


Figure 4-5. Center of gravity limits chart from a typical POH.

### Moment Indexes

Moments determined by multiplying the weight of each component by its arm result in large numbers that are awkward to handle and can become a source of mathematical error. To eliminate these large numbers, moment indexes are used. The moment is divided by a **reduction factor** such as 100 or 1,000 to get the moment index. The loading graph provides the moment index for each component, so you can avoid mathematical calculation. The CG envelope uses moment indexes rather than arms and moments.

### Loading Graph

Figure 4-6 (see Page 4-4) is a typical loading graph taken from the POH of a modern four-place GA airplane. To compute the weight and balance, using the loading graph in Figure 4-6, make a **loading schedule** chart like the one in Figure 4-7.

In Figure 4-6, follow the horizontal line for 300 pounds load weight to the right until it intersects the diagonal line for pilot and front passenger. From this point, drop a line vertically to the load moment index along the bottom to determine the load moment for the front seat occupants. This is 11.1 lb-in/1,000. Record it in the loading schedule chart.

Determine the load moment for the 175 pounds of rear seat occupants along the diagonal for 2nd row passengers or cargo. This is 12.9; record it in the loading schedule chart.

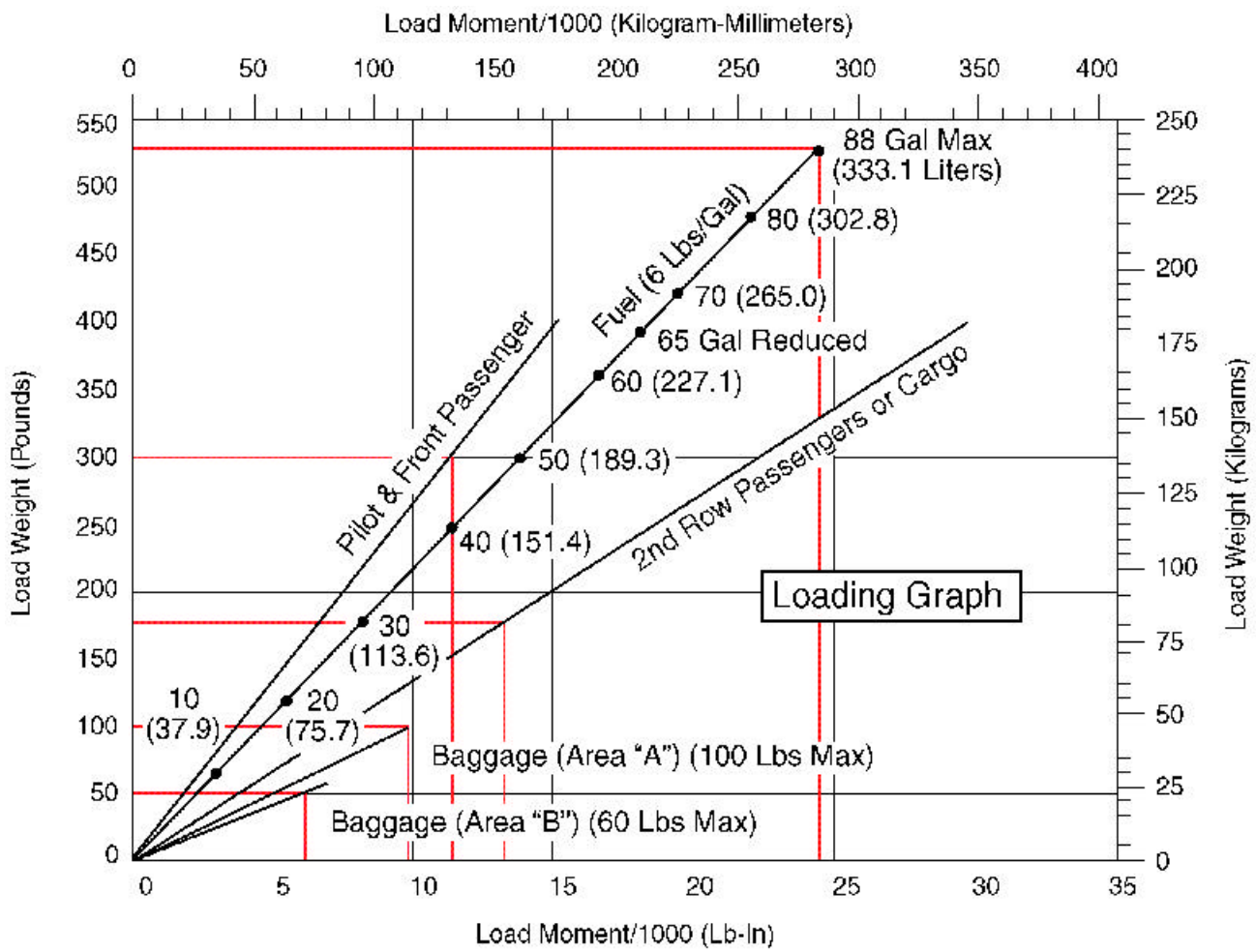
Item	Weight	Moment/1000
Airplane (BEW)	1,874	67.7
Front seat	300	11.1
Rear seat	175	12.9
Fuel	528	24.6
Baggage A	100	9.7
Baggage B	50	5.8
Total	3,027	131.8

Figure 4-7. Loading schedule chart.

**Reduction factor:** The number, usually 100 or 1,000, that is used to divide the moment to get the moment index.

**Loading schedule:** A chart filled in by the pilot during preflight planning that lists the weight and moment indexes of all occupants, fuel, and baggage.





Note: Line representing adjustable seats shows pilot and front seat passenger center of gravity on adjustable seats positioned for an average occupant. Refer to the Loading Arrangements diagram for forward and aft limits of occupant CG range.

Figure 4-6. Loading graph.



Determine the load moment for the fuel and the baggage in areas A and B in the same way and enter them all in the loading schedule chart. The maximum fuel is marked on the diagonal line for fuel in terms of gallons and liters. The maximum is 88 gallons of **usable fuel**. The total capacity is 92 gallons, but 4 gallons are unusable and have already been included in the empty weight of the aircraft. The weight of 88 gallons of gasoline is 528 pounds and its moment index is 24.6. The 100 pounds of baggage in area A has a moment index of 9.7 and the 50 pounds in area B has an index of 5.8. Enter all of these weights and moment indexes in the loading schedule chart and add all of the weights and moment indexes to determine the totals. Transfer these values to the **CG moment envelope** in Figure 4-8.

The loading schedule shows that the total weight of the loaded aircraft is 3,027 pounds, and the loaded airplane moment/1,000 is 131.8.

Draw a line vertically upward from 131.8 on the horizontal index at the bottom of the chart, and a horizontal line from 3,027 pounds in the left-hand vertical index. These lines intersect within the dashed area which shows that the aircraft is loaded properly for takeoff but it is too heavy for landing.

If the aircraft had to return for landing, it would have to fly long enough to burn off 77 pounds (slightly less than 13 gallons) of fuel to reduce its weight to the amount allowed for landing.

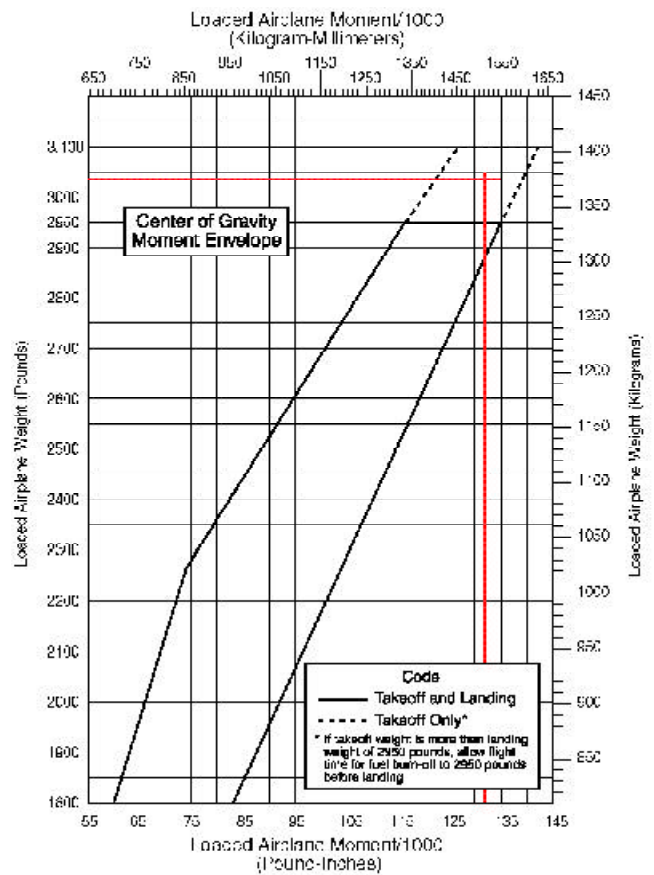


Figure 4-8. CG moment envelope.

**Usable fuel (GAMA):** Fuel available for flight planning.

**CG moment envelope:** An enclosed area on a graph of the airplane loaded weight and loaded moment. If lines drawn from the weight and loaded moment cross within this envelope, the airplane is properly loaded.

## Multiengine Airplane Weight and Balance Computations

Weight and balance computations for general aviation multiengine airplanes are similar to those discussed for single-engine airplanes. Computations for large airline and cargo airplanes are discussed in Chapter 6. See Figure 4-9 for an example of weight and balance data for a typical twin-engine general aviation airplane.

<b>Datum</b> —Forward face of fuselage bulkhead ahead of rudder pedals	
<b>Seats</b>	
2	at 37.0
2	at 75.0
1	at 113.0—Weight limit 200 lbs
<b>Fuel</b>	
213.4 gal	(2 wing tanks, 105.0 gal each 103.0 gal usable at +61.0)
Undrainable fuel	—1.6 lbs at +62
<b>Oil</b>	
24 quarts	(12 quarts in each engine)— -3.3
<b>Baggage</b>	
Forward 100# limit	— -15
Aft 200# limit	— +113
<b>CG Range</b>	
(+38) to (+43.1)	at 5,200 lbs
(+43.8)	at 4,800 lbs
(+32) to (+43.8)	at 4,300 lbs or less
Straight line variation between points given	
<b>Engines (2)</b> 240 horsepower horizontally opposed engines	
Fuel burn	—24 gph for 65% cruise at 175 knot
	29 gph for 75% cruise at 180 knot

Figure 4-9. Typical weight and balance data for a twin-engine general aviation airplane.

The airplane in this example was weighed to determine its basic empty weight and EWCG. The weighing conditions and results are:

- Fuel drained —
- Oil full —
- Right wheel scales — 1,084 lbs, tare 8 lbs
- Left wheel scales — 1,148 lbs, tare 8 lbs
- Nose wheel scales — 1,202 lbs, tare 14 lbs

## Determining the Loaded CG

Beginning with the basic empty weight and EWCG and using a chart such as the one in Figure 4-11, the loaded weight and CG of the aircraft can be determined. [Figure 4-10]

The aircraft is loaded as shown here:

Fuel (140 gal)	.....	840 lbs
Front seat	.....	320 lbs
Row 2 seats	.....	310 lbs
Fwd. baggage	.....	100 lbs
Aft baggage	.....	90 lbs

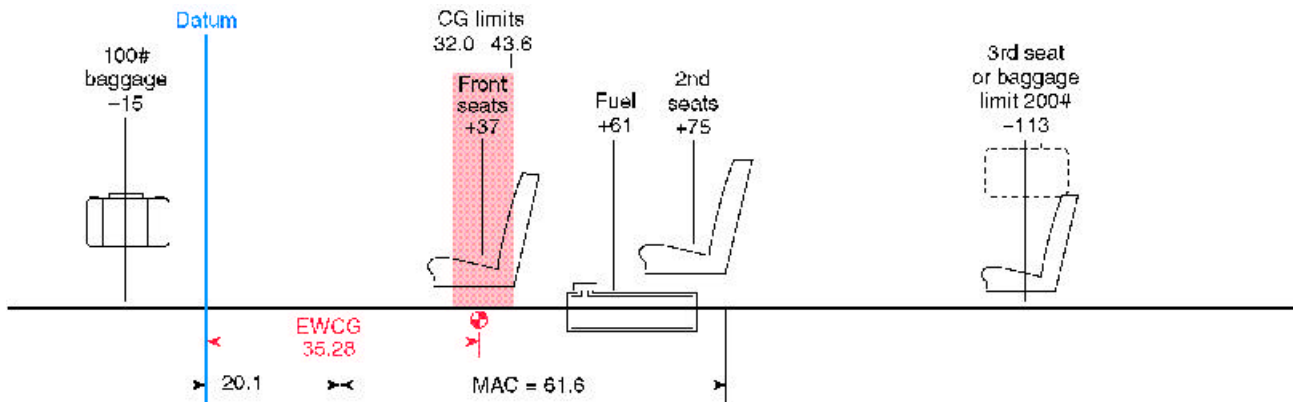


Figure 4-10. Twin-engine airplane weight and balance diagram.

### The Chart Method Using Weight, Arm, and Moments

Make a chart showing the weights, arms, and moments of the airplane and its load.

Item	Weight pounds (5,200 max.)	Arm (inches)	Moment (lb-in)	CG
Aircraft	3,404	35.28	120,093	
Fuel (140 gal)	840	61.0	51,240	
Front seat	320	37.0	11,840	
Row 2 seats	310	75.0	23,250	
Fwd. baggage	100	-15	-1,500	
Aft baggage	90	113	10,170	
Total	5,064		215,093	42.47

Figure 4-11. Determining the loaded center of gravity of the airplane in Figure 4-10.

The loaded weight for this flight is 5,064 pounds, and the CG is located at 42.47 inches aft of the datum.

To determine that the weight and CG are within the allowable range, refer to the CG range chart of Figure 4-12. Draw a line vertically upward from 42.47 inches from the datum and one horizontally from 5,064 pounds. These lines cross inside the envelope, showing that the airplane is properly loaded.

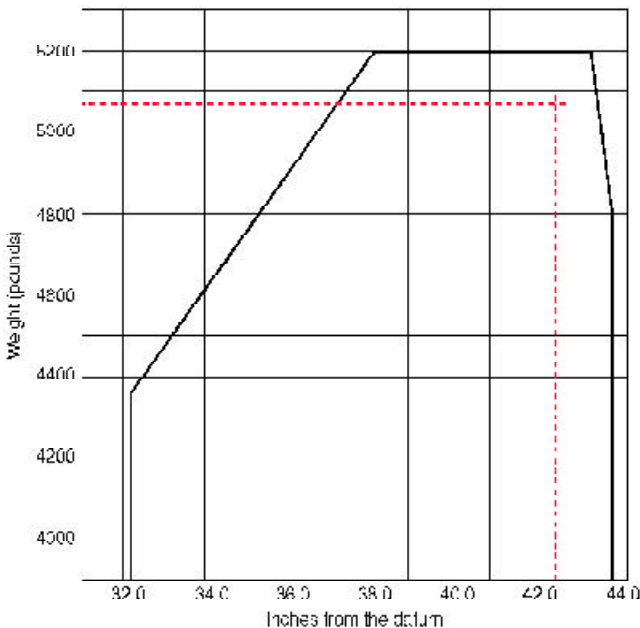


Figure 4-12. Center of gravity range chart.

### Determining the CG in Percent of MAC

Refer again to Figures 4-10 and 4-11.

The loaded CG is 42.47 inches aft of the datum.

The MAC is 61.6 inches long.

The LEMAC is located at station 20.1.

The CG is  $42.47 - 20.1 = 22.37$  inches aft of LEMAC.

Use this formula:

$$\begin{aligned} \text{CG in \% MAC} &= \frac{\text{CG in inches from LEMAC} \times 100}{\text{MAC}} \\ &= \frac{22.37 \times 100}{61.6} \\ &= 36.3\% \text{ MAC} \end{aligned}$$

The loaded CG is located at 36.3% of the mean aerodynamic chord.

### The Chart Method Using Weight and Moment Indexes

As mentioned in the previous chapter, anything that can be done to make careful preflight planning easier makes flying safer. Many manufacturers furnish charts in the POH/AFM that use weight and moment indexes rather than weight, arm, and moments. They further help reduce errors by including tables of moment indexes for the various weights.

Consider the loading for this particular flight:

Cruise fuel flow = 16 gallons per hour

Estimated time en route = 2 hours 10 minutes

Reserve fuel = 45 minutes = 12 gallons

Total required fuel = 47 gallons

The pilot completes a chart like the one in Figure 4-13 using moment indexes from the tables in Figures 4-14 through 4-16.

## Weight and Balance Loading Form

Model \_\_\_\_\_ Date \_\_\_\_\_  
 Serial Number \_\_\_\_\_ Reg. Number \_\_\_\_\_

Item	Pounds (3,900 max.)	Index Moment/100
Airplane basic empty weight	2,625	2,864
Front seat occupants	320	336
Row 2 seats	290	412
Baggage (200# max.)	90	150
<b>Sub Total</b>		
Zero fuel condition (3,500 max.)	3,325	3,762
Fuel loading – gallons <u>80</u>	480	562
<b>Sub Total</b>		
Ramp condition	3,805	4,324
*Less fuel for start, taxi, and takeoff	-24	-14
<b>Sub Total</b>		
Takeoff condition	3,781	4,310
Less fuel to destination – gallons <u>35</u>	-210	-246
<b>Landing condition</b>	<b>3,571</b>	<b>4,064</b>

\* Fuel for start, taxi, and takeoff is normally 24 pounds at a moment index of 14.

Figure 4-13. Typical weight and balance loading form.

The moments/100 in the index column are found in the charts in Figures 4-14 through 4-16. If the exact weight is not in the chart, **interpolate** between the weights that are included. When a weight is greater than any of those shown in the charts, add the moment indexes for a combination of weights to get that which is desired. For example, to get the moments/100 for the 320 pounds in the front seat, add the moment indexes for 100 pounds (105) to that for 220 pounds (231). This gives the moment index of 336 for 320 pounds in the front seat.

Use the **moment limits vs. weight envelope** in Figure 4-17 on Page 4-10 to determine if the weight and balance conditions will be within allowable limits for both takeoff and landing at the destination.

**Interpolate:** To determine a value in a series between two known values.

**Moment limits vs. weight envelope:** An enclosed area on a graph of three parameters. The diagonal line representing the moment/100 crosses the horizontal line representing the weight at the vertical line representing the CG location in inches aft of the datum. When the lines cross inside the envelope, the aircraft is loaded within its weight and CG limits.

Takeoff — 3,781 lbs and 4,310 moment/100  
 Landing — 3,571 lbs and 4,064 moment/100

Locate the moment/100 diagonal line for 4,310 and follow it down until it crosses the horizontal line for 3,781 pounds. These lines cross inside the envelope at the vertical line for a CG location of 114 inches aft of the datum.

The maximum allowable takeoff weight is 3,900 pounds, and this airplane weighs 3,781 pounds. The CG limits for 3,781 pounds are 109.8 to 117.5. The CG of 114 inches falls within these allowable limits.

Occupants Moments/100		
Weight	Front seats Arm +105	Row 2 seats Arm +142
100	105	142
110	116	156
120	126	170
130	137	185
140	147	199
150	158	213
160	168	227
170	179	241
180	189	256
190	200	270
200	210	284
210	221	298
220	231	312
230	242	327
240	252	341
250	263	355

Figure 4-14. Weight and moment index for occupants.

Baggage Moments/100	
Weight	Arm 167
10	17
20	33
30	50
40	67
50	84
60	100
70	117
80	134
90	150
100	167
110	184
120	200
130	217
140	234
150	251
160	267
170	284
180	301
190	317
200	334

Figure 4-15. Weight and moment index for baggage.

Usable Fuel – Arm +117		
Gallons	Pounds	Moment/100
10	60	70
20	120	140
30	180	211
40	240	281
50	300	351
60	360	421
70	420	491
80	480	562
90	540	632
100	600	702

Figure 4-16. Weight and moment index for fuel.

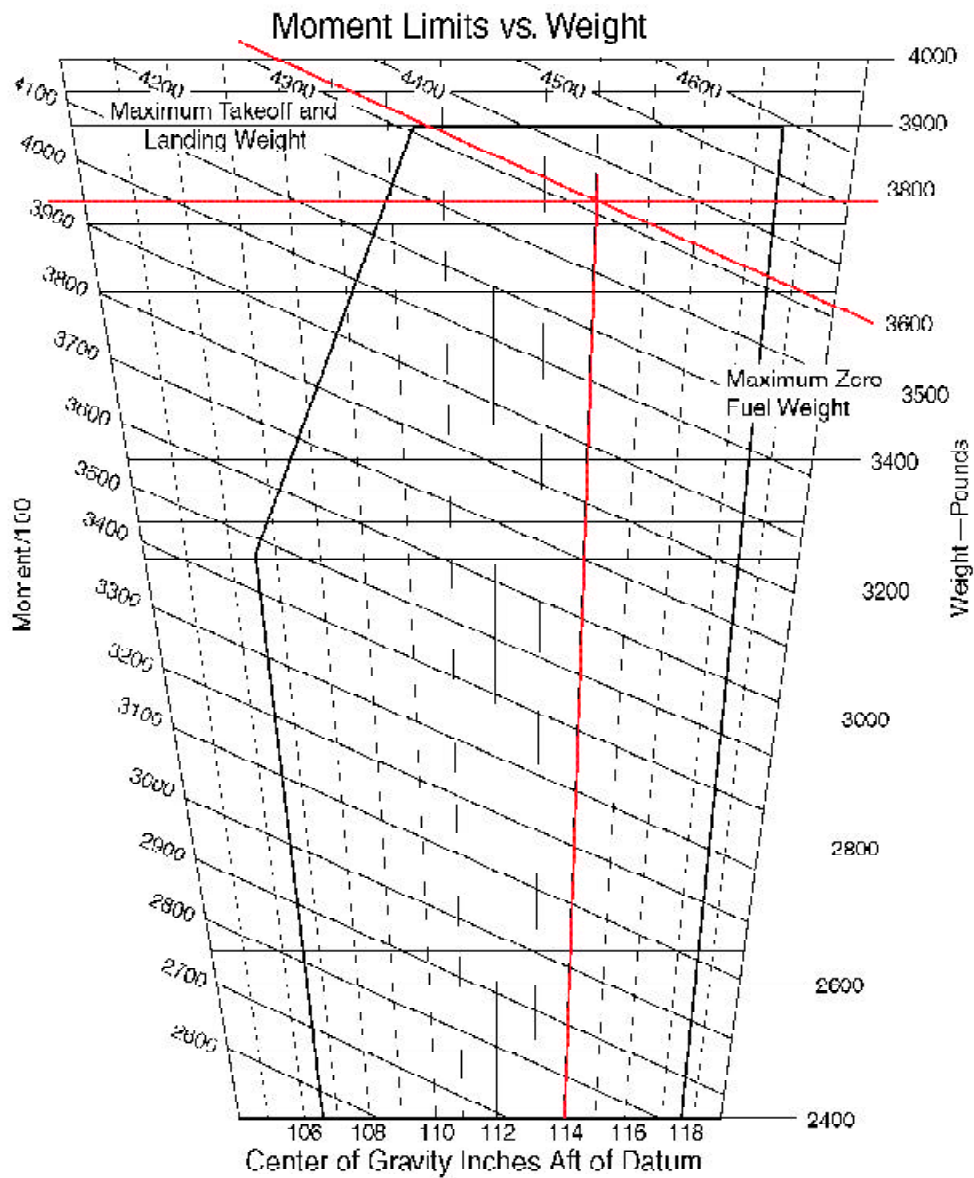
**Interpolation**

Determine the weight and moment index of 55 gallons of fuel

Gallons	Pounds	Moment/100
50	300	351
60	360	421

55 is 50% of the way between 50 and 60. The weight and moment index of 55 gallons is 50% of the difference between the weights and moment indexes for 50 gallons and 60 gallons.

Weight	Moment index
360 – 300 = 60.	421 – 351 = 70.
50% of 60 = 30.	50% of 70 = 35.
300 + 30 = 330.	351 + 35 = 386.



Envelope Based on the Following Weight and  
Center of Gravity Limit Data (Landing Gear Down)

Weight Condition	FWD CG Limit	Aft CG Limit
3,900 Pounds (Max Takeoff/Landing)	110.6	117.5
3,250 Pounds or Less	106.6	117.5

Figure 4-17. Moment limits vs. weight envelope.



## Chapter 5

# Center of Gravity Change After Repair or Alteration

The largest weight changes that occur during the lifetime of an aircraft are those caused by alterations and repairs. It is the responsibility of the AMT doing the work to accurately document the weight change and record it in both the maintenance records and the POH/AFM.

### Equipment List

A typical comprehensive equipment list is shown in Figure 2-22 on Page 2-13. Addition or removal of equipment included in this list is considered by the FAA to be a **minor alteration**. The weights and arms are included with the items in the equipment list, and these minor alterations can be done and the aircraft approved for return to service by an appropriately rated AMT. The only documentation required

is an entry in the aircraft maintenance records and the appropriate change to the weight and balance record in the POH/AFM. [Figure 5-1]

Any **major alteration** or repair requires the work to be done by an appropriately rated AMT or facility. The work must be checked for conformity to FAA-approved data and signed off by an AMT holding an Inspection Authorization, or by an authorized agent of an appropriately rated FAA-approved repair station. A repair station record or an FAA Form 337, *Major Repair and Alteration*, must be completed which describes the work. A dated and signed revision to the weight and balance record is made and kept with the maintenance records, and the airplane's new empty weight and empty weight arm or moment index are entered in the POH/AFM.

Description	Weight		Arm		Moment	
	(lb)	(kg)	(in)	(cm)	(lb-in)	(kg-cm)
Empty weight	1,200	544	100	100	120,000	54,400
Oil	15	7	100	100	1,500	700
...	...	...	...	...	...	...
Total	1,215	551	100	100	121,500	55,100

Figure 5-1. Typical Part 23 weight and balance record.

**Minor alteration:** An alteration other than a major alteration. This includes alterations that are listed in the aircraft, aircraft engine, or propeller specifications.

**Major alteration:** An alteration not listed in the aircraft, aircraft engine, or propeller specifications —

- (1) That might appreciably affect weight, balance, structural strength, performance, powerplant operation, flight characteristics, or other qualities affecting airworthiness; or
- (2) That is not done according to accepted practices or cannot be done by elementary operations.

**WEIGHT & BALANCE**

Date: 04/22/82

04/22/82

COMMERCIAL AIRCRAFT SERVICE OF EV & B...  
231-4810-1000

**REMOVED THE FOLLOWING EQUIPMENT:**

1	TYPE COPIER FOR PIA CABIN USE	103.00
2	DISCREETOR CASE FOR CABIN	60.00
		<u>163.00</u>

WEIGHT	MOMENT
103.00	13.00
60.00	4.00
<u>163.00</u>	<u>17.00</u>

**REMOVED THIS WEIGHT:**

04.00	0.00
07.20	0.00
<u>11.20</u>	<u>0.00</u>

**INSTALLED THE FOLLOWING EQUIPMENT:**

1	TYPE COPIER FOR PIA CABIN USE	103.00
2	DISCREETOR CASE FOR CABIN	60.00

WEIGHT	MOMENT
103.00	13.00
60.00	4.00
<u>163.00</u>	<u>17.00</u>

**\* RECALCULATED EMPTY WEIGHT**

11.20 30.00 11.20

**NEW WEIGHT OF LOAD TABLE**

**REMOVED CHECK (LIMIT +33.0)**

**REMOVED CHECK (LIMIT +33.0)**

	WT	ARM	MOMENT
VAC. FUEL	1823.38	32.18	58833.12
PAID. FUEL	130.00	23.00	2990.00
PILOT (1000)	112.00	48.00	5376.00
PASSENGER P			
CHECK	108.38	+30.81	3324.12

	WT	ARM	MOMENT
VAC. FUEL	1823.38	32.18	58833.12
PAID. FUEL	130.00	23.00	2990.00
PILOT (1000)	112.00	48.00	5376.00
PASSENGER P	108.38	30.81	3324.12
CHECK	108.38	30.81	3324.12

Handwritten signatures and stamps at the bottom of the page.

Figure 5-2. A typical CAR 3 airplane weight and balance revision record.

## Weight and Balance Revision Record

Aircraft manufacturers use different formats for their weight and balance data, but Figure 5-2 is typical of a weight and balance revision record. All weight and balance records should be kept with the other aircraft records. Each revision record should be identified by the date and the aircraft make, model, and serial number. The pages should be signed by the person making the revision and his or her certificate type and number must be included.

The computations for a weight and balance revision are included on a weight and balance revision form. The date these computations were made is shown in the upper right-hand corner of Figure 5-2. When this work is superseded, a notation must be made on the new weight and balance revision form, including a statement that these computations supersede the computations dated “xx/xx/xx.”

Appropriate fore and aft extreme loading conditions should be investigated and the computations shown.

The weight and balance revision sheet should clearly show the revised empty weight, empty weight arm and/or moment index, and the new **useful load**.

## Weight Changes Caused by a Repair or Alteration

A typical alteration might consist of removing two pieces of radio equipment from the instrument panel, and a power supply that was located in the baggage compartment behind the rear seat. In this example, these two pieces are replaced with a single lightweight, self-contained radio. At the same time, an old emergency locator transmitter (ELT) is removed from its mount near the tail, and a lighter weight unit is installed. A passenger seat is installed in the baggage compartment.

### Computations Using Weight, Arm, and Moment

The first step in the weight and balance computation is to make a chart like the one in Figure 5-3, listing all of the items that are involved.

The new CG of 36.4 inches aft of the datum is determined by dividing the new moment by the new weight.

Item	Weight (lbs)	Arm (inches)	Moment (lb-in)	New CG
Airplane	1,876.0	36.1	67,723.6	
Radio removed	-12.2	15.8	-192.8	
Power supply removed	-9.2	95.0	-874.0	
ELT removed	-3.2	135.0	-432.0	
Radio installed	+8.4	14.6	+122.6	
ELT installed	+1.7	135.0	+229.5	
Passenger seat installed	+21.0	97.0	+2,037.0	
Total	1,882.5		68,613.9	+36.4

Figure 5-3. *Weight, arm, and moment changes caused by a typical alteration.*

### After an Alteration

When determining the new weight and CG after an alteration, take these steps:

1. Subtract the weights and moments of all items removed.
2. Add the weights and moments of all items added.
3. Determine the new total weight and total moment.
4. Divide the total moment by the total weight and the new CG in inches from the datum.

**Useful load (GAMA):** Difference between takeoff weight, or ramp weight if applicable, and basic empty weight.

Computations Using Weight and Moment Indexes  
 If the weight and balance data uses moment indexes rather than arms and moments, this same alteration can be computed using a chart like the one shown in Figure 5-4.

Subtract the weight and moment indexes of all the removed equipment from the empty weight and moment index of the airplane. Add the weight and moment indexes of all equipment installed and determine the total weight and the total moment index. To determine the position of the new CG in inches aft of the datum, multiply the total moment index by 100 to get the moment, and divide this by the total weight to get the new CG.

### Empty-Weight CG Range

The fuel tanks, seats, and baggage compartments of some aircraft are so located that changes in the fuel or occupant load have a very limited effect on the balance of the aircraft. Aircraft of such a configuration show an EWCG range in the TCDS. [Figure 5-5] If the EWCG is located within this range, it is impossible to legally load the aircraft so that its loaded CG will fall outside of its allowable range.

<b>Empty-Weight CG Range</b>	+12.5 to +16.2
------------------------------	----------------

Figure 5-5. Typical notation in a TCDS when an aircraft has an empty-weight CG range.

If the TCDS lists an empty-weight CG range, and after the alteration is completed the EWCG falls within this range, then there is no need to compute a fore and aft check for adverse loading. But if the TCDS lists the EWCG range as “none” (and most of them do), a check must be made to determine whether or not it is possible by any combination of legal loading to cause the aircraft CG to move outside of either its forward or aft limits.

### Adverse-Loaded CG Checks

Most modern aircraft have multiple rows of seats and often more than one baggage compartment. After any repair or alteration that changes the weight and balance, the AMT must ensure that no legal condition of loading can move the CG outside of its allowable limits. To determine this, adverse-loaded CG checks must be performed and the results noted in the weight and balance revision sheet.

Item	Weight (lbs)	Moment Indexes (lb-in/100)	New CG (inches from datum)
Airplane	1,876.0	+677.2	
Radio removed	-12.2	-1.93	
Power supply removed	-9.2	-8.74	
ELT removed	-3.2	-4.32	
Radio installed	+8.4	+1.23	
ELT installed	+1.7	+2.29	
Passenger seat installed	+21.0	-20.37	
<b>Total</b>	<b>1,882.5</b>	<b>+686.1</b>	<b>+36.4</b>

Figure 5-4. Weight and moment index changes caused by a typical alteration.

### Steps for Using Weight and Moment Indexes

When determining the new weight and CG using weight and moment indexes, take these steps:

1. Subtract the weights and moment indexes of all items removed.
2. Add the weights and moment indexes of all items added.
3. Determine the new total weight and total moment index.
4. Divide the total moment index by the total weight and multiply this by the reduction factor (in this case 100) to determine the new CG in inches from the datum.

For examples of adverse-loaded CG checks, use the information in Figure 5-6:

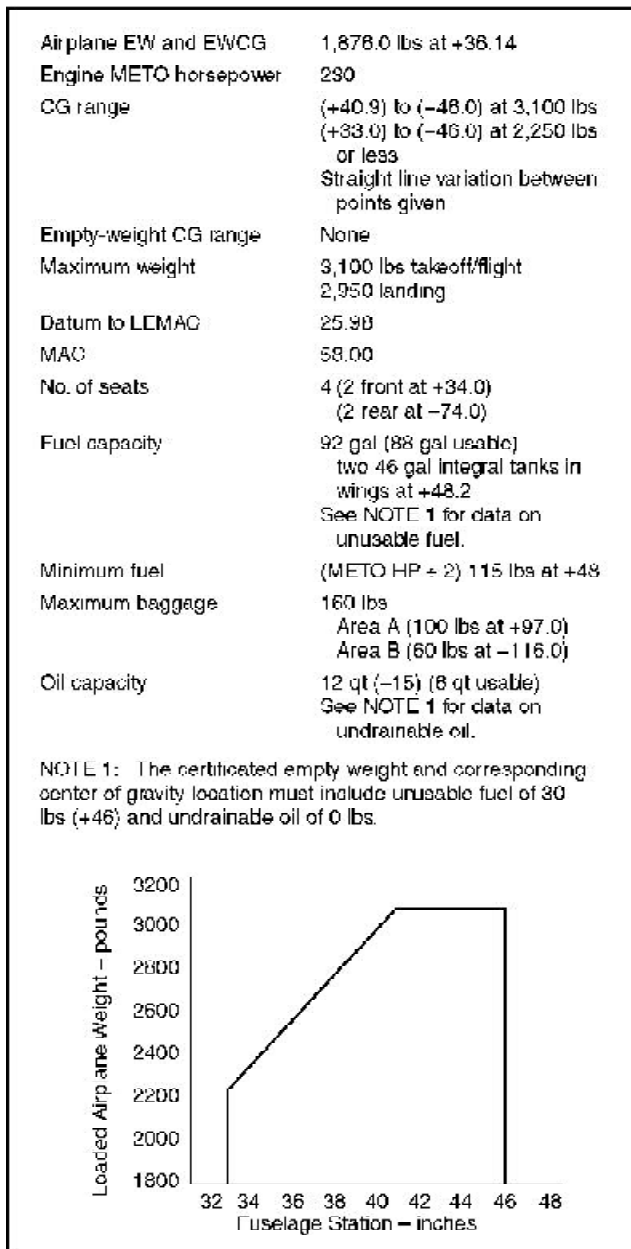


Figure 5-6. Weight and balance information used for adverse-loaded CG checks.

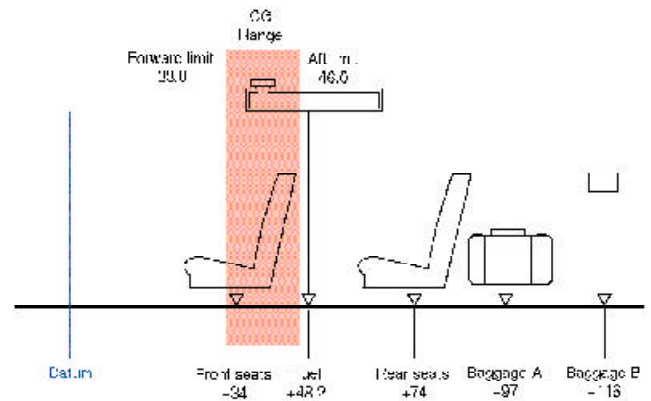


Figure 5-7. Loading diagram for adverse-loaded CG checks.

### Forward Adverse-Loaded CG Check

To conduct a forward CG check, make a chart that includes the airplane and any occupants and items of the load located in front of the forward CG limit. [Figure 5-7] Include only those items behind the forward limit that are essential to flight. This is the pilot and the minimum fuel.

In this example, the pilot, whose nominal weight is 170 pounds, is behind the forward CG limit. The fuel is also behind the forward limit, so the minimum fuel is used. For weight and balance purposes, the minimum fuel is no more than the quantity needed for one-half-hour of operation at rated maximum continuous power. This is considered to be  $\frac{1}{2}$  gallon for each **maximum except takeoff (METO) horsepower**. Because aviation gasoline weighs 6 pounds per gallon, determine the number of pounds of the minimum fuel by dividing the METO horsepower by 2; in this example, minimum fuel is 115 pounds.

The front and rear seats and the baggage are all behind the forward CG limit so no passengers or baggage are considered.

Make a chart like the one in Figure 5-8 to determine the CG with the aircraft loaded for its most forward CG. With the load consisting of only the pilot and the minimum fuel, the CG is +36.6, which is behind the most forward allowable limit for this weight of +33.0.

### Maximum except takeoff (METO) horsepower:

The maximum power allowed to be continuously produced by an engine. Takeoff power is usually limited to a given amount of time, such as 1 minute or 5 minutes.

Item	Weight (lbs)	Arm (inches)	Moment (lb-in)	Most Forward CG +33.0
Airplane – empty	1,876.0	36.14	67,798.6	
Pilot	170.0	34.0	5,780.0	
Fuel (minimum)	115.0	48.0	5,520.0	
<b>Total</b>	<b>2,161.0</b>		<b>79,098.6</b>	<b>+36.6</b>

Figure 5-8. Load conditions for forward adverse-loaded CG check.

### Aft Adverse-Loaded CG Check

To conduct an aft, or rearward, **CG check**, make a chart that includes the empty weight and EWCG of the aircraft after the alteration, and all occupants and items of the load behind the aft CG limit of 46.0. The pilot is in front of this limit, but is essential for flight and must be included. In this example, only the pilot will occupy the front seat. Since the CG of the fuel is behind the aft limit, full fuel will be used as well as the nominal weight for both rear seat passengers and the maximum allowable baggage.

Under these loading conditions, the CG is located at +45.8, which is ahead of the aft limit of +46.0. [Figure 5-9]

With only the pilot in front of the aft CG limit and the maximum of all items behind the aft limit, the CG will be at +45.8 inches, which is ahead of the aft limit of +46.0 inches.

Item	Weight (lbs)	Arm (inches)	Moment (lb-in)	Most Aft CG +46.0
Airplane – empty	1,876.0	36.14	67,798.6	
Pilot	170.0	34.0	5,780.0	
Fuel (full tanks – 88 gal.)	528.0	48.2	25,449.6	
Rear seat occupants (2)	340.0	74.0	25,160.0	
Baggage A	100.0	97.0	9,700.0	
Baggage B	60.0	116.0	6,960.0	
<b>Total</b>	<b>3,074.0</b>		<b>140,848.2</b>	<b>+45.8</b>

Figure 5-9. Load conditions for aft adverse-loaded CG check.

### Minimum Fuel

Minimum fuel for weight and balance purposes is no more than the quantity needed for one-half-hour of operation at rated maximum continuous power. This is considered to be  $1\frac{1}{2}$  gallon for each METO horsepower. The weight of the minimum fuel is determined by dividing the METO horsepower by 2.

### Adverse-Loaded CG Checks

Adverse-loaded CG checks are made to determine that no legal loading condition can cause the CG to fall outside of the allowable limits. Use these loading conditions for each check:

#### Forward Adverse-Loaded CG Check:

- All items of load ahead of the forward CG limit.
- Only the pilot and minimum fuel if they are behind the forward CG limit.

#### Aft Adverse-Loaded CG Check:

- All items of load behind the aft CG limit.
- Only the pilot and minimum fuel if they are ahead of the aft CG limit.

### Adverse-loaded CG check:

A weight and balance check to determine that no condition of legal loading can move the CG outside of its allowable limits.

## Ballast

It is possible to load most modern airplanes so the center of gravity shifts outside of the allowable limits. Placards and loading instructions in the Weight and Balance Data inform the pilot of the restrictions that will prevent such a shift from occurring. A typical placard in the baggage compartment of an airplane might read:

When rear row of seats is occupied, 120 pounds of baggage or ballast must be carried in forward baggage compartment. For additional loading instructions, see Weight and Balance Data.

When the CG of an aircraft falls outside of the limits, it can usually be brought back by using **ballast**.

### Temporary Ballast

Temporary ballast, in the form of lead bars or heavy canvas bags of sand or lead shot, is often carried in the baggage compartments to adjust the balance for certain flight conditions. The bags are marked “Ballast XX Pounds — Removal Requires Weight and Balance Check.” Temporary ballast must be secured so it cannot shift its location in flight, and the structural limits of the baggage compartment must not be exceeded. All temporary ballast must be removed before the aircraft is weighed.

### Permanent Ballast

If a repair or alteration causes the aircraft CG to fall outside of its limits, permanent ballast can be installed. Usually, permanent ballast is made of blocks of lead painted red and marked “Permanent Ballast — Do Not Remove.” It should be attached to the structure so that it does not interfere with any control action, and attached rigidly enough that it cannot be dislodged by any flight maneuvers or rough landing.

**Ballast:** A weight installed or carried in an aircraft to move the center of gravity to a location within its allowable limits.

Two things must first be known to determine the amount of ballast needed to bring the CG within limits: the amount the CG is out of limits, and the distance between the location of the ballast and the limit that is affected.

If an airplane with an empty weight of 1,876 pounds has been altered so its EWCG is +32.2, and the CG range for weights up to 2,250 pounds is +33.0 to +46.0, permanent ballast must be installed to move the EWCG from + 32.2 to +33.0. There is a bulkhead at fuselage station 228 strong enough to support the ballast.

To determine the amount of ballast needed, use this formula:

$$\begin{aligned} \text{Ballast weight} &= \frac{\text{Aircraft empty weight} \times \text{Dist. out of limits}}{\text{Distance between ballast and desired CG}} \\ &= \frac{1,876 \times 0.8}{228 - 33} \\ &= \frac{1,500.8}{195} \\ &= 7.7 \text{ pounds} \end{aligned}$$

A block of lead weighing 7.7 pounds attached to the bulkhead at fuselage station 228, will move the EWCG back to its proper forward limit of +33. This block should be painted red and marked “Permanent Ballast — Do Not Remove.”

### Temporary Ballast Formula

The CG of a loaded airplane can be moved into its allowable range by shifting passengers or cargo, or by adding temporary ballast.

To determine the amount of temporary ballast needed, use this formula:

$$\text{Ballast weight needed} = \frac{\text{Total weight} \times \text{Distance needed to shift CG}}{\text{Distance between ballast location and desired CG}}$$





# Weight and Balance Control— Large Aircraft

Weight and balance control for **large aircraft** consists of the following:

- Establishing and monitoring the **empty weight** and EWCG of the aircraft either individually, or as part of a fleet. This includes both the initial weighing and the required periodic reweighing of the aircraft.
- Maintaining a **loading schedule** that allows the aircraft to be loaded in such a way that the weight and balance remain within the approved limits. Provisions are made to track the weight and CG changes as occupants and cargo are loaded or deplaned, and as the CG is shifted by moving cargo from one bin to another. The cargo loading schedule takes into consideration the floor loading limits so the structure will not be damaged by an overweight cargo pallet.
- Providing information to the flight crew that allows them to fuel and load the aircraft to carry the maximum payload without exceeding either the maximum takeoff or **landing weights**.

This handbook contains information about the adjustment of the elevator trim for takeoff based on the **takeoff weight** and CG location, as well as information regarding the fuel dumping time needed to reduce the weight of the airplane to its allowable landing weight in an emergency situation.

**Large aircraft:** An aircraft of more than 12,500 pounds, maximum certificated takeoff weight.

**Empty weight:** The weight of the airframe, engines, all permanently installed equipment, and unusable fuel. 14 CFR, Part 25 includes full oil and CAR 4B requires the oil to be drained.

**Loading schedule:** A method and procedure used to show that an aircraft is properly loaded and will not exceed approved weight and balance limitations during operation.

**Landing weight:** The takeoff weight of an aircraft less the fuel burned and/or dumped en route.

## Weighing Requirements

FAA-approved operating manuals describe the requirements for weighing the aircraft. These manuals may specify that each individual aircraft be weighed, or they may allow **fleet weight** to be used if the operator has several aircraft of the same model and configuration, with the same equipment installed on each.

### Individual Aircraft Weight

Before an aircraft is placed into service, it should be weighed and the empty weight and CG location established. New aircraft are normally weighed at the factory and may be placed in service without reweighing, if the weight and balance records have been adjusted for alterations or modifications to the aircraft.

However, the Operation Specifications under which some large aircraft are operated mandate that the aircraft be reweighed at specified intervals, and it is important when an aircraft is transferred from one operator to another that the regulations regarding reweighing be observed.

**Takeoff weight:** The weight of an aircraft just before lift-off. It is the ramp weight less the fuel burned during start, taxi, and ground run.

**Fleet weight:** The average weight of aircraft of the same model and configuration that have the same equipment installed.

## Fleet Weights

To establish a fleet weight for a group of aircraft of the same model and configuration, with the same equipment installed in each, several aircraft must be weighed and an average operating weight determined. The number of aircraft weighed depends upon the size of the fleet. The FAA recommends in AC 120-27, *Aircraft Weight and Balance Control*, that these numbers range from all the aircraft in a fleet of three or less to more than six aircraft in fleets of more than nine. The aircraft chosen to be weighed are those having the highest time since last weighing.

Weighing to reestablish fleet weights is normally conducted on a 3-year basis unless changes in aircraft configuration make it necessary to reweigh and/or recalculate the CG sooner than called for by this schedule.

## Weighing Procedures

Required operating practices must be followed when weighing large aircraft. Check the aircraft to be sure all the required equipment items are installed and all the fluids are properly accounted for. The aircraft must be clean, and the weighing must be done in an enclosed building.

Large aircraft are not usually raised off the floor on jacks for weighing. Rather, they are weighed on ramp-type scales similar to those in Figure 3-2 on Page 3-2. The scales must be properly calibrated, zeroed, and used in accordance with the manufacturer's instructions. Each scale should be periodically checked for accuracy as recommended in the manufacturer's calibration schedule either by the manufacturer, or by a recognized facility such as a civil department of weights and measures. If no manufacturer's schedule is available, the period between calibrations should not exceed 1 year.

## For Large Aircraft

Weight and balance control consists of:

- Establishing and monitoring the empty weight and EWCG.
- Maintaining a loading schedule to keep the weight and CG within limits.
- Providing information to the flight crew that allows them to load the aircraft in such a way that the maximum payload may be safely carried.

## Locating and Monitoring Weight and CG Location

It is important that the flight crew have access to the most current weight and balance records containing the empty weight and the EWCG. Without this basic information, loaded weight and balance computations cannot produce accurate results.

## Determining the Empty Weight and EWCG

When the aircraft is properly prepared for weighing ( *see* Page 3-2), roll it onto the scales and level it. The weights are measured at three weighing points: the two main wheel points and the nose wheel point.

The empty weight and EWCG are determined by using the following steps, and the results are recorded in the weight and balance record for use in all future weight and balance computations.

1. Determine the **moment index** of each of the main-wheel weighing points by multiplying the **net weight** (scale reading less **tare weight**), in pounds, at these points by the distance from the datum, in inches. Divide these numbers by the appropriate **reduction factor**.
2. Determine the moment index of the nose wheel weighing point by multiplying its net weight, in pounds, by its distance from the datum, in inches. Divide this by the reduction factor.
3. Determine the total weight by adding the net weight of the three weighing points and the total moment index by adding the moment indexes of each point.
4. Divide the total moment index by the total weight, and multiply this by the reduction factor. This gives the CG in inches from the datum.
5. Determine the distance of the CG behind the leading edge of the mean aerodynamic chord (LEMAC) by subtracting the distance between the datum and LEMAC from the distance between the datum and the CG.

$$\text{Distance CG to LEMAC} = \frac{\text{Datum to CG} - \text{Datum to LEMAC}}{\text{Reduction Factor}}$$

6. Determine the EWCG in % MAC by using this formula:

$$\text{EWCG in \% MAC} = \frac{\text{CG in inches from LEMAC} \times 100}{\text{MAC}}$$

**Moment index:** The moment (weight times arm) divided by a reduction factor such as 100 or 1,000 to make the number smaller and reduce the chance of mathematical errors in computing the center of gravity.

**Net weight:** The scale readings taken when weighing an aircraft less the weight of any chocks or other devices used to hold the aircraft on the scales.

**Tare weight:** The weight of all chocks and other items used to secure an aircraft on the scales for weighing.

**Reduction factor:** A number, usually 100 or 1,000 by which a moment is divided to produce a smaller number that is less likely to cause mathematical errors when computing the center of gravity.

**Determining the Loaded CG of the Airplane in Percent MAC**

It is the responsibility of the flight crew to know that both the weight of the airplane and the location of the CG are within the allowable limits for both takeoff and landing.

The **basic operating weight (BOW)** and the **basic operating index** are entered into a loading schedule like the one in Figure 6-1 and the variables for the specific flight are entered as are appropriate to determine the loaded weight and CG.

Use the data in this example:

Basic operating weight (BOW) ..... 105,500 lbs  
 Basic operating index (total moment/1,000) ..... 92,837.0  
 MAC ..... 180.9 in  
 LEMAC ..... 860.5

Item	Weight	Moment/1000
BOW	105,500	92,837
PAX forward 18	3,080	1,781
PAX aft 95	16,150	16,602
Fwd cargo	1,500	1,020
Aft cargo	2,500	2,915
Fuel tank 1	10,500	10,451
Fuel tank 3	10,500	10,451
Fuel tank 2	28,000	25,689
	177,710	161,646

Figure 6-1. Loading tables.

Use Figure 6-2 to determine the moment indexes for the **passengers (PAX)**, cargo, and fuel.

The airplane is loaded in this way:

Passengers (nominal weight 170 pounds each)  
 Forward compartment ..... 18  
 Aft compartment ..... 95  
 Cargo  
 Forward hold ..... 1,500 lbs  
 Aft hold ..... 2,500 lbs  
 Fuel  
 Tanks 1 & 3 ..... 10,500 lbs each  
 Tank 2 ..... 28,000 lbs

**Basic operating weight (BOW):** PAX: Passengers.

The empty weight of the aircraft plus the weight of the required crew, their baggage and other standard items such as meals and potable water.

**Basic operating index:** The moment of the airplane at its basic operating weight divided by the appropriate reduction factor.

Determine the location of the CG in inches aft of the datum by using this formula:

$$\begin{aligned} \text{CG in. aft of datum} &= \left( \frac{\text{Total moment index}}{\text{Total weight}} \right) \times 1,000 \\ &= \left( \frac{161,646}{177,710} \right) \times 1,000 \\ &= 909.6 \text{ inches} \end{aligned}$$

Determine the distance from the CG to the LEMAC by subtracting the distance between the datum and LEMAC from the distance between the datum and the CG:

$$\begin{aligned} \text{Distance CG to LEMAC} &= \text{Datum to CG} - \text{datum to LEMAC} \\ &= 909.6 - 860.5 \\ &= 49.1 \text{ inches} \end{aligned}$$

The location of the CG in percent of MAC must be known in order to set the stabilizer trim for takeoff. Use this formula:

$$\begin{aligned} \text{CG \% MAC} &= \left( \frac{\text{Distance CG to LEMAC}}{\text{MAC}} \right) \times 100 \\ &= \left( \frac{49.1}{180.9} \right) \times 100 \\ &= 27.1\% \end{aligned}$$

**On Board Aircraft Weighing System**

Some large transport airplanes have an on board aircraft weighing system (OBAWS) that, when the aircraft is on the ground, gives the flight crew a continuous indication of the aircraft gross weight and the location of the CG in % MAC.

The system consists of strain sensing transducers in each main wheel and nose wheel axle, a weight and balance computer, and indicators that show the gross weight, the CG location in % MAC, and an indicator of the ground attitude of the aircraft.

The **strain sensors** measure the amount each axle deflects and send this data into the computer, where signals from all of the transducers and the ground attitude sensor are integrated. The results are displayed on the indicators for the flight crew.

**Strain sensor:** A device that converts a physical phenomenon into an electrical signal. Strain sensors in a wheel axle sense the amount the axle deflects and create an electrical signal proportional to the force that caused the deflection.

PASSENGER LOADING TABLE		
Number of Pass.	Weight lbs	Moment 1000
Forward Compartment Centroid—582.0		
5	850	495
10	1,700	989
15	2,550	1,484
20	3,400	1,979
25	4,250	2,473
29	4,930	2,869
AFT Compartment Centroid—1028.0		
10	1,700	1,748
20	3,400	3,495
30	5,100	5,243
40	6,800	6,990
50	8,500	8,738
60	10,200	10,486
70	11,900	12,233
80	13,600	13,980
90	15,300	15,728
100	17,000	17,476
110	18,700	19,223
120	20,400	20,971
133	22,610	23,243

CARGO LOADING TABLE		
Moment 1000		
Weight lbs	Forward Hold	Aft Hold
	Arm 680.0	Arm 1166.0
6,000		6,966
5,000	3,400	5,830
4,000	2,720	4,664
3,000	2,040	3,498
2,000	1,360	2,332
1,000	680	1,166
900	612	1,049
800	544	933
700	476	816
600	408	700
500	340	583
400	272	466
300	204	350
200	136	233
100	68	117

FUEL LOADING TABLE									
TANKS 1 & 3 (EACH)			TANKS 2 (3 CELL)						
Weight lbs	Arm	Moment 1000	Weight lbs	Arm	Moment 1000	Weight lbs	Arm	Moment 1000	
8,500	992.1	8,433	8,500	917.5	7,799	22,500	914.5	20,576	
9,000	993.0	8,937	9,000	917.2	8,266	23,000	914.6	21,034	
9,500	993.9	9,442	9,500	917.0	8,711	23,500	914.4	21,490	
10,000	994.7	9,947	10,000	916.8	9,168	24,000	914.3	21,943	
10,500	995.4	10,451	10,500	916.6	9,624	24,500	914.3	22,400	
11,000	996.1	10,957	11,000	916.5	10,082	25,000	914.2	22,855	
11,500	996.8	11,463	11,500	916.3	10,537	25,500	914.2	23,312	
12,000	997.5	11,970	12,000	916.1	10,993	26,000	914.1	23,767	
FULL CAPACITY			**(See note at lower left)			26,500	914.1	24,244	
**Note: Computations for Tank 2 weights for 12,500 lbs to 18,000 lbs have been purposely omitted.			27,000	914.0	24,678				
			27,500	913.9	25,132				
			28,000	913.8	25,589				
			28,500	913.8	26,043				
			29,000	913.7	26,497				
			29,500	913.7	26,954				
			30,000	913.6	27,408				
									FULL CAPACITY

Figure 6-2. Loading schedule for determining weight and CG.

## Determining the Correct Stabilizer Trim Setting

It is important before takeoff to set the stabilizer trim for the existing CG location. There are two ways the stabilizer trim setting systems may be calibrated: in % MAC, and in Units ANU (Airplane Nose Up).

### Stabilizer Trim Setting in % MAC

If the stabilizer trim is calibrated in units of % MAC, determine the CG location in % MAC as has just been described, then set the stabilizer trim on the percentage figure thus determined.

### Stabilizer Trim Setting in Units ANU (Airplane Nose Up)

Some aircraft give the stabilizer trim setting in Units ANU (Airplane Nose Up) that correspond with the location of the CG in % MAC. When preparing for takeoff in an aircraft equipped with this system, first determine the CG in % MAC in the way described above, then refer to the Stabilizer Trim Setting Chart on the Takeoff Performance page of the AFM. Figure 6-3 is an excerpt from such a page from the AFM of a Boeing 737.

Consider an airplane with these specifications:

CG location ..... station 635.7  
 LEMAC ..... station 625  
 MAC ..... 134.0 in

First determine the distance from the CG to the LEMAC by using this formula:

$$\begin{aligned} \text{Distance CG to LEMAC} &= \text{Datum to CG} - \text{datum to LEMAC} \\ &= 635.7 - 625.0 \\ &= 10.7 \text{ inches} \end{aligned}$$

Then determine the location of the CG in percent of MAC by using this formula:

$$\begin{aligned} \text{CG \% MAC} &= \left( \frac{\text{Distance CG to LEMAC}}{\text{MAC}} \right) \times 100 \\ &= \left( \frac{10.7}{134.0} \right) \times 100 \\ &= 8.0\% \text{ MAC} \end{aligned}$$

Refer to Figure 6-3. For all flap settings and a CG located at 8% MAC, the stabilizer setting is  $7\frac{3}{4}$  Units ANU.

Stabilizer Trim Setting—Units Airplane Nose Up	
CG	Flaps (All)
6	8
8	$7\frac{3}{4}$
10	$7\frac{1}{2}$
12	7
14	$6\frac{3}{4}$
16	$6\frac{1}{2}$
18	$5\frac{3}{4}$
20	$5\frac{1}{2}$
22	5
24	$4\frac{1}{2}$
26	4
28	$3\frac{1}{2}$
30	3
32	$2\frac{1}{2}$

Figure 6-3. Stabilizer trim setting in ANU units.

## Determining CG Changes Caused by Modifying the Cargo

Large aircraft carry so much cargo that adding, subtracting, or moving any of it from one hold to another can cause large shifts in the CG.

### Effects of Loading or Offloading Cargo

Both the weight and CG of an aircraft are changed when cargo is offloaded or onloaded. This example shows the way to determine the new weight and CG after 2,500 pounds of cargo is offloaded from the forward cargo hold.

Consider these specifications:

Loaded weight ..... 90,000 lbs  
 Loaded CG ..... 22.5% MAC  
 Weight change ..... -2,500 lbs  
 Fwd. cargo hold **centroid** ..... station 352.1  
 MAC ..... 141.5 in  
 LEMAC ..... station 549.13

**Centroid:** The distance in inches aft of the datum of the center of a compartment or a fuel tank for weight and balance purposes.



- Determine the CG location in inches from the datum before the cargo is removed. Do this by first determining the distance of the CG aft of the LEMAC:

$$\begin{aligned} \text{CG (in. aft of LEMAC)} &= \left( \frac{\text{CG in \% MAC}}{100} \right) \times \text{MAC} \\ &= \left( \frac{22.5}{100} \right) \times 141.5 \\ &= 31.84 \text{ inches} \end{aligned}$$

- Determine the distance between the CG and the datum by adding the CG in inches aft of LEMAC to the distance from the datum to LEMAC:

$$\begin{aligned} \text{CG (in. from datum)} &= \text{CG in. aft of LEMAC} + \\ &\quad \text{datum to LEMAC} \\ &= 31.84 + 549.13 \\ &= 580.97 \text{ inches} \end{aligned}$$

- Determine the moment/1,000 for the original weight:

$$\begin{aligned} \text{Moment/1,000} &= \frac{\text{Weight} \times \text{Arm}}{1,000} \\ &= \frac{90,000 \times 580.97}{1,000} \\ &= 52,287.30 \end{aligned}$$

- Determine the new weight and new CG by first determining the moment/1,000 of the removed weight.

Multiply the amount of weight removed (-2,500 pounds) by the centroid of the forward cargo hold (352.1 inches), and then divide this by 1,000.

$$\begin{aligned} \text{Moment/1,000} &= \frac{\text{Weight} \times \text{Arm}}{1,000} \\ &= \frac{-2,500 \times 352.1}{1,000} \\ &= -880.25 \end{aligned}$$

- Subtract the removed weight and its moment/1,000 from the original weight and moment/1,000.

Item	Weight	Moment/1000
Original weight	90,000	52,287.30
Δ Weight	- 2,500	- 880.25
New weight & moment	87,500	51,407.05

- Determine the location of the new CG by dividing the total moment/1,000 by the total weight and multiplying this by the reduction factor of 1,000.

$$\begin{aligned} \text{CG} &= \left( \frac{\text{Total moment/1,000}}{\text{Total weight}} \right) \times 1,000 \\ &= \left( \frac{51,407}{87,500} \right) \times 1,000 \\ &= 587.5 \text{ inches behind the datum} \end{aligned}$$

- Convert the new CG location to % MAC. First, determine the distance between the CG location and LEMAC:

$$\begin{aligned} \text{CG (in. aft of LEMAC)} &= \text{CG (in. from datum)} - \\ &\quad \text{LEMAC} \\ &= 587.5 - 549.13 \\ &= 38.37 \text{ inches} \end{aligned}$$

- Then, determine new CG in % MAC:

$$\begin{aligned} \text{CG \% MAC} &= \left( \frac{\text{Distance CG to LEMAC}}{\text{MAC}} \right) \times 100 \\ &= \left( \frac{38.37}{141.5} \right) \times 100 \\ &= 27.1\% \text{ MAC} \end{aligned}$$

Offloading 2,500 pounds of cargo from the forward cargo hold moves the CG from 22.5% MAC to 27.1% MAC.

#### Effects of Onloading Cargo

The previous example showed the way the weight and CG changed when cargo was offloaded. This example shows the way both parameters change when cargo is onloaded.

The same basic airplane is used in the example, but 3,000 pounds of cargo is onloaded in the forward cargo hold.

Weight before cargo is loaded ..... 87,500 lbs  
 CG before cargo is loaded ..... 27.1% MAC  
 Weight change ..... + 3,000 lbs  
 Fwd. cargo hold centroid ..... station 352.1  
 MAC ..... 141.5 in  
 LEMAC ..... station 549.13

#### CG Shift

When the CG moves aft, ?CG is positive; when it moves forward, ?CG is negative.

- Determine the CG location in inches from the datum before the cargo is onloaded. Do this by first determining the distance of the CG aft of the LEMAC:

$$\begin{aligned} \text{CG (inches aft of LEMAC)} &= \left( \frac{\text{CG in \% MAC}}{100} \right) \times \text{MAC} \\ &= \left( \frac{27.1}{100} \right) \times 141.5 \\ &= 38.35 \text{ inches} \end{aligned}$$

- Determine the distance between the CG and the datum by adding the CG in inches aft of LEMAC to the distance from the datum to LEMAC:

$$\begin{aligned} \text{CG (in. from datum)} &= \text{CG in. aft of LEMAC} + \\ &\quad \text{datum to LEMAC} \\ &= 38.35 + 549.13 \\ &= 587.48 \text{ inches} \end{aligned}$$

- Determine the moment/1,000 for the original weight:

$$\begin{aligned} \text{Moment/1,000} &= \frac{\text{Weight} \times \text{Arm}}{1,000} \\ &= \frac{87,500 \times 587.48}{1,000} \\ &= 51,404.5 \end{aligned}$$

- Determine the new weight and new CG by first determining the moment/1,000 of the added weight. Multiply the amount of weight added (3,000 pounds) by the centroid of the forward cargo hold (352.1 inches), and then divide this by 1,000.

$$\begin{aligned} \text{Moment/1,000} &= \frac{\text{Weight} \times \text{Arm}}{1,000} \\ &= \frac{3,000 \times 352.1}{1,000} \\ &= 1,056.3 \end{aligned}$$

- Add the onloaded cargo weight and its moment/1,000 to the original weight and moment/1,000.

	Weight	Moment/1000	CG in/datum	CG % MAC
Original weight and CG	87,500	51,404.5	587.48	27.1
Δ Weight	+ 3,000	1,056.3		
New weight and CG	90,500	52,460.8	579.68	21.59

- Determine the location of the new CG by dividing the total moment/1,000 by the total weight and multiplying this by the reduction factor of 1,000.

$$\begin{aligned} \text{CG} &= \frac{\text{Total moment/1,000}}{\text{Total weight}} \times 1,000 \\ &= \frac{52,460.8}{90,500} \times 1,000 \\ &= 579.68 \text{ inches behind the datum} \end{aligned}$$

- Convert the new CG location to % MAC. First, determine the distance between the CG location and LEMAC:

$$\begin{aligned} \text{CG (in. aft of LEMAC)} &= \text{CG (in. from datum)} - \\ &\quad \text{LEMAC} \\ &= 579.68 - 549.13 \\ &= 30.55 \text{ inches} \end{aligned}$$

- Then, determine new CG in % MAC:

$$\begin{aligned} \text{CG \% MAC} &= \left( \frac{\text{Distance CG to LEMAC}}{\text{MAC}} \right) \times 100 \\ &= \left( \frac{30.55}{141.5} \right) \times 100 \\ &= 21.59\% \text{ MAC} \end{aligned}$$

Onloading 3,000 pounds of cargo into the forward cargo hold moves the CG forward 5.51 inches, from 27.1% MAC to 21.59% MAC.

Effects of Shifting Cargo from One Hold to Another

When cargo is shifted from one cargo hold to another, the CG changes, but the total weight of the aircraft remains the same.

As an example, use this data:

Loaded weight .....	90,000 lbs
Loaded CG .....	station 580.97 (which is 22.5% MAC)
Fwd. cargo hold centroid .....	station 352
Aft cargo hold centroid .....	station 724.9
MAC .....	141.5 in
LEMAC .....	station 549

To determine the change in CG, or  $\Delta$ CG, caused by shifting 2,500 pounds of cargo from the forward cargo hold to the aft cargo hold, use this formula:

$$\begin{aligned} \Delta CG &= \frac{\text{Weight shifted} \times \text{Distance shifted}}{\text{Total weight}} \\ &= \frac{2,500 \times (724.9 - 352)}{90,000} \\ &= \frac{2,500 \times 372.9}{90,000} \\ &= 10.36 \text{ inches} \end{aligned}$$

Since the weight was shifted aft, the CG moved aft, and the CG change is positive. If the shift were forward, the CG change would be negative.

Before the cargo was shifted, the CG was located at station 580.97, which is 22.5% MAC. The CG moved aft 10.36 inches, so the new CG is:

$$\begin{aligned} \text{New CG} &= \text{Old CG} \pm \Delta CG \\ &= 580.97 + 10.36 \\ &= 591.33 \text{ inches} \end{aligned}$$

Convert the location of the CG in inches aft of the datum to percent MAC by using this formula:

$$\begin{aligned} \Delta CG \% \text{ MAC} &= \left( \frac{\Delta CG \text{ inches}}{\text{MAC}} \right) \times 100 \\ &= \left( \frac{10.36}{141.5} \right) \times 100 \\ &= 7.32\% \text{ MAC} \end{aligned}$$

The new CG in % MAC caused by shifting the cargo is the sum of the old CG plus the change in CG:

$$\begin{aligned} \text{New CG \% MAC} &= \text{Old CG} \pm \Delta CG \\ &= 22.5\% + 7.32\% \\ &= 29.82\% \text{ MAC} \end{aligned}$$

Some aircraft AFMs locate the CG relative to an **index point** rather than the datum or the MAC. An index point is a location specified by the aircraft manufacturer from which arms used in weight and balance computations are measured. Arms measured from the index point are called index arms, and objects ahead of the index point have negative index arms, while those behind the index point have positive index arms.

Use the same data as in the previous example, except for these changes:

Loaded CG .....	index arm of 0.97, which is 22.5% MAC
Index point .....	fuselage station 580.0
Fwd. cargo hold centroid .....	-227.9 index arm
Aft cargo hold centroid .....	+144.9 index arm
MAC .....	141.5 in
LEMAC .....	-30.87 index arm

The weight was shifted 372.8 inches (-227.9 to +144.9 = 372.8).

The change in CG can be calculated by using this formula:

$$\begin{aligned} \Delta CG &= \frac{\text{Weight shifted} \times \text{Distance shifted}}{\text{Total weight}} \\ &= \frac{2,500 \times (227.9 + 144.9)}{90,000} \\ &= \frac{2,500 \times 372.8}{90,000} \\ &= 10.36 \text{ inches} \end{aligned}$$

Since the weight was shifted aft, the CG moved aft, and the CG change is positive. If the shift were forward, the CG change would be negative.

**Index point:** A location specified by the aircraft manufacturer from which arms used in weight and balance computations are measured. Arms measured from the index point are called index arms.

Before the cargo was shifted, the CG was located at 0.97 index arm, which is 22.5% MAC. The CG moved aft 10.36 inches, and the new CG is:

$$\begin{aligned} \text{New CG} &= \text{Old CG} \pm \Delta\text{CG} \\ &= 0.97 + 10.36 \\ &= 11.33 \text{ index arm} \end{aligned}$$

The change in the CG in % MAC is determined by using this formula:

$$\begin{aligned} \text{New CG \% MAC} &= \text{Old CG \% MAC} \pm \Delta\text{CG \% MAC} \\ &= 22.5\% + 7.32\% \\ &= 29.82\% \text{ MAC} \end{aligned}$$

The new CG in % MAC is the sum of the old CG plus the change in CG:

$$\begin{aligned} \Delta\text{CG \% MAC} &= \left( \frac{\Delta\text{CG inches}}{\text{MAC}} \right) \times 100 \\ &= \left( \frac{10.36}{141.5} \right) \times 100 \\ &= 7.32\% \text{ MAC} \end{aligned}$$

Notice that the new CG is in the same location whether the distances are measured from the datum or from the index point.

### Determining Cargo Pallet Loads with Regard to Floor Loading Limits

Each cargo hold has a structural floor loading limit based on the weight of the load and the area over which this weight is distributed. To determine the maximum weight of a loaded cargo pallet that can be carried in a cargo hold, divide its total weight, which includes the weight of the empty pallet and its tiedown devices, by its area in square feet. This load per square foot must be equal to or less than the floor load limit.

In this example, determine the maximum load that can be placed on this pallet without exceeding the floor load limit.

Pallet dimensions ..... 36 by 48 in  
 Empty pallet weight ..... 47 lbs  
 Tiedown devices ..... 33 lbs  
 Floor load limit ..... 169 pounds per square foot

The pallet has an area of 36 inches (3 feet) by 48 inches (4 feet). This is equal to 12 square feet. The floor has a load limit of 169 pounds per square foot; therefore, the total weight of the loaded pallet can be  $169 \times 12 = 2,028$  pounds.

Subtracting the weight of the pallet and the tiedown devices gives an allowable load of 1,948 pounds ( $2,028 - [47 + 33]$ ).

Determine the floor load limit that is needed to carry a loaded cargo pallet having these dimensions and weights:

Pallet dimensions ..... 48.5 by 33.5 in  
 Pallet weight ..... 44 lbs  
 Tiedown devices ..... 27 lbs  
 Cargo weight ..... 786.5 lbs

First determine the number of square feet of pallet area:

$$\begin{aligned} \text{Area (sq. ft.)} &= \frac{\text{Length (inches)} \times \text{Width (inches)}}{144} \\ &= \frac{48.5 \times 33.5}{144} \\ &= \frac{1,624.7}{144} \\ &= 11.28 \text{ square feet} \end{aligned}$$

Then determine the total weight of the loaded pallet:

Pallet	44.0 lbs
Tiedown devices	27.0 lbs
Cargo	786.5 lbs
	<hr/> 857.5 lbs

Determine the load imposed on the floor by the loaded pallet:

The floor must have a minimum load limit of 76 pounds per square foot.

$$\begin{aligned} \text{Floor Load} &= \frac{\text{Loaded weight}}{\text{Pallet area}} \\ &= \frac{857.5}{11.28} \\ &= 76.0 \text{ pounds/square foot} \end{aligned}$$

#### Floor Load—Caution

Loaded cargo pallets must be checked to be sure they do not impose a load on the floor that is greater than the floor load limit.

## Determining the Maximum Amount of Payload That Can Be Carried

The primary function of a transport or cargo aircraft is to carry **payload**. This is the portion of the useful load, passengers or cargo, that produces revenue. To determine the maximum amount of payload that can be carried, follow a series of steps, considering both the maximum limits for the aircraft and the trip limits imposed by the particular trip. In each step, the trip limit must be less than the maximum limit. If it is not, the maximum limit must be used.

These are the specifications for the aircraft in this example:

Basic operating weight (BOW) .....	100,500 lbs
<b>Maximum zero fuel weight</b> .....	138,000 lbs
Maximum landing weight .....	142,000 lbs
Maximum takeoff weight .....	184,200 lbs
Fuel tank load .....	54,000 lbs
Est. fuel burn en route .....	40,000 lbs

1. Compute the maximum takeoff weight for this trip. This is the maximum landing weight plus the trip fuel.

Max. Limit		Trip Limit
142,000	Landing weight	142,000
	<u>+ trip fuel</u>	<u>+ 40,000</u>
184,200	Takeoff weight	182,000

2. The trip limit is the lower, so it is used to determine the zero fuel weight.

Max. Limit		Trip Limit
184,200	Takeoff weight	182,000
	<u>- fuel load</u>	<u>- 54,000</u>
138,000	Zero fuel weight	128,000

3. The trip limit is again lower, so use it to compute the maximum payload for this trip.

Max. Limit		Trip Limit
138,000	Zero fuel weight	128,000
	<u>- BOW</u>	<u>- 100,500</u>
	Payload (pounds)	27,500

Under these conditions 27,500 pounds of payload may be carried.

**Payload:** The weight of the passengers, baggage, and cargo that produces revenue.

**Maximum zero fuel weight:** The maximum authorized weight of an aircraft without fuel. This is the sum of the BOW and payload.

## Determining the Landing Weight

It is important to know the landing weight of the airplane in order to set up the landing parameters, and to be certain the airplane will be able to land at the intended destination.

In this example of a four-engine turboprop airplane, determine the airplane weight at the end of 4.0 hours of cruise under these conditions:

Takeoff weight .....	140,000 lbs
Pressure altitude during cruise .....	16,000 feet
Ambient temperature during cruise .....	-32°C
Fuel burned during descent and landing .....	1,350 lbs

Determine the weight at the end of cruise by using the Gross Weight Table of Figure 6-4 and following these steps:

1. Use the U.S. Standard Atmosphere Table in Figure 6-5 to determine the standard temperature for 16,000. This is -16.7°C.
2. The ambient temperature is -32°C, which is a deviation from standard of 15.3°C. (-32° - -16.7° = 15.3°). It is below standard.
3. In Figure 6-4, follow the vertical line representing 140,000 pounds gross weight upward until it intersects the diagonal line for 16,000 feet pressure altitude.
4. From this intersection, draw a horizontal line to the left to the temperature deviation index (0°C deviation).
5. Draw a diagonal line parallel to the dashed lines for "Below Standard" from the intersection of the horizontal line and the Temperature Deviation Index.
6. Draw a vertical line upward from the 15.3°C Temperature Deviation From Standard.
7. Draw a horizontal line to the left from the intersection of the "Below Standard" diagonal and the 15.3°C temperature deviation vertical line. This line crosses the "Fuel Flow—100 Pounds per Hour per Engine" index at 11.35. This indicates that each of the four engines burns 1,135 (100 × 11.35) pounds of fuel per hour. The total fuel burn for the 4-hour cruise is:

$$\begin{aligned} \text{Total fuel burn} &= \text{Lb/hr/engine} \times \text{No. engines} \times \\ &\quad \text{Hours flight duration} \\ &= 1,135 \times 4 \times 4 \\ &= 18,160 \text{ pounds} \end{aligned}$$

8. The airplane gross weight was 140,000 pounds at takeoff, and since 18,160 pounds of fuel was burned during cruise and 1,350 pounds was burned during the approach and landing phase, the landing weight is:

$$140,000 - (18,160 + 1,350) = 120,490 \text{ pounds}$$

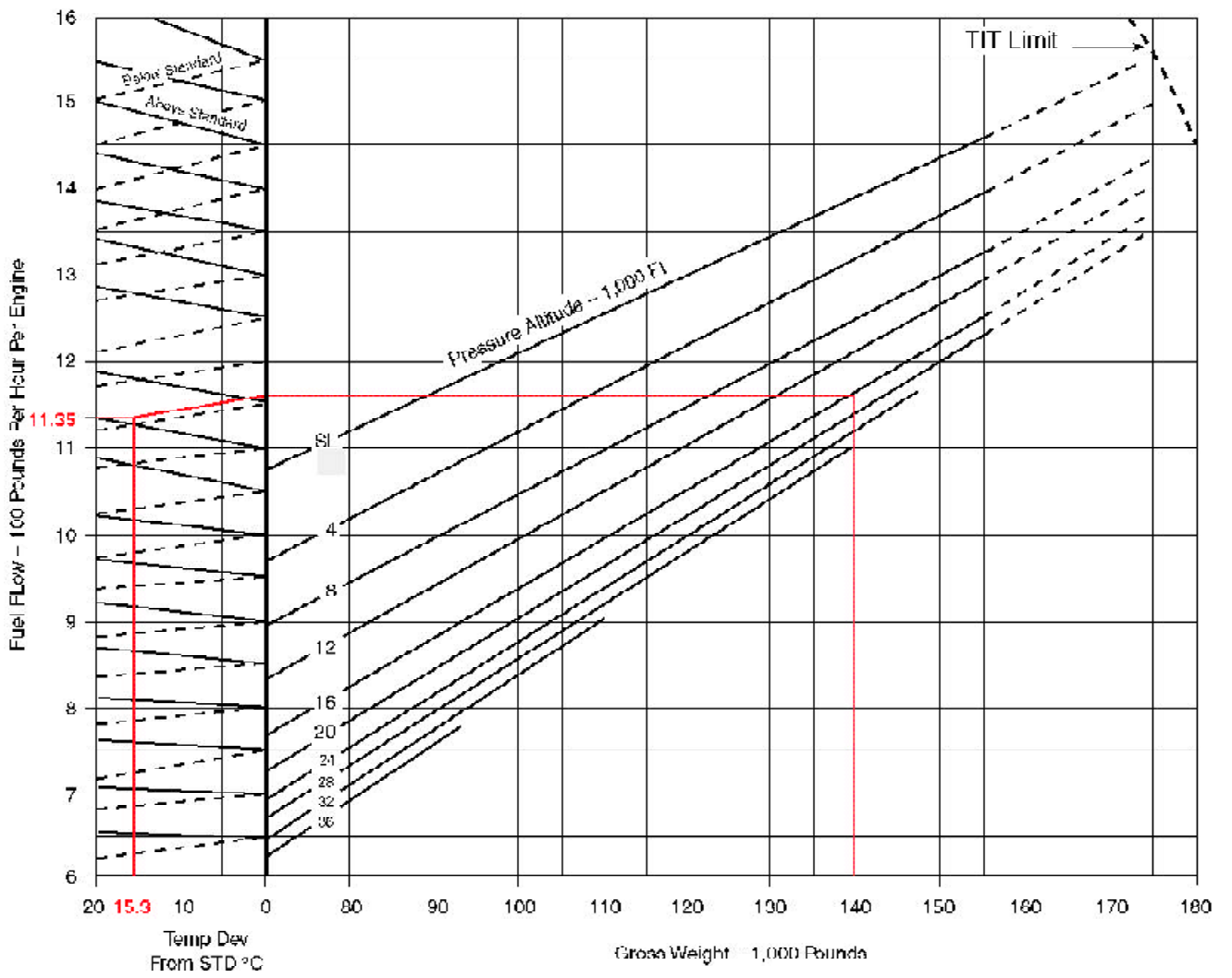


Figure 6-4. Gross weight table.



**TABLE OF U.S. STANDARD ATMOSPHERE**

Feet	inHg	mmHg	PSI	°C	°F
0	29.92	760.0	14.70	15.0	59.0
2,000	27.82	706.7	13.66	11.0	51.9
4,000	25.84	656.9	12.69	7.1	44.7
6,000	23.98	609.1	11.78	3.1	37.6
8,000	22.23	564.6	10.92	-0.8	30.5
10,000	20.58	522.7	10.11	-4.8	23.3
12,000	19.03	483.4	9.35	-8.8	16.2
14,000	17.58	446.5	8.63	-12.7	9.1
16,000	16.22	412.0	7.96	-16.7	1.9
18,000	14.95	379.7	7.34	-20.7	-5.2
20,000	13.76	349.5	6.75	-24.6	-12.3
22,000	12.65	321.3	6.21	-28.6	-19.5
24,000	11.61	294.9	5.70	-32.5	-26.6
26,000	10.64	270.3	5.22	-36.5	-33.7
28,000	9.74	237.4	4.78	-40.5	-40.9
30,000	8.90	226.1	4.37	-44.4	-48.0
32,000	8.12	206.3	3.98	-48.4	-55.1
34,000	7.40	188.0	3.63	-52.4	-62.3
36,000	6.73	171.0	3.30	-56.3	-69.4
38,000	6.12	155.5	2.99	-56.5	-69.7
40,000	5.56	141.2	2.72	-56.5	-69.7
42,000	5.05	128.3	2.47	-56.5	-69.7
44,000	4.59	116.6	2.24	-56.5	-69.7
46,000	4.17	105.9	2.04	-56.5	-69.7
48,000	3.79	96.3	1.85	-56.5	-69.7
50,000	3.44	87.4	1.68	-56.5	-69.7
55,000	2.71	68.8	1.32	TEMPERATURE REMAINS CONSTANT	
60,000	2.14	54.4	1.04		

inHg = Inches of Mercury

°C = Centigrade

mmHg = Millimeter of Mercury

°F = Fahrenheit

PSI = Pounds per square inch

Figure 6-5. Standard atmosphere table.

### Determining the Minutes of Fuel Dump Time

Most large aircraft are approved for a greater weight for takeoff than for landing, and to make it possible for them to return to landing soon after takeoff, a **fuel jettison system** is sometimes installed.

It is important in an emergency situation that the flight crew be able to dump enough fuel to lower the weight to its allowed landing weight. This is done by timing the dumping process.

In this example, the aircraft has three engines operating and these specifications apply:

- Cruise weight ..... 171,000 lbs
- Maximum landing weight ..... 142,500 lbs
- Time from start of dump to landing ..... 19 minutes
- Average fuel flow during dumping and descent ..... 3,170 lb/hr/eng
- Fuel dump rate ..... 2,300 pounds per minute

Follow these steps to determine the number of minutes of fuel dump time:

1. Determine the amount the weight of the aircraft must be reduced to reach the maximum allowable landing weight:

$$\begin{array}{r}
 171,000 \text{ lbs cruise weight} \\
 - 142,500 \text{ lbs maximum landing weight} \\
 \hline
 28,500 \text{ lbs required reduction}
 \end{array}$$

2. Determine the amount of fuel burned from the beginning of the dump to touchdown:

$$\begin{aligned}
 \text{Fuel flow} &= \frac{3,170 \text{ lb/hr/engine}}{60} \\
 &= 52.83 \text{ lb/min engine}
 \end{aligned}$$

For all three engines, this is  $52.83 \times 3 = 158.5$  lbs/min.

The three engines will burn  $158.5 \times 19 = 3,011.5$  pounds of fuel between the beginning of dumping and touchdown.

**Fuel jettison system:** A fuel sub-system that allows the dumping of fuel in an emergency to lower the weight of an aircraft to the maximum landing weight. This system must allow enough fuel to be jettisoned that the aircraft can still meet the climb requirements in 14 CFR Part 25.

- Determine the amount of fuel needed to dump by subtracting the amount of fuel burned during the dumping from the required weight reduction:

$$\begin{array}{r}
 28,500.0 \text{ lbs required weight reduction} \\
 -3,011.5 \text{ lbs fuel burned after start of dumping} \\
 \hline
 25,488.5 \text{ lbs fuel to be dumped}
 \end{array}$$

- Determine the time needed to dump this amount of fuel by dividing the number of pounds of fuel to dump by the dump rate:

$$\frac{25,488.5 \text{ lbs}}{2,300 \text{ lb/min}} = 11.08 \text{ minutes}$$

### Weight and Balance of Commuter Category Airplanes

The Beech 1900 is a typical commuter category airplane that can be configured to carry passengers or cargo. Figure 6-6 shows the loading data of this type of airplane in the passenger configuration, and Figure 6-14 on Page 6-18 shows the cargo configuration.

#### Jet Fuel Weight Affected by Temperature

The colder the fuel, the more dense and therefore the more pounds of fuel per gallon.

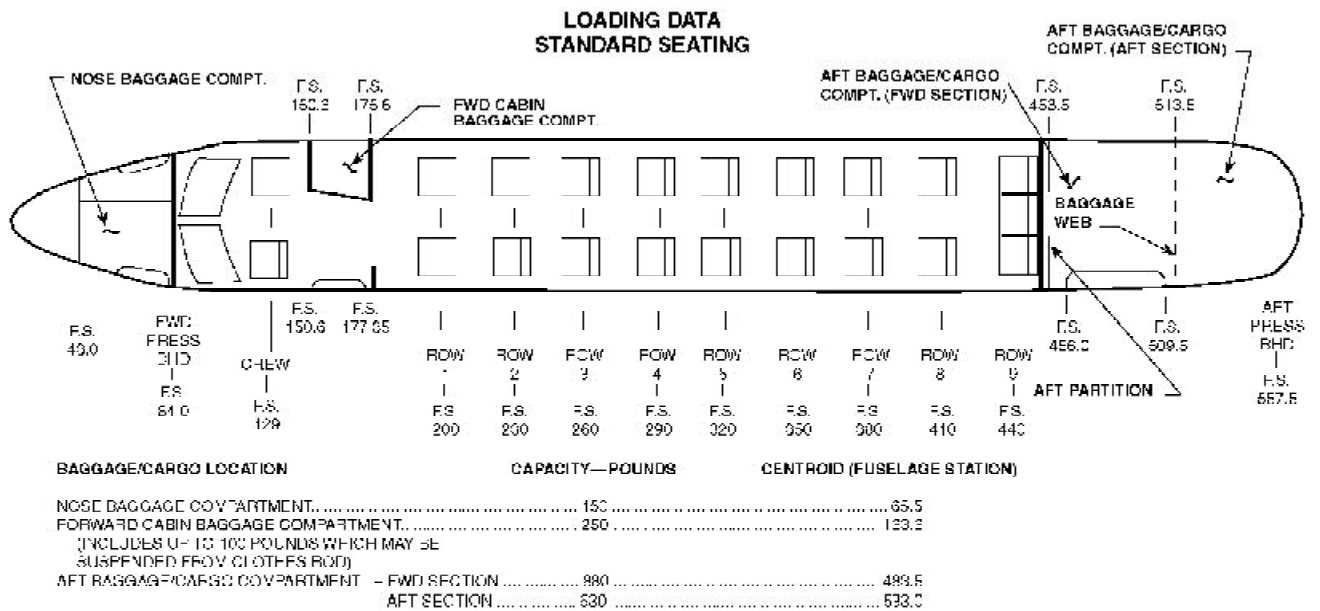
#### Determining the Loaded Weight and CG

As this airplane is prepared for flight, a manifest like the one in Figure 6-7 is prepared.

- The crew weight and the weight of each passenger is entered into the manifest, and the moment/100 for each occupant is determined by multiplying the weight by the arm and dividing by 100. This data is available in the AFM and is shown in the Weight and Moments—Occupants table in Figure 6-8 on Page 6-14.
- The weight of the baggage in each compartment that is used is entered with its moment/100. This is determined in the Weights and Moments—Baggage table in Figure 6-9 on Page 6-14.
- Determine the weight of the fuel. Jet A fuel has a nominal specific gravity at +15°C of 0.812 and weighs 6.8 pounds per gallon, but at +25°C, according to the chart in Figure 6-10 on Page 6-15, it weighs 6.75 lbs/gal.

Using Figure 6-11 on Page 6-16, determine the weights and moment/100 for 390 gallons of Jet A fuel by interpolating between those for 6.7 lbs/gal and 6.8 lbs/gal. The 390 gallons of fuel at this temperature weighs 2,633 pounds, and its moment index is 7,866 lb-in/100.

(Continued on Page 6-17)



**NOTE:**

- For compartment loadings which result in only partial utilization of total compartment volume, load items must be distributed or secured in a manner to preclude shifting under normally anticipated operating conditions.

Figure 6-6. Loading data for passenger configuration.

Item	Weight	Arm	Moment/100	CG
Airplane basic EW	9,226		25,823	
Crew	340	129	439	
Passengers				
Row 1	300	200	600	
Row 2	250	230	575	
Row 3	190	260	494	
Row 4	170	290	493	
Row 5	190	320	608	
Row 6	340	350	1,190	
Row 7	190	380	722	
Row 8		410		
Row 9		440		
Baggage				
Nose		65.5		
Fwd Cabin	100	163.6	164	
Aft (Fwd Section)	200	483.5	967	
Aft (Aft Section)	600	533.0	3,198	
Fuel Jet A @ +25°C				
Gallons 390	2,633		7,866	
	14,729		43,139	292.9

Figure 6-7. Determining the loaded weight and CG of a Beech 1900 in the passenger configuration.

### USEFUL LOAD WEIGHTS AND MOMENTS OCCUPANTS

CREW WEIGHT	CABIN SEATS									
	F.S. 129	F.S. 200	F.S. 230	F.S. 260	F.S. 290	F.S. 320	F.S. 350	F.S. 380	F.S. 410	F.S. 440
MOMENT/100										
80	103	160	184	208	232	256	280	304	328	352
90	116	180	207	234	261	289	315	342	369	396
100	129	200	230	260	290	320	350	380	410	440
110	142	220	258	286	310	352	385	418	451	484
120	155	240	276	312	348	384	420	456	492	528
130	168	260	299	335	377	416	455	494	533	572
140	181	280	322	364	406	448	490	532	574	616
150	194	300	345	390	435	480	525	570	615	660
160	206	320	366	416	464	512	560	608	656	704
170	219	340	391	442	493	544	595	648	697	748
180	232	360	414	468	522	576	630	684	738	792
190	245	380	437	494	551	608	665	722	779	836
200	258	400	460	520	680	640	700	760	820	880
210	271	420	483	546	609	672	735	798	861	924
220	284	440	506	572	638	704	770	836	902	968
230	297	460	529	598	667	736	805	874	943	1012
240	310	480	552	624	696	766	840	912	984	1056
250	323	500	575	650	725	800	875	950	1025	1100

Note: Weights reflected in above table represent weight per seat.

Figure 6-8. Weights and moments—occupants.

### USEFUL LOAD WEIGHTS AND MOMENTS BAGGAGE

WEIGHT	NOSE BAGGAGE COMPART- MENT F.S. 65.5	FORWARD CABIN BAGGAGE COMPART- MENT F.S. 163.6	AFT BAGGAGE/ CARGO COMPART- MENT (FORWARD SECTION) F.S. 483.5	AFT BAGGAGE/ CARGO COMPART- MENT (AFT SECTION) F.S. 533.0
		MOMENT/100		
10	7	16	48	53
20	13	33	97	107
30	20	49	145	160
40	26	65	193	213
50	33	82	242	266
60	39	98	290	320
70	46	115	338	373
80	52	131	387	426
90	59	147	435	480
100	66	164	484	533
150	98	245	725	800
200		327	967	1068
250		409	1209	1332
300			1450	1596
350			1692	1860
400			1934	2124
450			2176	2388
500			2418	2652
550			2659	2916
600			2901	3180
650			3046	3355
700			3143	
750			3284	
800			3420	
850			3568	
900			4110	
950			4255	

Figure 6-9. Weights and moments—baggage.

## DENSITY VARIATION OF AVIATION FUEL BASED ON AVERAGE SPECIFIC GRAVITY

FUEL	AVERAGE SPECIFIC GRAVITY AT 15°C (59°F)
AVIATION KEROSENE JET A AND JET A1	.812
JET B (JP-4)	.705
AV GAS GRADE 100/130	.703

**NOTE:** The Fuel Quantity Indicator is calibrated for correct indication when using Aviation Kerosene Jet A and Jet A1. When using other fuels, multiply the indicated fuel quantity in pounds by .99 for Jet B (JP-4) or by .98 for Aviation Gasoline (100/130) to obtain actual fuel quantity in pounds.

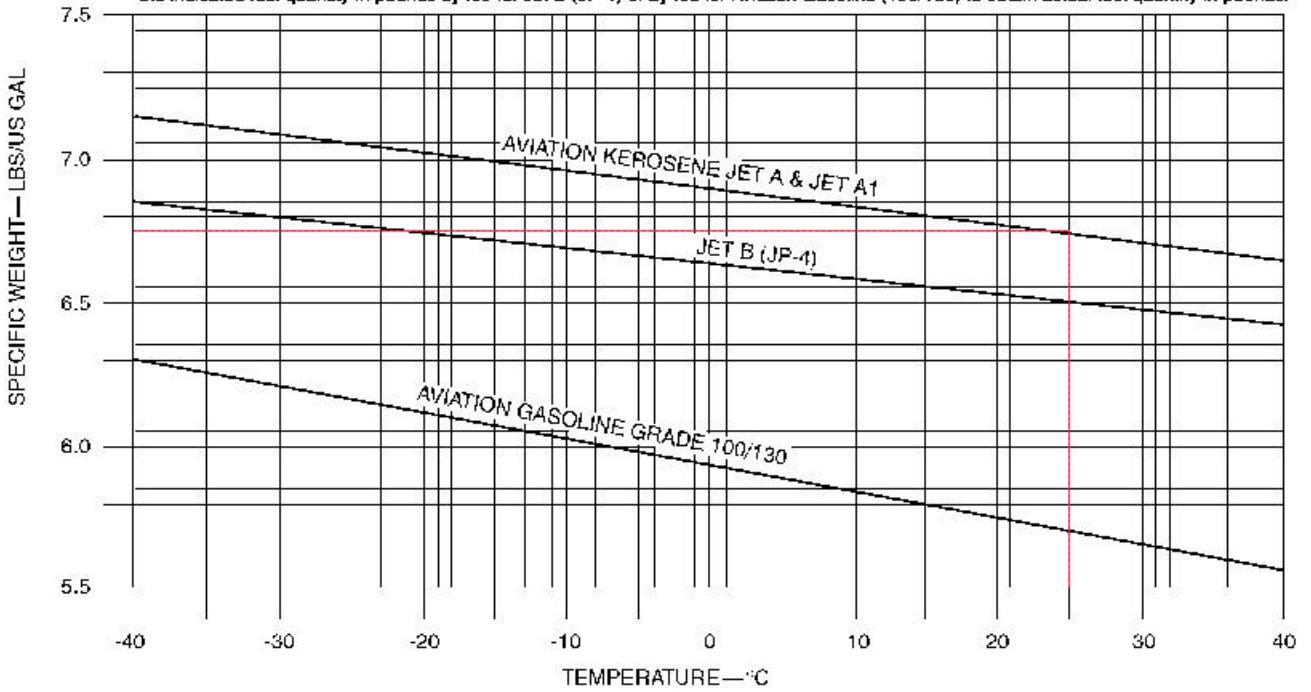


Figure 6-10. Density variation of aviation fuel.

**USEFUL LOAD WEIGHTS AND MOMENTS**  
**USABLE FUEL**

GALLONS	6.5 LB/GAL		6.6 LB/GAL		6.7 LB/GAL		6.8 LB/GAL	
	WEIGHT	MOMENT	WEIGHT	MOMENT	WEIGHT	MOMENT	WEIGHT	MOMENT
		100		100		100		100
10	65	197	66	200	67	203	68	206
20	130	394	132	401	134	407	136	413
30	195	592	198	601	201	610	204	619
40	260	789	264	802	268	814	272	826
50	325	987	330	1002	335	1018	340	1033
60	390	1185	396	1203	402	1222	408	1240
70	455	1383	462	1404	469	1428	476	1447
80	520	1581	528	1605	536	1630	544	1654
90	585	1779	594	1806	603	1834	612	1881
100	650	1977	660	2007	670	2038	680	2058
110	715	2175	726	2208	737	2242	748	2275
120	780	2372	792	2409	804	2445	816	2482
130	845	2569	868	2608	871	2648	884	2687
140	910	2765	924	2808	938	2860	952	2893
150	975	2962	990	3007	1005	3063	1020	3099
160	1040	3157	1056	3205	1072	3254	1088	3303
170	1105	3351	1122	3403	1139	3454	1156	3506
180	1170	3545	1188	3600	1206	3664	1224	3709
190	1235	3739	1254	3797	1273	3854	1292	3912
200	1300	3932	1320	3992	1340	4053	1360	4113
210	1365	4124	1386	4187	1407	4250	1428	4314
220	1430	4315	1452	4382	1474	4448	1486	4514
230	1495	4507	1518	4576	1541	4646	1564	4715
240	1560	4698	1584	4770	1608	4843	1632	4915
250	1625	4889	1650	4964	1675	5040	1700	5115
260	1690	5080	1716	5158	1742	5238	1768	5315
270	1755	5271	1782	5352	1809	5433	1836	5514
280	1820	5462	1848	5548	1876	5630	1904	5714
290	1885	5651	1914	5738	1943	5825	1972	5912
300	1950	5842	1980	5932	2010	6022	2040	6112
310	2015	6032	2046	6125	2077	6218	2108	6311
320	2080	6222	2112	6321	2144	6416	2176	6512
330	2145	6411	2178	6518	2211	6615	2244	6713
340	2210	6600	2244	6711	2278	6813	2312	6915
350	2275	6789	2310	6907	2345	7011	2380	7116
360	2340	6978	2376	7103	2412	7210	2448	7318
370	2405	7166	2442	7299	2479	7409	2516	7520
380	2470	7355	2508	7495	2546	7609	2584	7722
390	2535	7543	2574	7691	2613	7808	2662	7924
400	2600	7732	2640	7888	2680	8007	2720	8127
410	2665	7920	2706	8085	2747	8207	2788	8330
420	2730	8108	2772	8282	2814	8407	2856	8532
425	2762	8250	2805	8388	2848	8513	2890	8640

Figure 6-11. *Weights and moments—usable fuel.*

**WEIGHT AND BALANCE DIAGRAM**

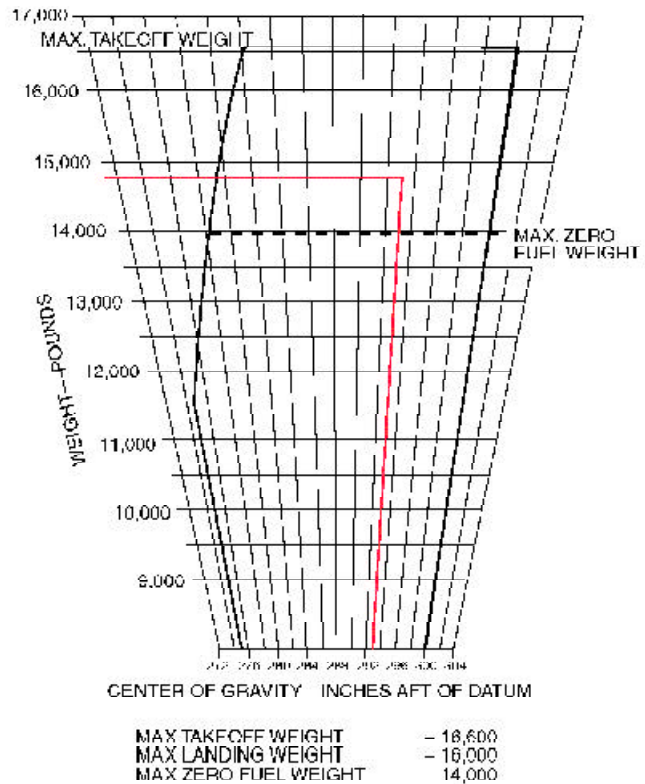


Figure 6-12. *Weight and balance diagram.*

Item	Weight	Arm	Moment/100	CG
Row 1	(-) 300	200	(-) 600	
Row 2	(-) 250	230	(-) 575	
Row 8	(+) 300	410	(+) 1,230	
Row 9	(+) 250	440	(+) 1,100	
Original conditions	14,729		43,139	
Changes	0		(+) 1,155	
New conditions	14,729		44,294	300.7

Figure 6-13. Change in CG caused by shifting passenger seats.

- Add all of the weights and all of the moment indexes. Divide the total moment index by the total weight, and multiply this by the reduction factor of 100. The total weight is 14,729 pounds, the total moment index is 43,139 lb-in/100. The CG is located at fuselage station 292.9.
- Check to determine that the CG is within limits for this weight. Refer to the Weight and Balance Diagram in Figure 6-12 on Page 6-16. Draw a horizontal line across the envelope at 14,729 pounds of weight and a vertical line from the CG of 292.9 inches aft of datum. These lines cross inside the envelope verifying the CG is within limits for this weight.

#### Determining the Changes in CG When Passengers are Shifted

Consider the airplane above for which the loaded weight and CG have just been determined, and determine the change in CG when the passengers in rows 1 and 2 are moved to rows 8 and 9. Figure 6-13 shows the changes from the conditions shown in Figure 6-7. There is no weight change, but the moment index has been increased by 1,155 pound-inches/100 to 44,294. The new CG is at fuselage station 300.7.

$$CG = \left( \frac{43,139 + 1,155}{14,729} \right) \times 100$$

$$= 300.7$$

This type of problem is usually solved by using these two formulas (below). The total amount of weight shifted is 550 pounds (300 + 250) and both rows of passengers have moved aft by 210 inches (410 – 200 and 440 – 230).

$$\Delta CG = \frac{\text{Weight shifted} \times \text{Distance shifted}}{\text{Total weight}}$$

$$= \frac{550 \times 210}{14,729}$$

$$= 7.8 \text{ inches}$$

$$CG = \text{Original CG} + \Delta CG$$

$$= 292.9 + 7.8$$

$$= 300.7 \text{ inches aft of datum}$$

The CG has been shifted aft 7.8 inches and the new CG is at station 300.7.



**Determining Changes in Weight and CG When the Airplane is Operated in its Cargo Configuration**

Consider the airplane configuration shown in Figure 6-14.

The airplane is loaded as recorded in the table in Figure 6-15. The basic operating weight (BOW) includes the pilots and their baggage so there is no separate item for them.

The arm of each cargo section is the centroid of that section, as is shown in Figure 6-14.

The fuel, at the standard temperature of 15°C weighs 6.8 pounds per gallon. Refer to the Weights and Moments—Usable Fuel in Figure 6-11 on Page 6-16 to determine the weight and moment index of 370 gallons of Jet A fuel.

The CG under these loading conditions is located at station 296.2.

**Determining the CG Shift When Cargo is Moved From One Section to Another**

When cargo is shifted from one section to another, use this formula:

$$\Delta CG = \frac{\text{Weight shifted} \times \text{Distance shifted}}{\text{Total weight}}$$

If the cargo is moved forward, the ? CG is subtracted from the original CG. If it is shifted aft, add the ? CG to the original.

**LOADING DATA  
CARGO CONFIGURATION**

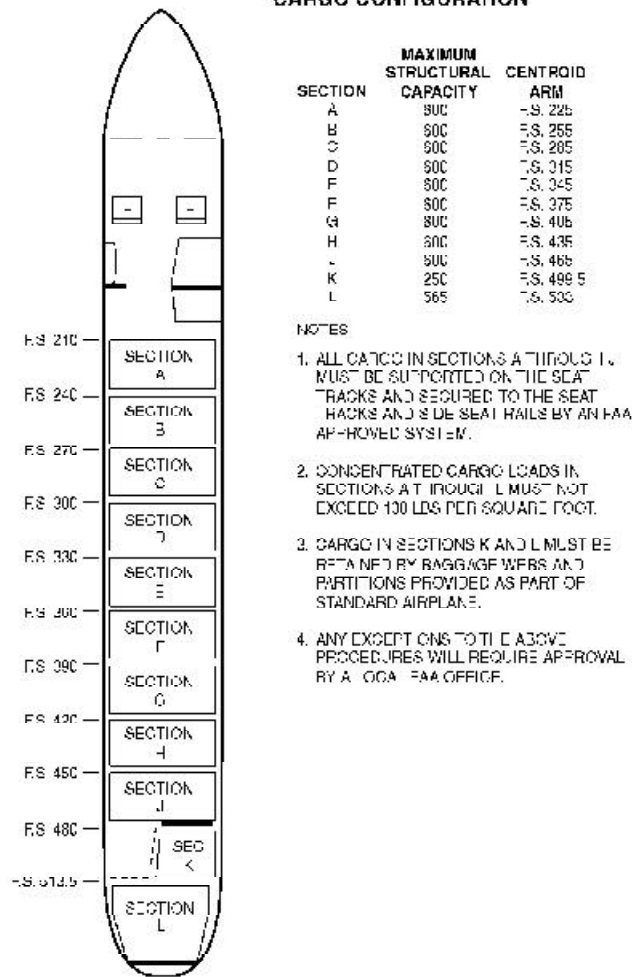


Figure 6-14. Loading data for cargo configuration.

Item	Weight	Arm	Moment/100	CG
BOW	9,005		25,934	
Cargo Section A	300	225	675	
Cargo Section B	400	255	1,020	
Cargo Section C	450	285	1,283	
Cargo Section D	600	315	1,890	
Cargo Section E	600	345	2,070	
Cargo Section F	600	375	2,250	
Cargo Section G	200	405	810	
Cargo Section H		435		
Cargo Section J		465		
Cargo Section K		499.5		
Cargo Section L		533		
Fuel Jet A @ +15°C				
Gallons 370	2,516		7,520	
	14,671		43,452	296.2

Figure 6-15. Flight manifest of a Beech 1900 in the cargo configuration.

**Determining the CG Shift When Cargo is Added or Removed**

When cargo is added or removed, add or subtract the weight and moment index of the affected cargo to the original loading chart. Determine the new CG by dividing the new moment index by the new total weight, and multiply this by the reduction factor.

$$CG = \frac{\text{Total moment index}}{\text{Total weight}} \times \text{Reduction factor}$$

**Determining Which Limits are Exceeded**

When preparing an aircraft for flight, you must consider all parameters and check to determine that no limit has been exceeded.

Consider the parameters below, and determine which limit, if any, has been exceeded.

- The airplane in this example has a basic empty weight of 9,005 pounds and a moment index of 25,934 pound-inches/100.
- The crew weight is 340 pounds, and its moment/100 is 439.
- The passengers and baggage have a weight of 3,950 pounds and a moment/100 of 13,221.
- The fuel is computed at 6.8 lbs/gal:
  - The ramp load is 340 gallons, or 2,312 pounds.
  - Fuel used for start and taxi is 20 gallons, or 136 pounds.
  - Fuel remaining at landing is 100 gallons, or 680 pounds.
- Maximum takeoff weight is 16,600 pounds.
- Maximum zero fuel weight is 14,000 pounds.
- Maximum landing weight is 16,000 pounds.

Take these steps to determine which limit, if any, is exceeded:

1. Determine the zero fuel weight, which is the weight of the aircraft with all of the useful load except the fuel on board.

Item	Weight	Moment/100	CG
Basic empty weight	9,005	25,934	
Crew	340	439	
PAX & Baggage	3,950	13,221	
Zero fuel weight	13,295	39,594	

The zero fuel weight of 13,295 pounds is less than the maximum of 14,000 pounds, so this parameter is acceptable.

2. Determine the takeoff weight and CG. The takeoff weight is the zero fuel weight plus the ramp load of fuel, less the fuel used for start and taxi. The takeoff CG is the  $(\text{moment}/100 \div \text{weight}) \times 100$ .

Item	Weight	Moment/100	CG
Zero fuel weight	13,295	39,594	
Takeoff fuel 320 gal Ramp load – fuel for start & taxi 340 – 20 = 320 gal	2,176	6,512	
Takeoff weight	15,471	46,106	298.0

The takeoff weight of 15,471 pounds is below the maximum takeoff weight of 16,600 pounds, and a check of Figure 6-12 on Page 6-16 shows that the CG at station 298.0 is also within limits.

3. Determine the landing weight and CG. This is the zero fuel weight plus the weight of fuel at landing.

Item	Weight	Moment/100	CG
Zero fuel weight	13,295	39,594	
Fuel at landing 100 gal	680	1,977	
Landing weight	13,975	41,571	297.5

The landing weight of 13,975 pounds is less than the maximum landing weight, of 14,000 pounds. According to Figure 6-12, the landing CG at station 297.5 is also within limits.



## Chapter 7

# Weight and Balance Control— Helicopters

Weight and balance considerations of a helicopter are similar to those of an airplane, except they are far more critical, and the CG range is much more limited. [Figure 7-1] The engineers who design a helicopter determine the amount of cyclic control power that is available, and establish both the longitudinal and lateral CG envelopes that allow the pilot to load the helicopter so there is sufficient cyclic control for all flight conditions.

If the CG is ahead of the forward limit, the helicopter will tilt, and the rotor disk will have a forward pull. To counteract this, rearward cyclic is required. If the CG is too far forward, there may not be enough cyclic authority to allow the helicopter to flare for a landing, and it will consequently require an excessive landing distance.

If the CG is aft of the allowable limits, the helicopter will fly with a tail-low attitude and may need more forward cyclic stick displacement than is available to maintain a hover in a no-wind condition. There might not be enough cyclic power to prevent the tail boom striking the ground. If gusty winds should cause the helicopter to pitch up during high speed flight, there might not be enough forward cyclic control to lower the nose.

Helicopters are approved for a specific maximum gross weight, but it is not safe to operate them at this weight under all conditions. High density altitude decreases the safe maximum weight as it affects the hovering, takeoff, climb, autorotation, and landing performance.

The fuel tanks on some helicopters are behind the CG, causing it to shift forward as fuel is used. Under some flight conditions, the balance may shift enough that there will not be sufficient cyclic authority to flare for landing. For these helicopters, the loaded CG should be computed for both takeoff and landing weights.

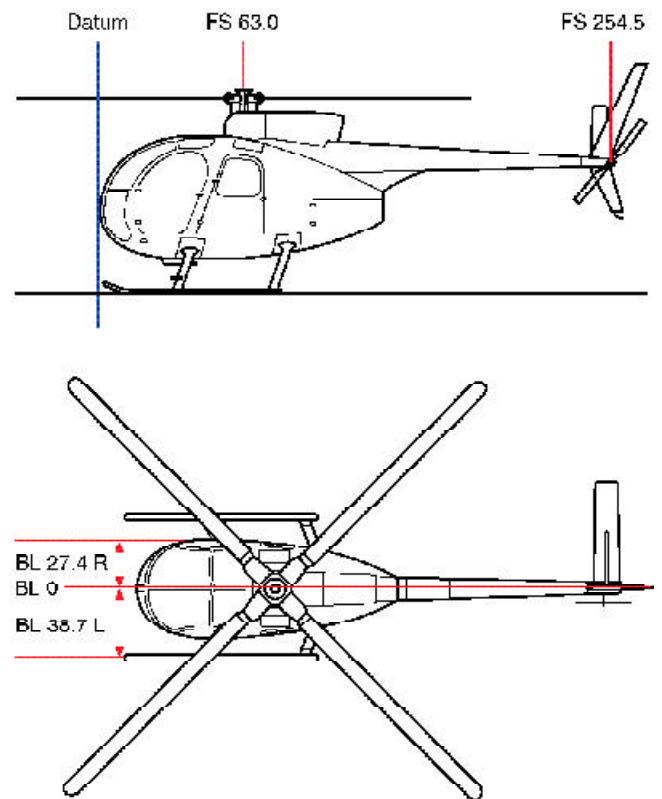


Figure 7-1. Typical helicopter datum, flight stations, and butt line locations.

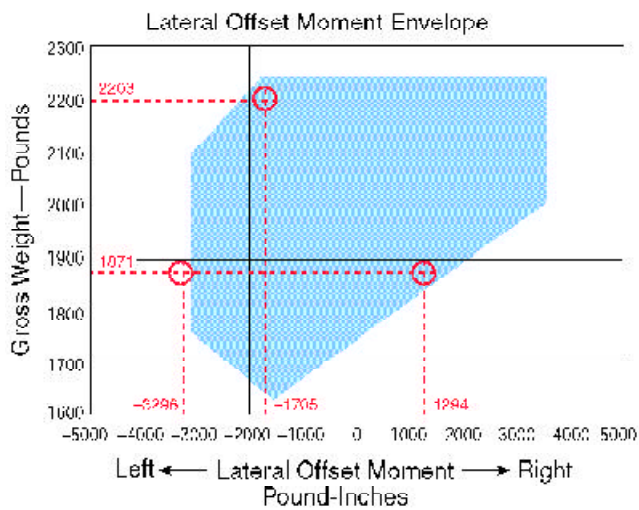
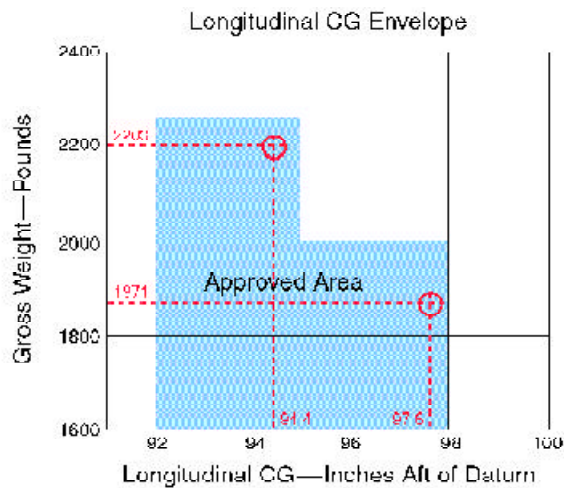


Figure 7-2. Typical helicopter CG envelopes.

Lateral balance of an airplane is usually of little concern and is not normally calculated. But some helicopters, especially those equipped for hoist operations, are sensitive to the lateral position of the CG, and their POHs include both longitudinal and lateral CG envelopes as well as information on the **maximum permissible hoist load**. Figure 7-2 is an example of such CG envelopes.

### Determining the Loaded CG of a Helicopter

The empty weight and empty-weight center of gravity of a helicopter are determined in the same way as for an airplane. The weights recorded on the scales supporting the helicopter are added and their distance from the datum are used to compute the moments at each weighing point. The total moment is divided by the total weight to determine the location of the CG in inches from the datum. The datum of some helicopters is located at the center of the rotor mast, but since this causes some arms to be positive (behind the datum) and others negative (ahead of the datum), most modern helicopters have the datum located ahead of the aircraft as do most airplanes. When the datum is ahead of the aircraft, all arms are positive.

The lateral CG is determined in the same way as the longitudinal CG, except the distances between the scales and **butt line zero** (BL 0) are used as the arms. Arms to the right of BL 0 are positive and those to the left are negative.

Item	Weight	Longitude Arm	Latitude Arm	Longitude Moment	Longitude CG	Lateral Offset Moment
Helicopter empty weight	1,545	101.4	+0.2	156,663		309
Pilot	170	64.0	-13.5	10,880		-2,295
Passenger	200	64.0	+13.5	12,800		2,700
Fuel 48 gallons	288	96.0	-8.4	27,648		-2,419
	2,203			207,991	94.4	-1,705

Figure 7-3. Determining the longitudinal CG and the lateral offset moment.

**Maximum permissible hoist load:** The maximum external load that is permitted for a helicopter to carry. This load is specified in the POH.

**Butt (or buttock) line zero:** A line through the symmetrical center of an aircraft from nose to tail. It serves as the datum for measuring the arms used to find the lateral CG. Lateral moments that cause the aircraft to rotate clockwise are positive (+), and those that cause it to rotate counter-clockwise are negative (-).

Determine whether or not a helicopter with these specifications is within both longitudinal and lateral weight and balance limits by constructing a chart like the one in Figure 7-3:

Empty weight .....	1,545 lbs
Empty-weight CG .....	101.4 in. aft of the datum
Lateral balance arm .....	0.2 in. right of BL 0
Maximum allowable gross weight .....	2,250 lbs
Pilot .....	170 lbs @ 64 in. aft of datum and 13.5 in. left of BL 0
Passenger .....	200 lbs @ 64 in. aft of datum and 13.5 in. right of BL 0
Fuel 48 gal .....	288 lbs @ 96 in. aft of datum and 8.4 in. left of BL 0

Check the helicopter CG envelopes in Figure 7-2 to determine whether or not the CG is within limits both longitudinally and laterally.

In the longitudinal CG envelope, draw a line vertically upward from the CG of 94.4 inches aft of datum and a horizontal line from the weight of 2,203 pounds gross weight. These lines cross within the approved area.

In the **lateral offset moment** envelope, draw a line vertically upward from left, or -1,705 lb-in, and a line horizontally from 2,203 pounds on the gross weight index. These lines cross within the envelope, showing the lateral balance is also within limits.

**Effects of Offloading Passengers and Using Fuel**  
Consider the helicopter in Figure 7-3. The first leg of the flight consumes 22 gallons of fuel, and at the end of this leg, the passenger deplanes. Is the helicopter still within allowable CG limits for takeoff?

To find out, make a new chart like the one in Figure 7-4 to show the new loading conditions of the helicopter at the beginning of the second leg of the flight.

Under these conditions, according to the helicopter CG envelopes in Figure 7-2, the longitudinal CG is within limits. However, the lateral offset moment is excessive since both the pilot and the fuel are on the left side of the aircraft. If the POH allows it, the pilot may fly the aircraft on its second leg from the right-hand seat. According to Figures 7-5 and 7-2, this will bring the lateral balance into limits.

Item	Weight	Longitude Arm	Latitude Arm	Longitude Moment	Longitude CG	Lateral Offset Moment
Helicopter empty weight	1,545	101.4	-0.2	156,663		309
Pilot	170	64.0	-13.5	10,880		-2,295
Fuel 26 gallons	156	96.0	-8.4	14,976		-1,310
	1,871			182,519	97.6	-3,296

Figure 7-4. Determining the longitudinal CG and the lateral offset moment for the second leg of the flight.

Item	Weight	Longitude Arm	Latitude Arm	Longitude Moment	Longitude CG	Lateral Offset Moment
Helicopter empty weight	1,545	101.4	+0.2	156,663		309
Pilot	170	64.0	+13.5	10,880		2,295
Fuel 26 gallons	156	96.0	-8.4	14,976		-1,310
	1,871			182,519	97.6	1,294

Figure 7-5. Determining the longitudinal CG and the lateral offset moment for the second leg of the flight with the pilot flying from the right seat.

**Lateral offset moment:** The moment, in lb-in, of a force that tends to rotate a helicopter about its longitudinal axis. The lateral offset moment is the product of the weight of the object and its distance from butt line zero. Lateral offset moments that tend to rotate the aircraft clockwise are positive, and those that tend to rotate it counterclockwise are negative.





## Chapter 8

# Use of Computers for Weight and Balance Computations

Almost all weight and balance problems involve only simple math. This allows slide rules and hand-held electronic calculators to relieve us of much of the tedium involved with these problems. This chapter gives a comparison of the methods of determining the CG of an airplane while it is being weighed. First, determine the CG using a simple electronic calculator, then solve the same problem using an E6-B flight computer. Then, finally, solve it using a dedicated electronic flight computer.

Later in this chapter are examples of typical weight and balance problems (solved with an electronic calculator) of the kind that pilots and AMTs will encounter throughout their aviation endeavors.

### Using an Electronic Calculator to Solve Weight and Balance Problems

Determining the CG of an airplane in inches from the main-wheel weighing points can be done with any simple electronic calculator that has addition (+), subtraction (-), multiplication (?), and division (÷) functions. Scientific calculators with such additional functions as memory (M), parentheses (()), plus or minus (+/-), exponential (y<sup>x</sup>), reciprocal (1/?), and percentage (%) functions allow you to solve more complex problems or to solve simple problems using fewer steps.

The chart in Figure 8-1 includes data on the airplane used in this example problem.

Weighing Point	Weight (lbs)	Arm (in)
Right side	830	0
Left side	836	0
Nose	340	-78
Total	2,006	

Figure 8-1. Weight and balance data of a typical nose wheel airplane.

According to Figure 8-1, the weight of the nose wheel (F) is 340 pounds, the distance between main wheels and nose wheel (L) is -78 inches, and the total weight (W) of the airplane is 2,006 pounds. (L is negative because the nose wheel is ahead of the main wheels.)

To determine the CG, use this formula:

$$\text{CG} = \frac{F \times L}{W}$$
$$= \frac{340 \times -78}{2,006}$$

Key the data into the calculator as shown in red, and when the equal (=) key is pressed, the answer (shown here in blue) will appear.

$$(340)(?)(78)(+/-)(\div)(2006)(=)-13.2$$

The arm of the nose wheel is negative, so the CG is -13.2, or 13.2 inches ahead of the main-wheel weighing points.

### Using an E6-B Flight Computer to Solve Weight and Balance Problems

The E6-B uses a special kind of slide rule. Instead of its scales going from 1 to 10, as on a normal slide rule, both scales go from 10 to 100. The E6-B cannot be used for addition or subtraction, but it is useful for making calculations involving multiplication and division. Its accuracy is limited, but it is sufficiently accurate for most weight and balance problems.

#### Positive/Negative Key

The (+/-) key changes the number just keyed in from a positive to a negative number.

The same problem that was just solved with the electronic calculator can be solved on an E6-B by following these steps:

$$CG = \frac{F \times L}{W}$$

$$= \frac{340 \times -78}{2,006}$$

First, multiply 340 by 78 (disregard the – sign): [Figure 8-2a]

- Place 10 on the inner scale (this is the index) opposite 34 on the outer scale (this represents 340) (Step 1).
- Opposite 78 on the inner scale, read 26.5 on the outer scale (Step 2).
- Determine the value of these digits by estimating:  $300 \times 80 = 24,000$ , so  $340 \times 78 = 26,500$ .

Then, divide 26,500 by 2,006: [Figure 8-2b]

- On the inner scale, place 20, which represents 2,006, opposite 26.5 on the outer scale. (26.5 represents 26,500) (Step 3).
- Opposite the index, 10, on the inner scale, read 13.2 on the outer scale (Step 4).
- Determine the value of 13.2 by estimating:  $20,000 \div 2000 = 10$ , so  $26,500 \div 2,006 = 13.2$ .
- The arm (-78) is negative, so the CG is also negative.

The CG is -13.2 inches, or 13.2 inches ahead of the datum.

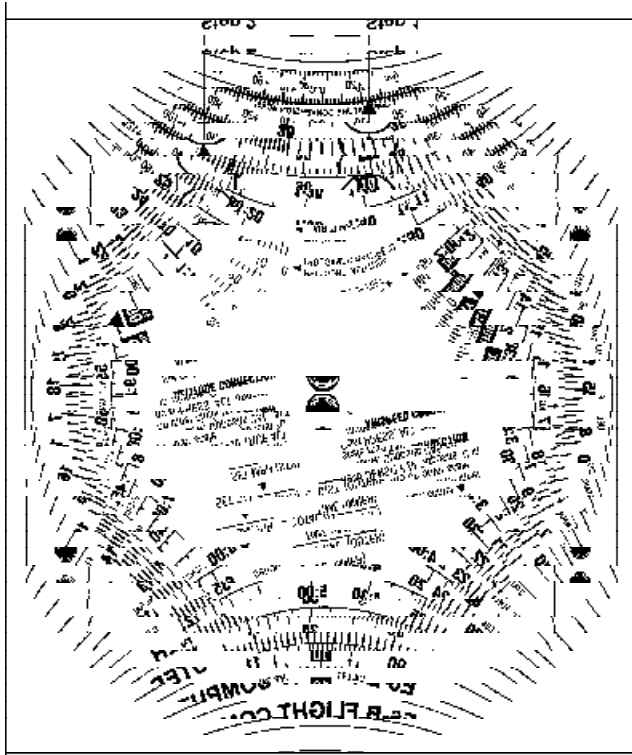


Figure 8-2a. E6-B computer set up to multiply 340 by 78.

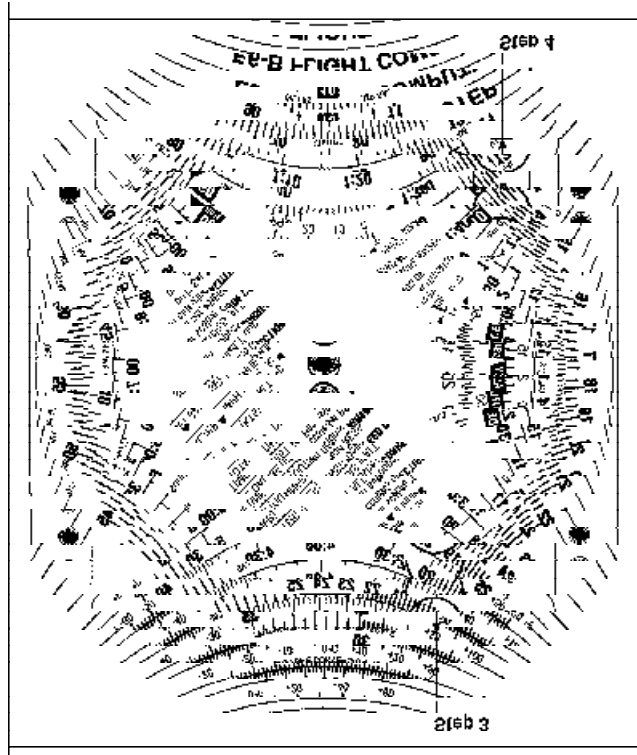


Figure 8-2b. E6-B computer set up to divide 26,500 by 2,006.



*Nose Wheel Airplane with Datum  
Ahead of the Main Wheels*

The datum (D) is 128 inches ahead of the main-wheel weighing points, the weight of the nose wheel (F) is 340 pounds, and the distance between main wheels and nose wheel (L) is 78 inches. The total weight (W) of the airplane is 2,006 pounds. Refer to Figure 3-5 on Page 3-5.

Use this formula:

$$CG = D - \left( \frac{F \times L}{W} \right)$$

1. Determine the CG in inches from the main wheels:

$$(340)(78)(\div)(2006)(=) 13.2$$

2. Determine the CG in inches from the datum:

$$(128)(-)(13.2)(=) 114.8$$

The CG is 114.8 inches behind the datum.

*Nose Wheel Airplane with Datum  
Behind the Main Wheels*

The datum (D) is 75 inches behind the main-wheel weighing points, the weight of the nose wheel (F) is 340 pounds, and the distance between main wheels and nose wheel (L) is 78 inches. The total weight (W) of the airplane is 2,006 pounds. Refer to Figure 3-6 on Page 3-6.

Use this formula:

$$CG = - \left( D + \frac{F \times L}{W} \right)$$

1. Determine the CG in inches from the main wheels:

$$(340)(78)(\div)(2006)(=) 13.2$$

2. Determine the CG in inches from the datum:

$$(75)(+)(13.2)(=) 88.2$$

The minus sign before the parenthesis in the formula means the answer is negative. The CG is 88.2 inches ahead of the datum (-88.2).

*Tail Wheel Airplane with Datum  
Ahead of the Main Wheels*

The datum (D) is 7.5 inches ahead of the main-wheel weighing points, the weight of the tail wheel (R) is 67 pounds, and the distance between main wheels and tail wheel (L) is 222 inches. The total weight (W) of the airplane is 1,218 pounds. Refer to Figure 3-7 on Page 3-6.

Use this formula:

$$CG = D + \left( \frac{R \times L}{W} \right)$$

1. Determine the CG in inches from the main wheels:

$$(67)(222)(\div)(1218)(=) 12.2$$

2. Determine the CG in inches from the datum:

$$(7.5)(+)(12.2)(=) 19.7$$

The CG is 19.7 inches behind the datum.

*Tail Wheel Airplane with Datum  
Behind the Main Wheels*

The datum (D) is 80 inches behind the main-wheel weighing points, the weight of the tail wheel (R) is 67 pounds, and the distance between main wheels and tail wheel (L) is 222 inches. The total weight (W) of the airplane is 1,218 pounds. Refer to Figure 3-8 on Page 3-7.

Use this formula:

$$CG = -D + \left( \frac{R \times L}{W} \right)$$

1. Determine the CG in inches from the main wheels:

$$(67)(222)(\div)(1218)(=) 12.2$$

2. Determine the CG in inches from the datum:

$$(80)(+/-)(+)(12.2)(=) -67.8$$

The CG is 67.8 inches ahead of the datum.

Weighing Point	Weight (lbs)	Arm (in)	Moment (lb-in)	CG
Right side	830	128	106,240	
Left side	836	128	107,008	
Nose	340	50	17,000	
Total	2,006		230,248	114.8

Figure 8-5. Specifications for determining the CG of an airplane using weights and arms.

#### Determining CG, Given Weights and Arms

Some weight and balance problems involve weights and arms to determine the moments. Divide the total moment by the total weight to determine the CG. Figure 8-5 contains the specifications for determining the CG using weights and arms.

Determine the CG by using the data in Figure 8-5 and following these steps:

1. Determine the total weight and record this number:

$$(830)(+)(836)(+)(340)(=)2006$$

2. Determine the moment of each weighing point and record them:

$$(830)(?)(128)(=)106240$$

$$(836)(?)(128)(=)107008$$

$$(340)(?)(50)(=)17000$$

3. Determine the total moment and divide this by the total weight:

$$(106240)(+)(107008)(+)(17000)(=)(\div)(2006)(=)114.8$$

This airplane weighs 2,006 pounds and its CG is 114.8 inches from the datum.

#### Determining CG, Given Weights and Moment Indexes

Other weight and balance problems involve weights and moment indexes, such as moment/100, or moment/1,000. To determine the CG, add all the weights and all the moment indexes. Then divide the total moment index by the total weight and multiply the answer by the reduction factor. Figure 8-6 contains the specifications for determining the CG using weights and moment indexes.

Determine the CG by using the data in Figure 8-6 and following these steps:

1. Determine the total weight and record this number:

$$(830)(+)(836)(+)(340)(=)2006$$

2. Determine the total moment index, divide this by the total weight, and multiply it by the reduction factor of 100:

$$(1,062.4)(+)(1,070.1)(+)(170)(=)(2302.5)(\div)(2006)(=)$$

$$(1.148)(?)(100)(=)114.8$$

This airplane weighs 2,006 pounds and its CG is 114.8 inches from the datum.

Weighing Point	Weight (lbs)	Moment/100	CG
Right side	830	1,062.4	
Left side	836	1,070.1	
Nose	340	170	
Total	2,006	2,302.5	114.8

Figure 8-6. Specifications for determining the CG of an airplane using weights and moment indexes.

### Determining CG in Percent of Mean Aerodynamic Chord

- The loaded CG is 42.47 inches aft of the datum.
- MAC is 61.6 inches long.
- LEMAC is at station 20.1.

1. Determine the distance between the CG and LEMAC:

$$(42.47)(-)(20.1)(=) 22.37$$

2. Then, use this formula:

$$\text{CG in \% MAC} = \frac{\text{Distance aft of LEMAC} \times 100}{\text{MAC}}$$

$$(22.37)(?)(100)(\div)(61.6)(=) 36.3$$

The CG of this airplane is located at 36.3% of the mean aerodynamic chord.

### Determining Lateral CG of a Helicopter

It is often necessary when working weight and balance of a helicopter to determine not only the longitudinal CG, but the lateral CG as well. Lateral CG is measured from butt line zero (BL 0). All items and moments to the left of BL 0 are negative, and those to the right of BL 0 are positive. Figure 8-7 contains the specifications for determining the lateral CG of a typical helicopter.

Determine the lateral CG by using the data in Figure 8-7 and following these steps:

1. Add all of the weights:

$$(1545)(+)(170)(+)(200)(+)(288)(=) 2203$$

2. Multiply the lateral arm (the distance between butt line zero and the CG of each item) by its weight to get the lateral offset moment of each item. Moments to the right of BL 0 are positive and those to the left are negative.

$$\begin{aligned} (1545)(?)(.2)(=) 309 \\ (170)(?)(13.5)(+/-)(=) -2295 \\ (200)(?)(13.5)(=) 2700 \\ (288)(?)(8.4)(+/-)(=) -2419 \end{aligned}$$

3. Determine the algebraic sum of the lateral offset moments.

$$(309)(+)(2295)(+/-)(+)(2700)(+)(2419)(+/-)(=) -1705$$

4. Divide the sum of the moments by the total weight to determine the lateral CG.

$$(1705)(+/-)(\div)(2203)(=) -0.77$$

The lateral CG is 0.77 inch to the left of butt line zero.

### Determining ? CG Caused by Shifting Weights

Fifty pounds of baggage is shifted from the aft baggage compartment at station 246 to the forward compartment at station 118. The total airplane weight is 4,709 pounds. How much does the CG shift?

1. Determine the number of inches the baggage is shifted:

$$(246)(-)(118)(=) 128$$

2. Use this formula:

$$\Delta\text{CG} = \frac{\text{Weight shifted} \times \text{Distance weight is shifted}}{\text{Total weight}}$$

$$(50)(?)(128)(\div)(4709)(=) 1.36$$

The CG is shifted forward 1.36 inches.

Item	Weight	Lateral Arm	Lateral Offset Moment	Lateral CG
Helicopter empty weight	1,545	+0.2	309	
Pilot	170	-13.5	-2,295	
Passenger	200	+13.5	2,700	
Fuel 48 gal	288	-8.4	-2,419	
Total	2,203		-1,705	-0.77

Figure 8-7. Specifications for determining the lateral CG of a helicopter.



**Determining Weight Shifted to Cause Specified ? CG**

How much weight must be shifted from the aft baggage compartment at station 246 to the forward compartment at station 118, to move the CG forward 2 inches? The total weight of the airplane is 4,709 pounds.

1. Determine the number of inches the baggage is shifted:

$$\text{Weight shifted} = \frac{\Delta\text{CG} \times \text{Total weight}}{\text{Distance weight is shifted}}$$

$$(246) - (118) (=) 128$$

2. Use this formula:

$$(2)(4709)(\div)(128)(=) 73.6$$

Moving 73.6 pounds of baggage from the aft compartment to the forward compartment will shift the CG forward 2 inches.

**Determining Distance Weight is Shifted to Move CG a Specific Distance**

How many inches aft will a 56-pound battery have to be moved to shift the CG aft by 1.5 inches? The total weight of the airplane is 4,026 pounds.

Use this formula:

$$\text{Distance weight is shifted} = \frac{\Delta\text{CG} \times \text{Total weight}}{\text{Weight shifted}}$$

$$(1.5)(4026)(\div)(56)(=) 107.8$$

Moving the battery aft by 107.8 inches will shift the CG aft 1.5 inches.

**Determining Total Weight of an Aircraft That Will Have a Specified ? CG When Cargo is Moved**

What is the total weight of an airplane if moving 500 pounds of cargo 96 inches forward shifts the CG 2.0 inches?

Use this formula:

$$\text{Total weight} = \frac{\text{Weight shifted} \times \text{Dist. weight is shifted}}{\Delta\text{CG}}$$

$$(500)(96)(\div)(2)(=) 24000$$

Moving 500 pounds of cargo 96 inches forward will cause a 2.0-inch shift in CG of a 24,000-pound airplane.

**Determining Amount of Ballast Needed to Move CG to a Desired Location**

How much ballast must be mounted at station 228 to move the CG to its forward limit of +33? The airplane weighs 1,876 pounds and the CG is at +32.2, a distance of 0.8 inch out of limit.

Use this formula:

$$\text{Ballast weight} = \frac{\text{Aircraft empty weight} \times \text{Dist. out of limits}}{\text{Distance ballast to desired CG}}$$

$$(1876)(0.8)(\div)(195)(=) 7.7$$

Attaching 7.7 pounds of ballast to the bulkhead at station 228 will move the CG to +33.0.



# Glossary

General Aviation Manufacturers Association (GAMA)

**14 CFR, Part 121.** The Federal regulations governing domestic, flag, and supplemental operations.

**14 CFR, Part 135.** The Federal regulations governing Commuter and On-Demand Operations.

**adverse loaded CG check.** A weight and balance check to determine that no condition of legal loading of an aircraft can move the CG outside of its allowable limits.

**Aircraft Specifications.** Documentation containing the pertinent specifications for aircraft certificated under the CARs.

**Airplane Flight Manual (AFM).** An FAA-approved document, prepared by the holder of a Type Certificate for an airplane or rotorcraft, that specifies the operating limitations and contains the required markings and placards and other information applicable to the regulations under which the aircraft was certificated.

**Approved Type Certificate.** A certificate of approval issued by the FAA for the design of an airplane, engine, or propeller.

**arm (GAMA).** The horizontal distance from the reference datum to the center of gravity (CG) of an item.

**balanced laterally.** Balanced in such a way that the wings tend to remain level.

**ballast.** A weight installed or carried in an aircraft to move the center of gravity to a location within its allowable limits.

**permanent ballast (fixed ballast).** A weight permanently installed in an aircraft to bring its center of gravity into allowable limits. Permanent ballast is part of the aircraft empty weight.

**temporary ballast.** Weights that can be carried in a cargo compartment of an aircraft to move the location of the CG for a specific flight condition. Temporary ballast must be removed when the aircraft is weighed.

**basic empty weight (GAMA).** Standard empty weight plus optional equipment.

**basic operating index.** The moment of the airplane at its basic operating weight divided by the appropriate reduction factor.

**basic operating weight (BOW).** The empty weight of the aircraft plus the weight of the required crew, their baggage and other standard items such as meals and potable water.

**bilge area.** The lowest part of an aircraft structure in which water and contaminants collect.

**butt (or buttock) line zero.** A line through the symmetrical center of an aircraft from nose to tail. It serves as the datum for measuring the arms used to determine the lateral CG. Lateral moments that cause the aircraft to rotate clockwise are positive (+), and those that cause it to rotate counterclockwise are negative (–).

**calendar month.** A time period used by the FAA for certification and currency purposes. A calendar month extends from a given day until midnight of the last day of that month.

**center of gravity (CG) (GAMA).** The point at which an airplane would balance if suspended. Its distance from the reference datum is determined by dividing the total moment by the total weight of the airplane.

**center of lift.** The location along the chord line of an airfoil at which all the lift forces produced by the airfoil are considered to be concentrated.

**centroid.** The distance in inches aft of the datum of the center of a compartment or a fuel tank for weight and balance purposes.

**CG arm (GAMA).** The arm obtained by adding the airplane's individual moments and dividing the sum by the total weight.

**CG limits (GAMA).** The extreme center of gravity locations within which the airplane must be operated at a given weight.

**CG limits envelope.** An enclosed area on a graph of the airplane loaded weight and the CG location. If lines drawn from the weight and CG cross within this envelope, the airplane is properly loaded.

**CG moment envelope.** An enclosed area on a graph of the airplane loaded weight and loaded moment. If lines drawn from the weight and loaded moment cross within this envelope, the airplane is properly loaded.

**chord.** A straight-line distance across a wing from leading edge to trailing edge.

**delta (?).** This symbol,  $\Delta$ , means a change in something.  $\Delta$ CG means a change in the center of gravity location.

**dynamic load.** The actual weight of the aircraft multiplied by the load factor, or the increase in weight caused by acceleration.

**empty weight.** The weight of the airframe, engines, all permanently installed equipment and unusable fuel. Depending upon the part of the Federal regulations under which the aircraft was certificated, either the undrainable oil or full reservoir of oil is included.

**empty-weight center of gravity (EWCG).** The center of gravity of an aircraft when it contains only the items specified in the aircraft empty weight.

**empty-weight center of gravity range.** The distance between the allowable forward and aft empty-weight CG limits.

**equipment list.** A list of items approved by the FAA for installation in a particular aircraft. The list includes the name, part number, weight, and arm of the component. Installation or removal of an item in the equipment list is considered to be a minor alteration.

**fleet weight.** An average weight accepted by the FAA for aircraft of identical make and model that have the same equipment installed. When a fleet weight control program is in effect, the fleet weight of the aircraft can be used rather than every individual aircraft having to be weighed.

**fuel jettison system.** A fuel subsystem that allows the flight crew to dump fuel in an emergency to lower the weight of an aircraft to the maximum landing weight if a return to landing is required before sufficient fuel is burned off. This system must allow enough fuel to be jettisoned that the aircraft can still meet the climb requirements specified in 14 CFR, Part 25.

**fulcrum.** The point about which a lever balances.

**index point.** A location specified by the aircraft manufacturer from which arms used in weight and balance computations are measured. Arms measured from the index point are called index arms.

**interpolate.** To determine a value in a series between two known values.

**landing weight.** The takeoff weight of an aircraft less the fuel burned and/or dumped en route.

**large aircraft (14 CFR, Part 1).** An aircraft of more than 12,500 pounds, maximum certificated takeoff weight.

**lateral balance.** Balance around the roll, or longitudinal, axis.

**lateral offset moment.** The moment, in lb-in, of a force that tends to rotate a helicopter about its longitudinal axis. The lateral offset moment is the product of the weight of the object and its distance from butt line zero. Lateral offset moments that tend to rotate the aircraft clockwise are positive, and those that tend to rotate it counterclockwise are negative.

**LEMACH.** Leading Edge of the Mean Aerodynamic Chord.

**load cell.** A component in an electronic weighing system that is placed between the jack and the jack pad on the aircraft. The load cell contains strain gauges whose resistance changes with the weight on the cell.

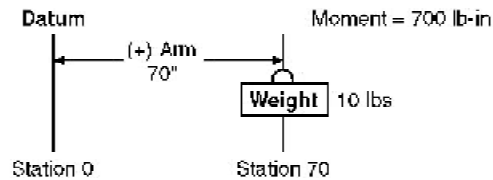
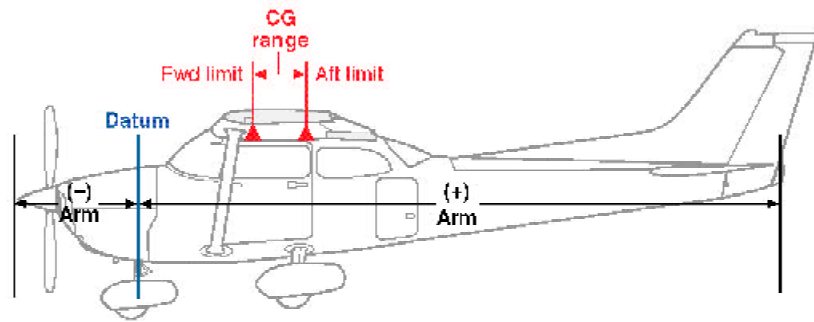
**load factor.** The ratio of the maximum load an aircraft can sustain to the total weight of the aircraft. Normal category aircraft must have a load factor of at least 3.8, utility category aircraft 4.4, and acrobatic category aircraft, 6.0.

**loading graph.** A graph of load weight and load moment indexes. Diagonal lines for each item relate the weight to the moment index without having to use mathematics.

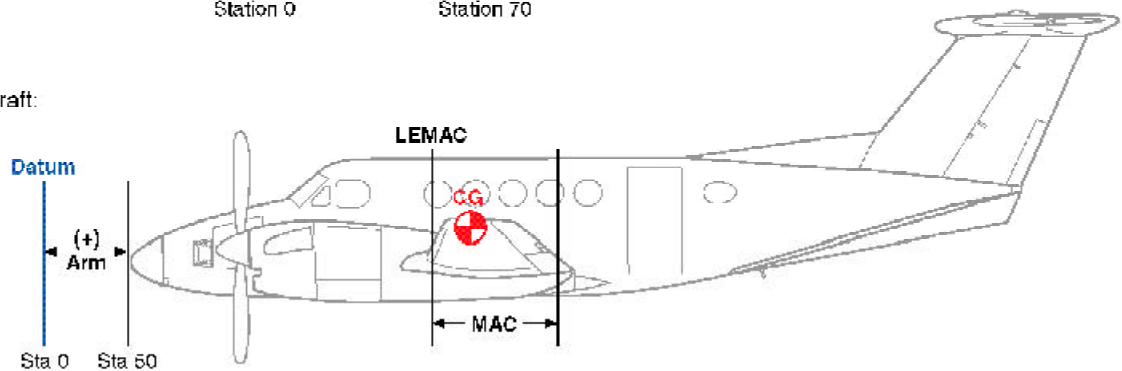
**loading schedule.** A method and procedure used to show that an aircraft is properly loaded and will not exceed approved weight and balance limitations during operation.

## Weight and Balance Definitions

Single-engine aircraft:



Multiengine aircraft:



**longitudinal axis.** An imaginary line through an aircraft from nose to tail, passing through its center of gravity.

**longitudinal balance.** Balance around the pitch, or lateral, axis.

**MAC.** Mean Aerodynamic Chord.

**major alteration.** An alteration not listed in the aircraft, aircraft engine, or propeller specifications, (1) that might appreciably affect weight, balance, structural strength, performance, powerplant operation, flight characteristics, or other qualities affecting airworthiness; or (2) that is not done according to accepted practices or cannot be done by elementary operations.

**maximum landing weight (GAMA).** Maximum weight approved for the landing touchdown.

**maximum permissible hoist load.** The maximum external load that is permitted for a helicopter to carry. This load is specified in the POH.

**maximum ramp weight (GAMA).** Maximum weight approved for ground maneuver. It includes weight of start, taxi, and runup fuel.

**maximum takeoff weight (GAMA).** Maximum weight approved for the start of the takeoff run.

**maximum taxi weight.** Maximum weight approved for ground maneuvers. This is the same as maximum ramp weight.

**maximum weight.** The maximum authorized weight of the aircraft and all of its equipment as specified in the Type Certificate Data Sheets (TCDS) for the aircraft.

**maximum zero fuel weight.** The maximum authorized weight of an aircraft without fuel. This is the sum of the BOW and payload.

**maximum zero fuel weight (GAMA).** Maximum weight, exclusive of usable fuel.

**METO horsepower (maximum except takeoff).** The maximum power allowed to be continuously produced by an engine. Takeoff power is usually limited to a given amount of time, such as 1 minute or 5 minutes.

**minimum fuel.** The amount of fuel necessary for one-half hour of operation at the rated maximum-continuous power setting of the engine, which, for weight and balance purposes, is  $^{1}_{12}$  gallon per maximum-except-takeoff (METO) horsepower. It is the maximum amount of fuel that could be used in weight and balance computations when low fuel might adversely affect the most critical balance conditions. To determine the weight of the minimum fuel in pounds, divide the METO horsepower by 2.

**minor alteration.** An alteration other than a major alteration. This includes alterations that are listed in the aircraft, aircraft engine, or propeller specifications.

**moment.** A force that causes or tries to cause an object to rotate.

**moment (GAMA).** The product of the weight of an item multiplied by its arm. (Moment divided by a constant is used to simplify balance calculations by reducing the number of digits; *see* reduction factor.)

**moment index.** The moment (weight times arm) divided by a reduction factor such as 100 or 1,000 to make the number smaller and reduce the chance of mathematical errors in computing the center of gravity.

**moment limits vs. weight envelope.** An enclosed area on a graph of three parameters. The diagonal line representing the moment/100 crosses the horizontal line representing the weight at the vertical line representing the CG location in inches aft of the datum. When the lines cross inside the envelope, the aircraft is loaded within its weight and CG limits.

**net weight.** The weight of the aircraft less the weight of any chocks or other devices used to hold the aircraft on the scales.

**normal category.** A category of aircraft certificated under 14 CFR, Part 23 and CAR, Part 3 that allows the maximum weight and CG range while restricting the maneuvers that are permitted.

**PAX.** Passengers.

**payload (GAMA).** Weight of occupants, cargo, and baggage.

**Pilot's Operating Handbook (POH).** An FAA-approved document published by the airframe manufacturer that lists the operating conditions for a particular model of aircraft and its engines.

**potable water.** Water carried in an aircraft for the purpose of drinking.

**ramp weight.** The zero fuel weight plus all of the usable fuel on board.

**reference datum (GAMA).** An imaginary vertical plane from which all horizontal distances are measured for balance purposes.

**reduction factor.** A number, usually 100 or 1,000 by which a moment is divided to produce a smaller number that is less likely to cause mathematical errors when computing the center of gravity.

**residual fuel.** Fuel that remains in the sumps and fuel lines when the fuel system is drained from the inlet to the fuel metering system, with the aircraft in level flight attitude. The weight of the residual fuel is part of the empty weight of the aircraft.

**service ceiling.** The highest altitude at which an aircraft can maintain a steady rate of climb of 100 feet per minute.

**small aircraft (14 CFR, Part 1).** An aircraft of 12,500 pounds or less, maximum certificated takeoff weight.



**standard average passenger weight.** This includes 20 pounds of carry-on baggage for adult passengers.

summer (May 1 through October 31)	
average (60% M, 40% F) .....	180 lbs
male .....	195 lbs
female .....	155 lbs
winter (November 1 through April 30)	
average (60% M, 40% F) .....	185 lbs
male .....	200 lbs
female .....	160 lbs
children between ages 2 and 12 years	
summer and winter .....	80 lbs

(Children under 2 are considered “babes in arms” and their weight has been factored into the weight of the adult passengers.)

**standard empty weight (GAMA).** Weight of a standard airplane including unusable fuel, full operating fluids, and full oil.

**static load.** The load imposed on an aircraft structure due to the weight of the aircraft and its contents.

**station (GAMA).** A location along the airplane fuselage usually given in terms of distance from the reference datum.

**strain sensor.** A device that converts a physical phenomenon into an electrical signal. Strain sensors in a wheel axle sense the amount the axle deflects and create an electrical signal that is proportional to the force that caused the deflection.

**takeoff weight.** The weight of an aircraft just before brake release. It is the ramp weight less the weight of the fuel burned during start and taxi.

**tare weight.** The weight of any chocks or devices that are used to hold an aircraft on the scales when it is weighed. The tare weight must be subtracted from the scale reading to get the net weight of the aircraft.

**TEMAC.** Trailing Edge of the Mean Aerodynamic Chord.

**Type Certificate Data Sheets (TCDS).** The official specifications issued by the FAA for an aircraft, engine, or propeller.

**undrainable oil.** Oil that does not drain from an engine lubricating system when the aircraft is in the normal ground attitude and the drain valve is left open. The weight of the undrainable oil is part of the empty weight of the aircraft.

**unusable fuel (GAMA).** Fuel remaining after a runout test has been completed in accordance with governmental regulations.

**usable fuel (GAMA).** Fuel available for flight planning.

**useful load (GAMA).** Difference between takeoff weight, or ramp weight if applicable, and basic empty weight.

**utility category.** A category of aircraft certificated under 14 CFR, Part 23 and CAR, Part 3 that permits limited acrobatic maneuvers but restricts the weight and the CG range.

**wing chord.** A straight-line distance across a wing from leading edge to trailing edge.

**zero fuel weight.** The weight of an aircraft without fuel.



# Index

## A

adverse-loaded CG checks ..... 5-4  
aircraft specifications ..... 2-7  
arm ..... 2-1

## B

balance control ..... 1-4  
ballast ..... 3-3, 5-7  
bilge area ..... 3-2

## C

cargo ..... 6-5  
cargo changes—effects of ..... 6-5  
cargo configuration ..... 6-18  
cargo pallet ..... 6-9  
center of gravity (CG) ..... 1-1  
CG  
    determining ..... 2-2, 3-4, 4-1  
    shifting ..... 2-4–2-6  
CG limits envelope ..... 4-2–4-3  
CG moment envelope ..... 4-5  
CG range chart ..... 2-11  
chart method ..... 4-7  
chord ..... 3-7  
computational method ..... 4-1

## D

datum, location of ..... 3-5–3-6  
density altitude, high ..... 1-2  
draining of fuel and oil ..... 3-3  
dynamic loads ..... 1-2

## E

E6-B flight computer ..... 8-1  
electronic calculators ..... 8-1  
electronic flight computers ..... 8-3  
empty weight ..... 1-1  
    basic ..... 2-1  
    standard ..... 2-1  
empty-weight center of gravity (EWCG) ..... 1-1, 3-5  
    helicopter ..... 7-2  
    range ..... 5-4  
equipment list ..... 2-13, 5-1

## F

fleet weight ..... 6-1–6-2, 6-2  
floor loading limits ..... 6-9  
fuel jettison system ..... 6-12

## I

interpolation ..... 4-8–4-9

## L

landing weight ..... 6-10  
law of the lever ..... 2-2  
leading edge of MAC (LEMAC) ..... 3-8  
lift, center of ..... 1-4  
load factor ..... 1-2  
loading graph ..... 4-2, 4-4  
loading schedule ..... 6-1

## M

major alteration .....	5-1
maximum weight .....	1-1
mean aerodynamic chord (MAC) .....	3-7
minor alteration .....	5-1
moment .....	2-2
large .....	2-13
moment index .....	4-2
moment limits vs. weight envelope .....	4-8, 4-10

## N

normal category .....	2-11
-----------------------	------

## P

passenger configuration .....	6-13
payload—maximum .....	6-10

## R

reference datum .....	2-1
-----------------------	-----

## S

service ceiling .....	1-2, 1-3
specific gravity .....	3-2
stability .....	1-4
stabilizer trim setting .....	6-5
static loads .....	1-2
stations .....	2-4

## T

tare weight .....	2-4, 3-4
Type Certificate Data Sheets (TCDS) .....	2-7

## U

utility category .....	2-11
------------------------	------

## W

weighing	
equipment for .....	3-1
jacking aircraft .....	3-3
platforms .....	3-2
preparation for .....	3-2
requirements .....	6-1
weight	
changes .....	1-3, 5-1
control .....	1-2
effects of .....	1-2
individual aircraft .....	6-1
weight and balance .....	1-1
basic equation .....	2-5
data .....	4-1
definitions .....	Glossary-3
documentation .....	2-7
helicopter .....	7-1
importance .....	1-1
large aircraft .....	6-1
monitoring .....	6-2
multiengine airplane .....	4-6
Part 135 aircraft .....	6-13
Part 23 airplane .....	4-1
requirements .....	3-1
revision .....	5-3
theory .....	2-1
typical problems .....	8-3
worksheet .....	4-2